


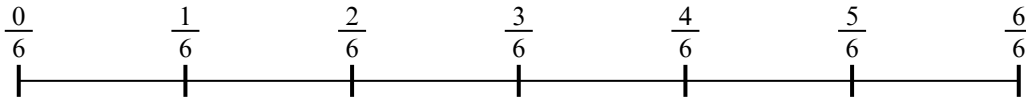


Используйте числовую прямую для решения задачи. Первая отмечена для Вас.

1) $\frac{1}{7} : 6$




2) $\frac{1}{6} : 2$



3) $\frac{1}{5} : 3$




4) $\frac{1}{7} : 6$



5) $\frac{1}{7} : 5$



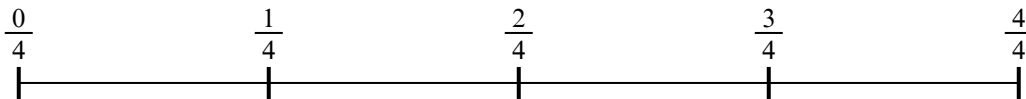
6) $\frac{1}{7} : 6$



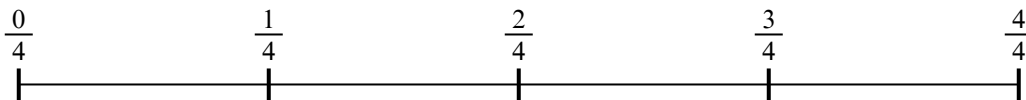
7) $\frac{1}{5} : 6$



8) $\frac{1}{4} : 3$



9) $\frac{1}{4} : 4$

**ОТВЕТЫ**

1. _____

2. _____

3. _____

4. _____

5. _____

6. _____

7. _____

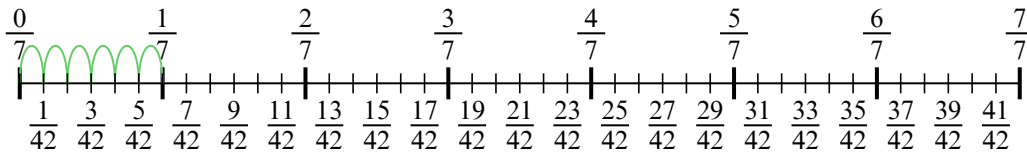
8. _____

9. _____

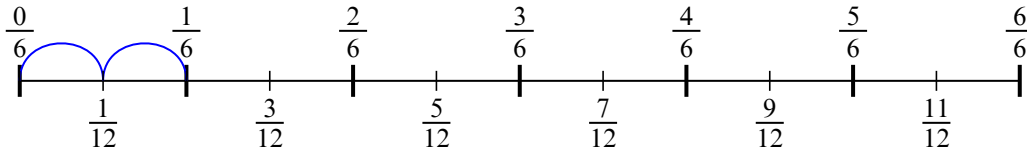


Используйте числовую прямую для решения задачи. Первая отмечена для Вас.

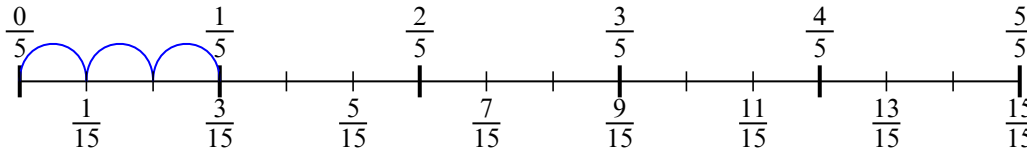
1) $\frac{1}{7} : 6$



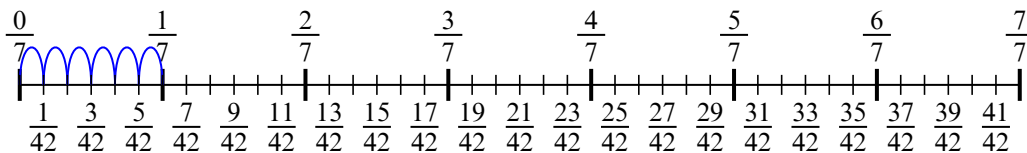
2) $\frac{1}{6} : 2$



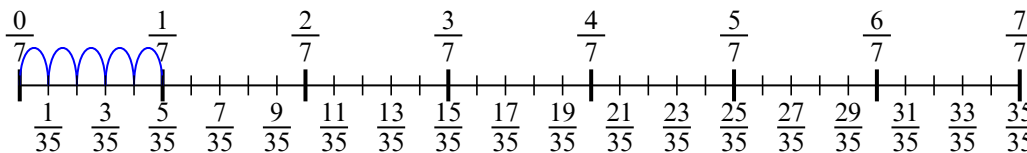
3) $\frac{1}{5} : 3$



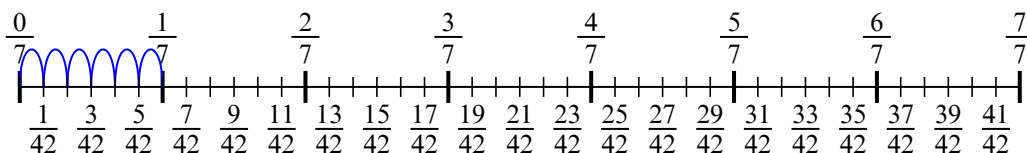
4) $\frac{1}{7} : 6$



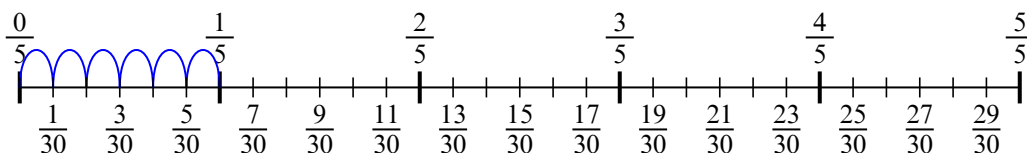
5) $\frac{1}{7} : 5$



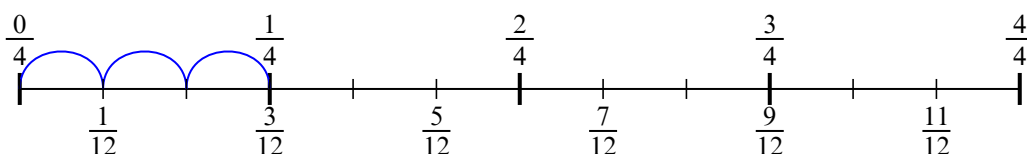
6) $\frac{1}{7} : 6$



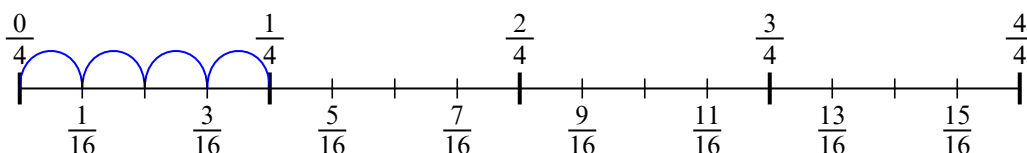
7) $\frac{1}{5} : 6$



8) $\frac{1}{4} : 3$



9) $\frac{1}{4} : 4$



Ответы

1. $\frac{1}{42}$

2. $\frac{1}{12}$

3. $\frac{1}{15}$

4. $\frac{1}{42}$

5. $\frac{1}{35}$

6. $\frac{1}{42}$

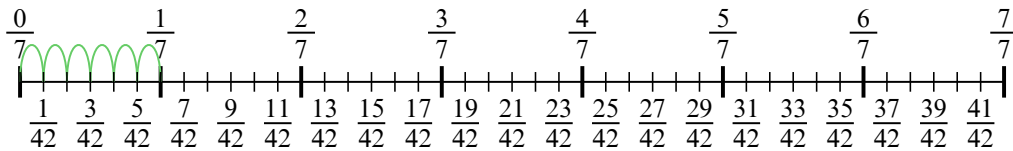
7. $\frac{1}{30}$

8. $\frac{1}{12}$

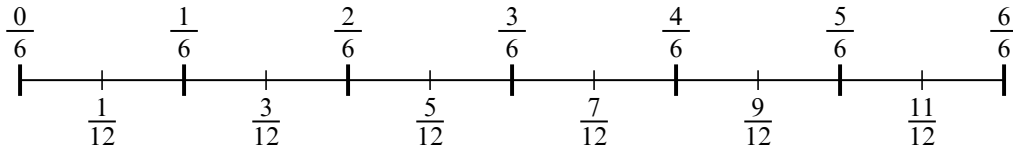
9. $\frac{1}{16}$



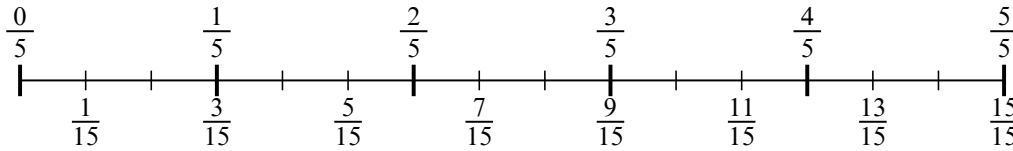
1) $\frac{1}{7} : 6$



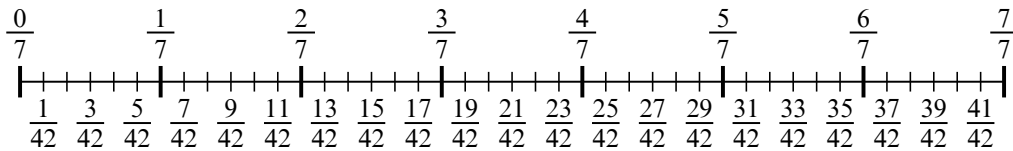
2) $\frac{1}{6} : 2$



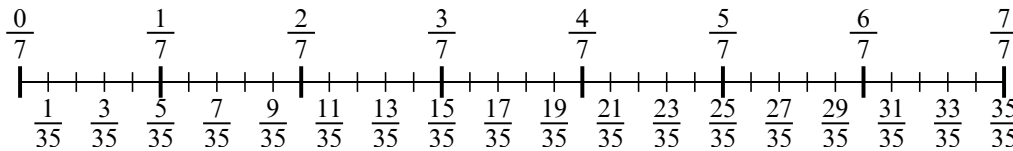
3) $\frac{1}{5} : 3$



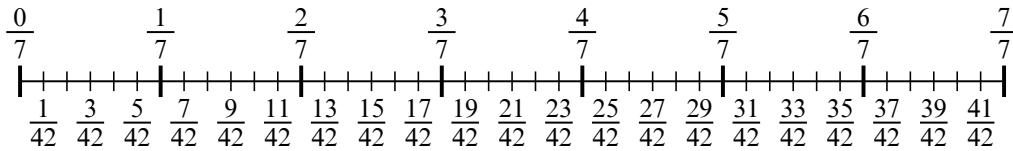
4) $\frac{1}{7} : 6$



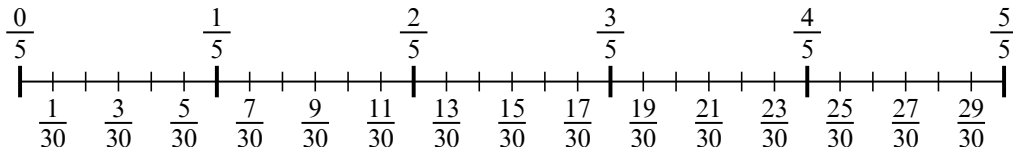
5) $\frac{1}{7} : 5$



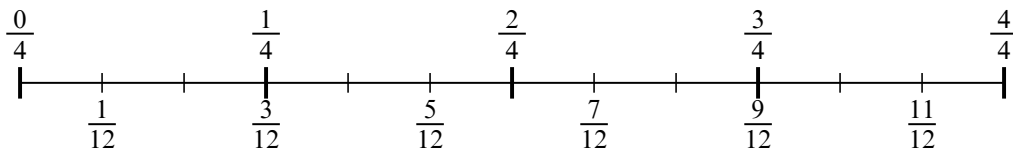
6) $\frac{1}{7} : 6$



7) $\frac{1}{5} : 6$



8) $\frac{1}{4} : 3$



9) $\frac{1}{4} : 4$

