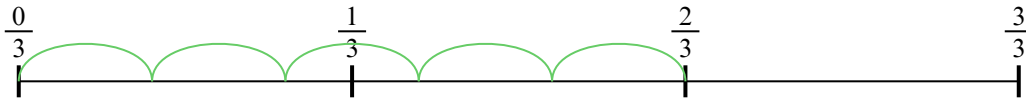




Используйте числовую прямую для решения задачи. Первая отмечена для Вас.

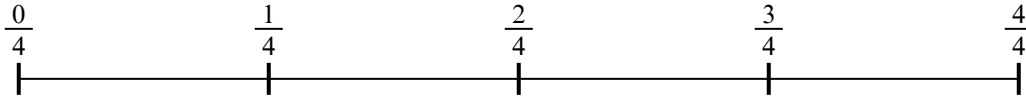
ОТВЕТЫ

1) $\frac{2}{3} : 5$



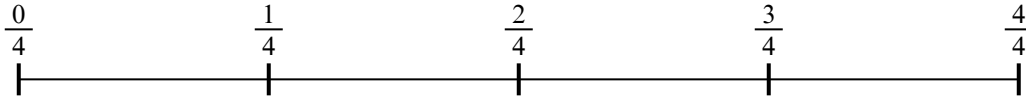
1. _____

2) $\frac{2}{4} : 6$



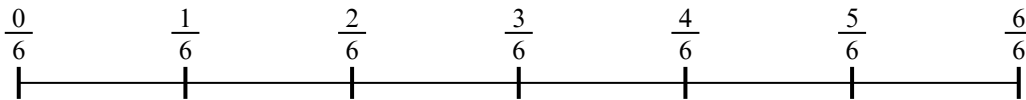
2. _____

3) $\frac{2}{4} : 2$



3. _____

4) $\frac{4}{6} : 6$



4. _____

5) $\frac{6}{7} : 5$



5. _____

6) $\frac{2}{3} : 3$




6. _____

7) $\frac{4}{5} : 2$



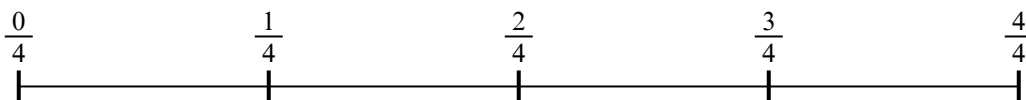
7. _____

8) $\frac{3}{5} : 4$



8. _____

9) $\frac{2}{4} : 4$

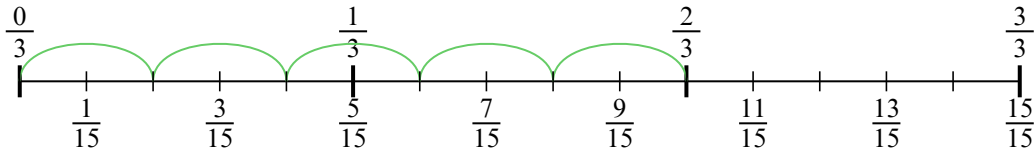


9. _____

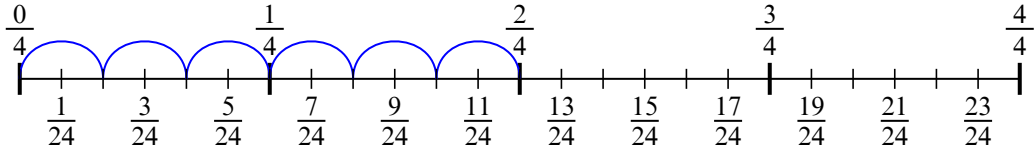


Используйте числовую прямую для решения задачи. Первая отмечена для Вас.

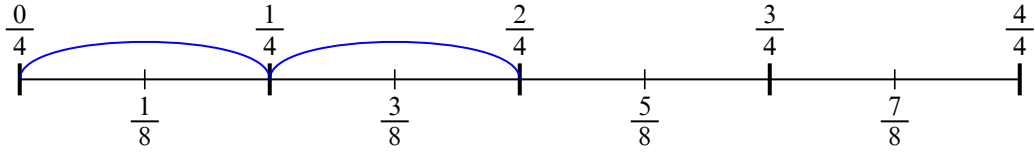
1) $\frac{2}{3} : 5$



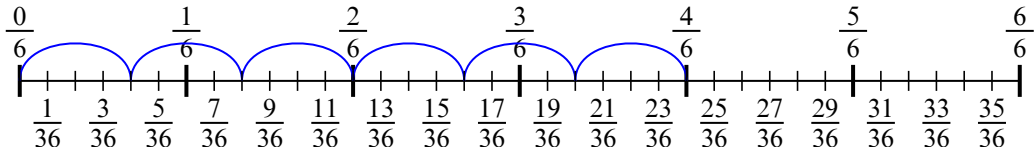
2) $\frac{2}{4} : 6$



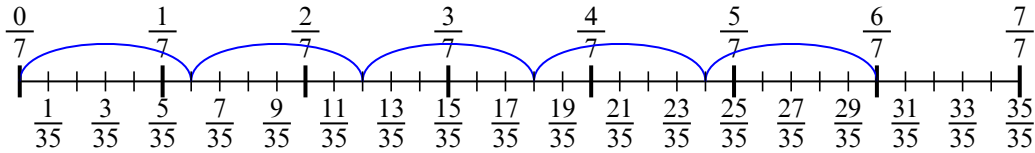
3) $\frac{2}{4} : 2$



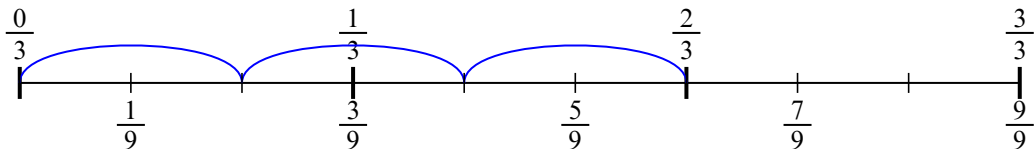
4) $\frac{4}{6} : 6$



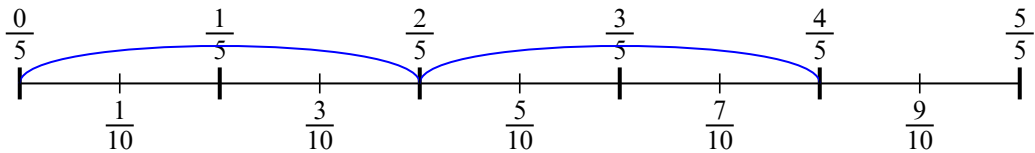
5) $\frac{6}{7} : 5$



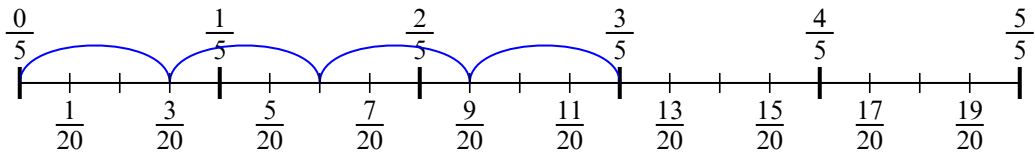
6) $\frac{2}{3} : 3$



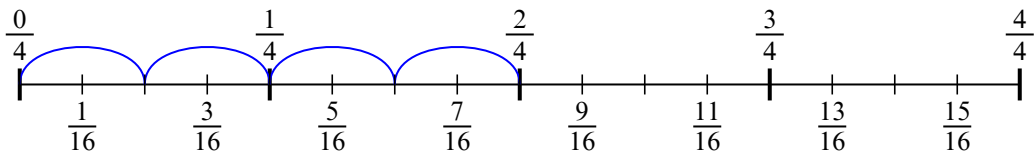
7) $\frac{4}{5} : 2$



8) $\frac{3}{5} : 4$



9) $\frac{2}{4} : 4$

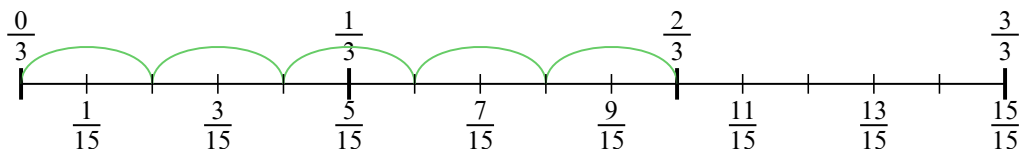


ОТВЕТЫ

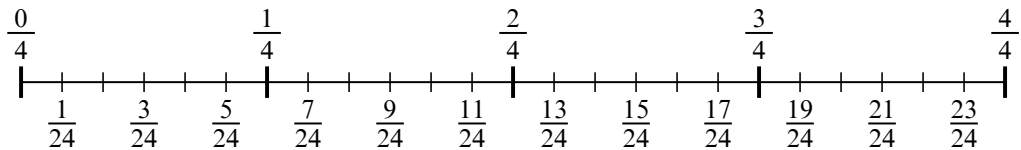
1. $\frac{2}{15}$
2. $\frac{2}{24}$
3. $\frac{2}{8}$
4. $\frac{4}{36}$
5. $\frac{6}{35}$
6. $\frac{2}{9}$
7. $\frac{4}{10}$
8. $\frac{3}{20}$
9. $\frac{2}{16}$



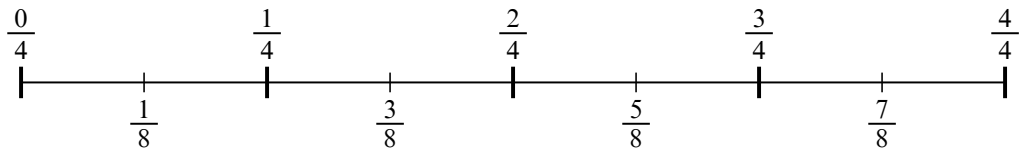
1) $\frac{2}{3} : 5$



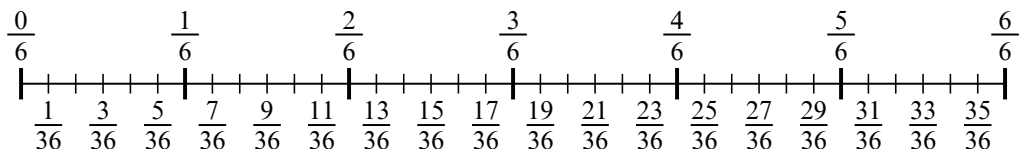
2) $\frac{2}{4} : 6$



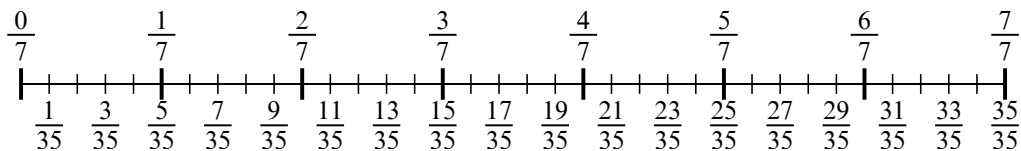
3) $\frac{2}{4} : 2$



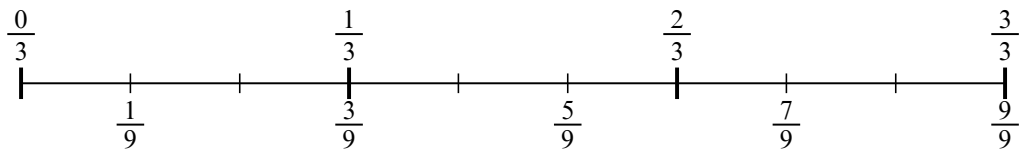
4) $\frac{4}{6} : 6$



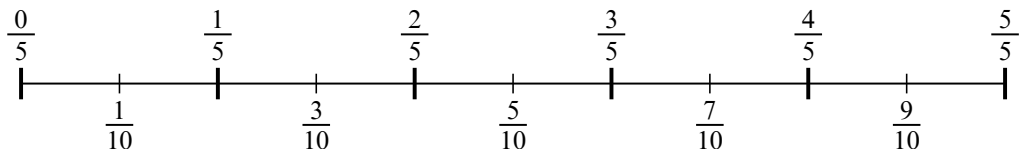
5) $\frac{6}{7} : 5$



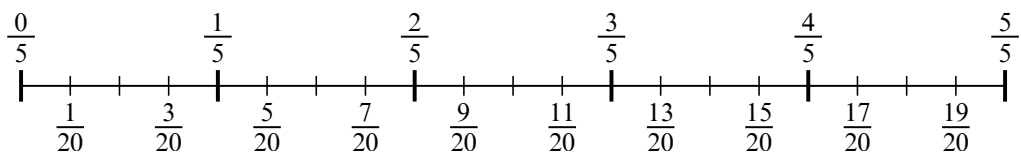
6) $\frac{2}{3} : 3$



7) $\frac{4}{5} : 2$



8) $\frac{3}{5} : 4$



9) $\frac{2}{4} : 4$

