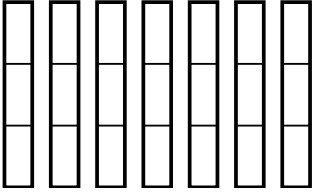


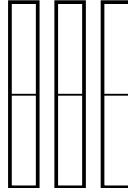


Используйте визуальные модели при решении.

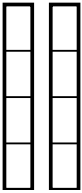
1) $\frac{1}{3} \times 7 =$



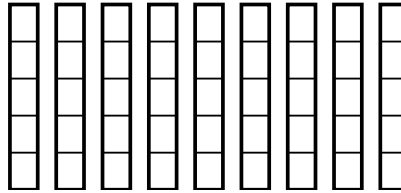
2) $\frac{1}{2} \times 3 =$



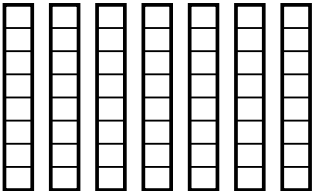
3) $\frac{3}{4} \times 2 =$



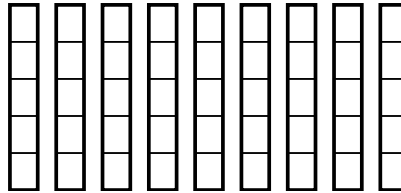
4) $\frac{3}{5} \times 9 =$



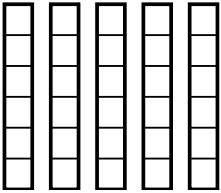
5) $\frac{7}{8} \times 7 =$



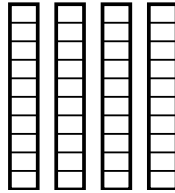
6) $\frac{4}{5} \times 9 =$



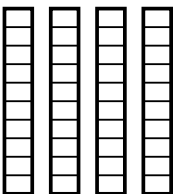
7) $\frac{5}{6} \times 5 =$



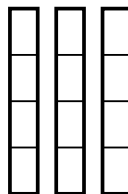
8) $\frac{7}{10} \times 4 =$



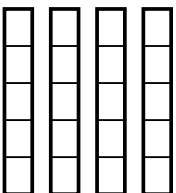
9) $\frac{3}{10} \times 4 =$



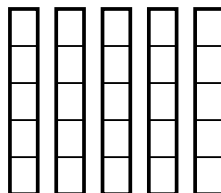
10) $\frac{1}{4} \times 3 =$



11) $\frac{3}{5} \times 4 =$



12) $\frac{4}{5} \times 5 =$



Ответы

1. _____

2. _____

3. _____

4. _____

5. _____

6. _____

7. _____

8. _____

9. _____

10. _____

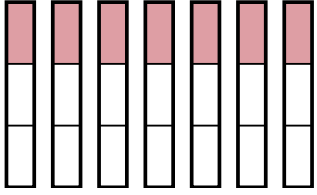
11. _____

12. _____

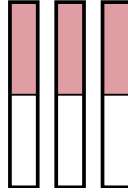


Используйте визуальные модели при решении.

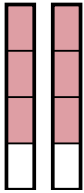
1) $\frac{1}{3} \times 7 =$



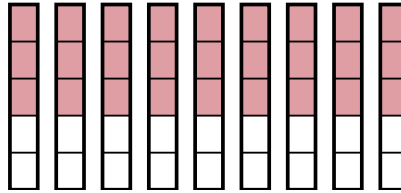
2) $\frac{1}{2} \times 3 =$



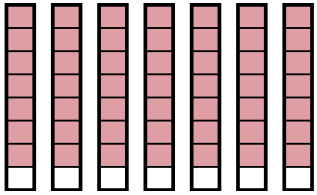
3) $\frac{3}{4} \times 2 =$



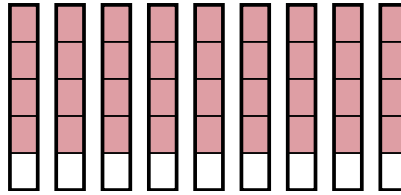
4) $\frac{3}{5} \times 9 =$



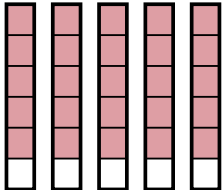
5) $\frac{7}{8} \times 7 =$



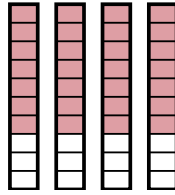
6) $\frac{4}{5} \times 9 =$



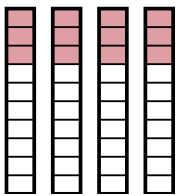
7) $\frac{5}{6} \times 5 =$



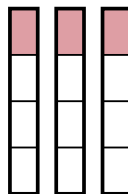
8) $\frac{7}{10} \times 4 =$



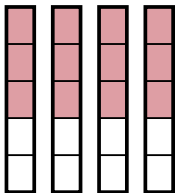
9) $\frac{3}{10} \times 4 =$



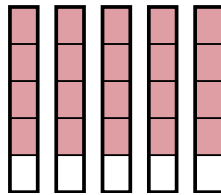
10) $\frac{1}{4} \times 3 =$



11) $\frac{3}{5} \times 4 =$



12) $\frac{4}{5} \times 5 =$



Ответы

1. $\frac{7}{3}$

2. $\frac{3}{2}$

3. $\frac{6}{4}$

4. $\frac{27}{5}$

5. $\frac{49}{8}$

6. $\frac{36}{5}$

7. $\frac{25}{6}$

8. $\frac{28}{10}$

9. $\frac{12}{10}$

10. $\frac{3}{4}$

11. $\frac{12}{5}$

12. $\frac{20}{5}$