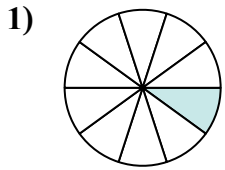
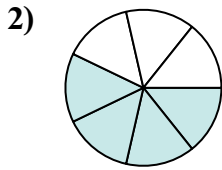




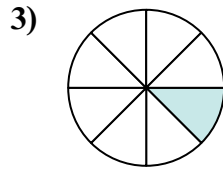
Определите под какой буквой находятся соответствующие дроби.



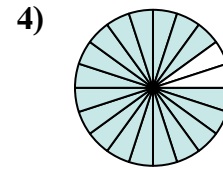
$$\frac{1}{10}$$



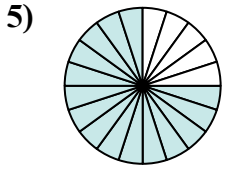
$$\frac{4}{7}$$



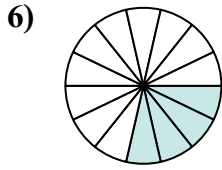
$$\frac{1}{8}$$



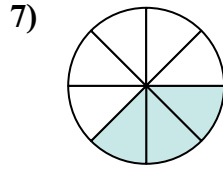
$$\frac{18}{20}$$



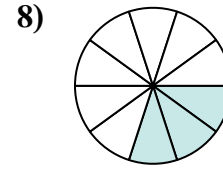
$$\frac{15}{20}$$



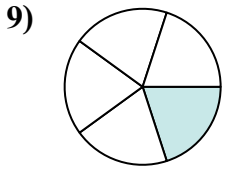
$$\frac{4}{14}$$



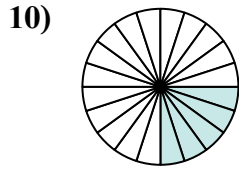
$$\frac{3}{8}$$



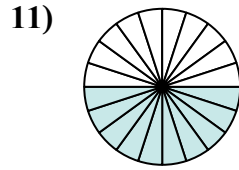
$$\frac{3}{10}$$



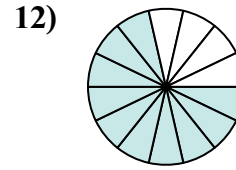
$$\frac{1}{5}$$



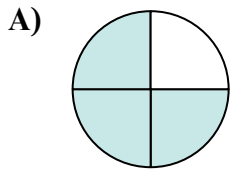
$$\frac{5}{20}$$



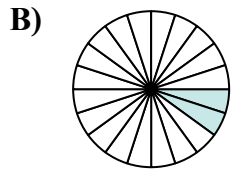
$$\frac{10}{20}$$



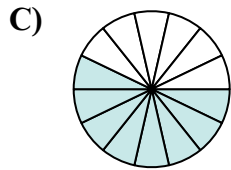
$$\frac{10}{14}$$



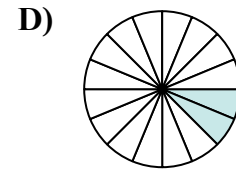
$$\frac{3}{4}$$



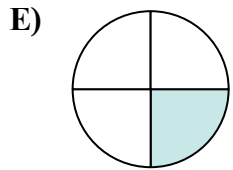
$$\frac{2}{20}$$



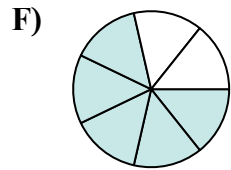
$$\frac{8}{14}$$



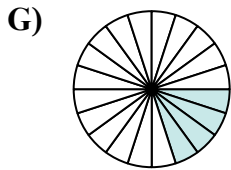
$$\frac{2}{16}$$



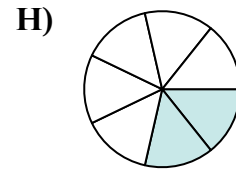
$$\frac{1}{4}$$



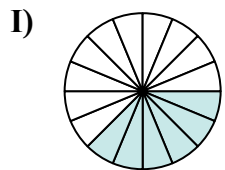
$$\frac{5}{7}$$



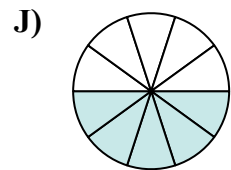
$$\frac{4}{20}$$



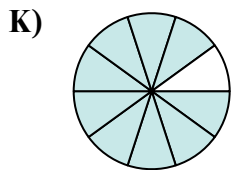
$$\frac{2}{7}$$



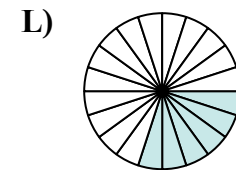
$$\frac{6}{16}$$



$$\frac{5}{10}$$



$$\frac{9}{10}$$



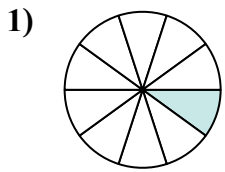
$$\frac{6}{20}$$

ОТВЕТЫ

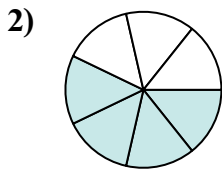
1. _____
2. _____
3. _____
4. _____
5. _____
6. _____
7. _____
8. _____
9. _____
10. _____
11. _____
12. _____



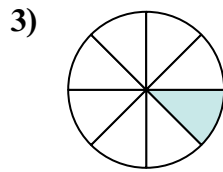
Определите под какой буквой находятся соответствующие дроби.



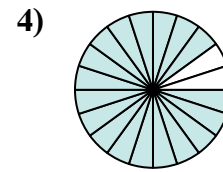
$$\frac{1}{10}$$



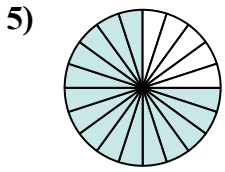
$$\frac{4}{7}$$



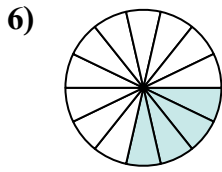
$$\frac{1}{8}$$



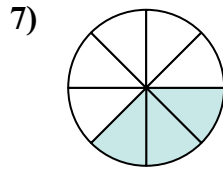
$$\frac{18}{20}$$



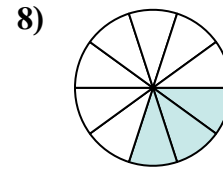
$$\frac{15}{20}$$



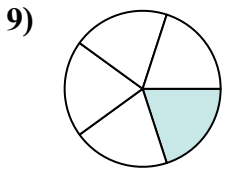
$$\frac{4}{14}$$



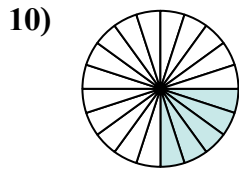
$$\frac{3}{8}$$



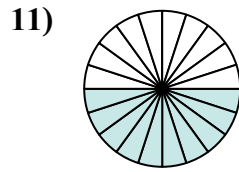
$$\frac{3}{10}$$



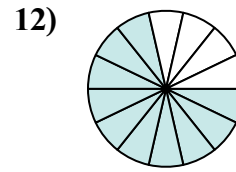
$$\frac{1}{5}$$



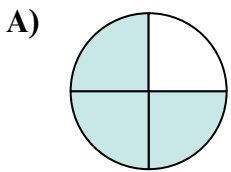
$$\frac{5}{20}$$



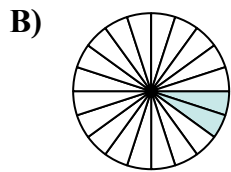
$$\frac{10}{20}$$



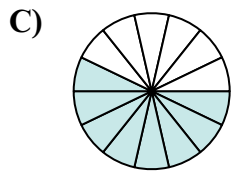
$$\frac{10}{14}$$



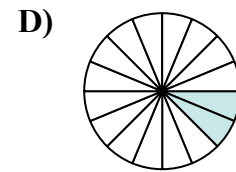
$$\frac{3}{4}$$



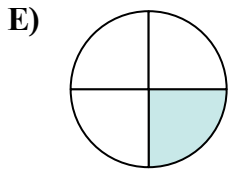
$$\frac{2}{20}$$



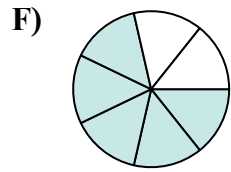
$$\frac{8}{14}$$



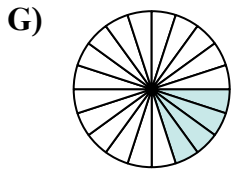
$$\frac{2}{16}$$



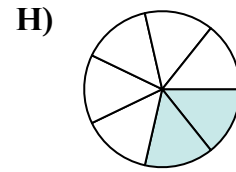
$$\frac{1}{4}$$



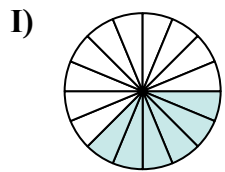
$$\frac{5}{7}$$



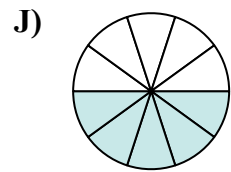
$$\frac{4}{20}$$



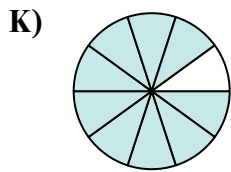
$$\frac{2}{7}$$



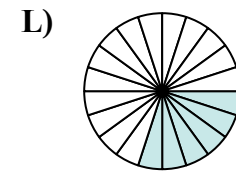
$$\frac{6}{16}$$



$$\frac{5}{10}$$



$$\frac{9}{10}$$



$$\frac{6}{20}$$

ОТВЕТЫ

1. В

2. С

3. Д

4. К

5. А

6. Н

7. І

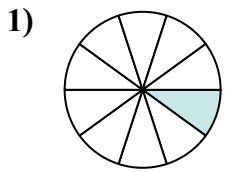
8. Л

9. Г

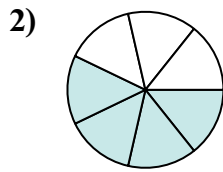
10. Е

11. Ж

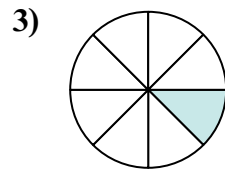
12. Ф



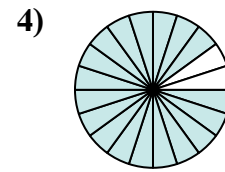
$$\frac{1 \times 2}{10 \times 2}$$



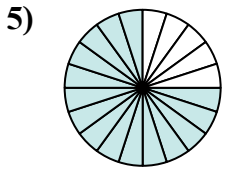
$$\frac{4 \times 2}{7 \times 2}$$



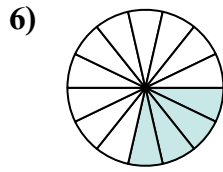
$$\frac{1 \times 2}{8 \times 2}$$



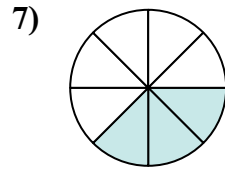
$$\frac{18 : 2}{20 : 2}$$



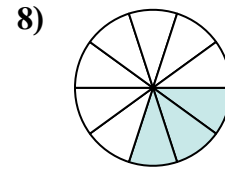
$$\frac{15 : 5}{20 : 5}$$



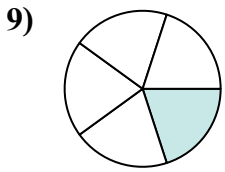
$$\frac{4 : 2}{14 : 2}$$



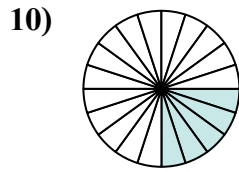
$$\frac{3 \times 2}{8 \times 2}$$



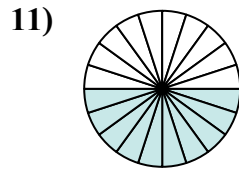
$$\frac{3 \times 2}{10 \times 2}$$



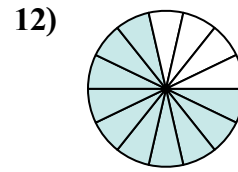
$$\frac{1 \times 4}{5 \times 4}$$



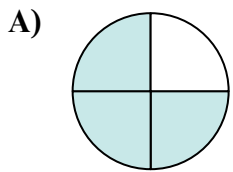
$$\frac{5 : 5}{20 : 5}$$



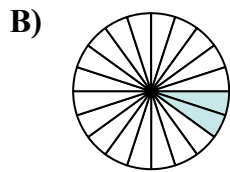
$$\frac{10 : 2}{20 : 2}$$



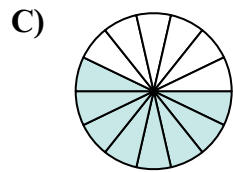
$$\frac{10 : 2}{14 : 2}$$



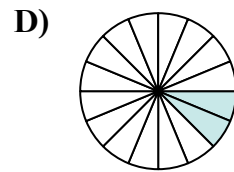
$$\frac{3}{4}$$



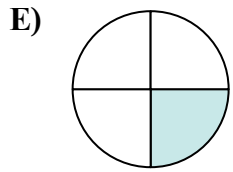
$$\frac{2}{20}$$



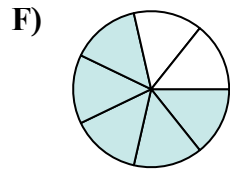
$$\frac{8}{14}$$



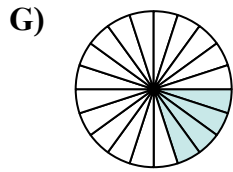
$$\frac{2}{16}$$



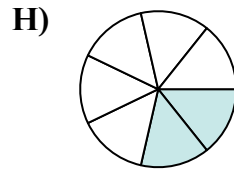
$$\frac{1}{4}$$



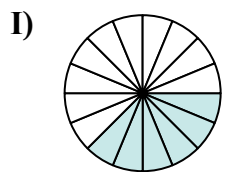
$$\frac{5}{7}$$



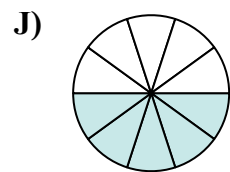
$$\frac{4}{20}$$



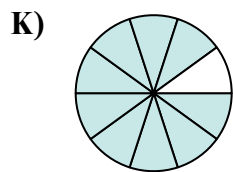
$$\frac{2}{7}$$



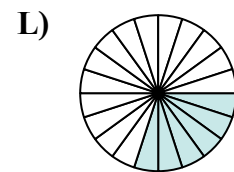
$$\frac{6}{16}$$



$$\frac{5}{10}$$



$$\frac{9}{10}$$



$$\frac{6}{20}$$