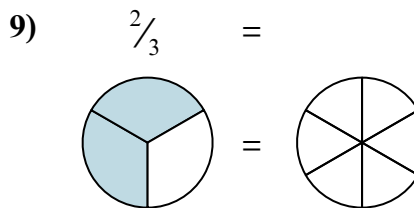
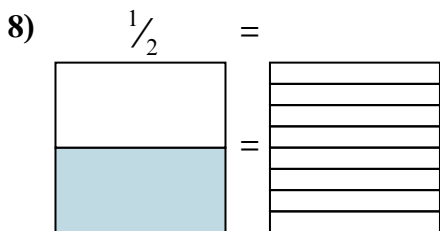
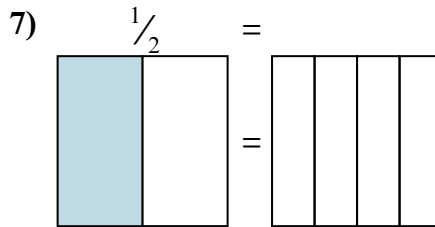
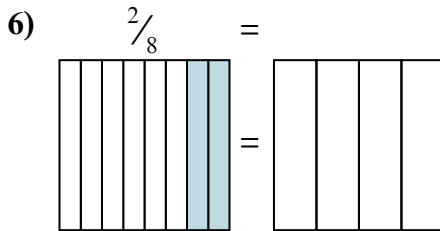
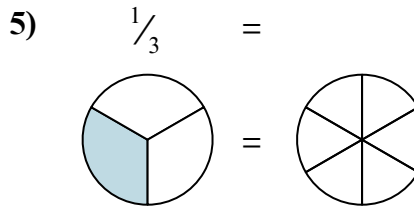
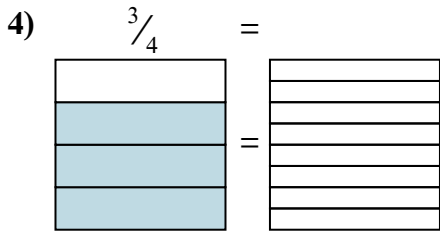
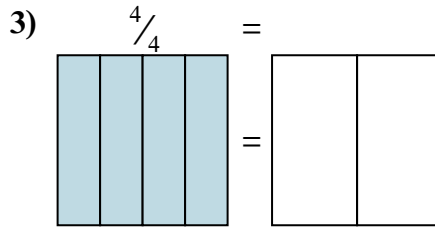
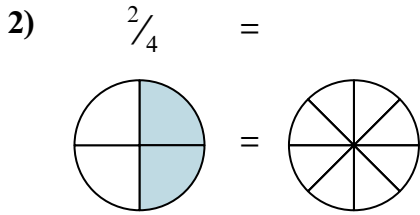
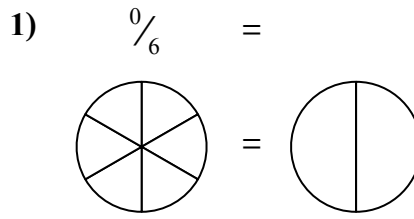
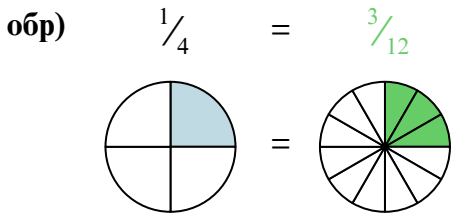




Закрасьте визуальные дроби, чтобы найти ответ.



**Ответы**

обр.  $\frac{3}{12}$

1. \_\_\_\_\_

2. \_\_\_\_\_

3. \_\_\_\_\_

4. \_\_\_\_\_

5. \_\_\_\_\_

6. \_\_\_\_\_

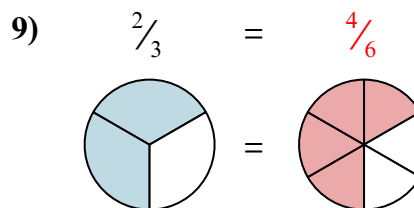
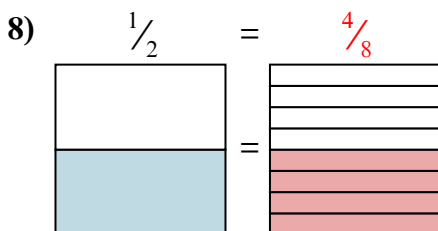
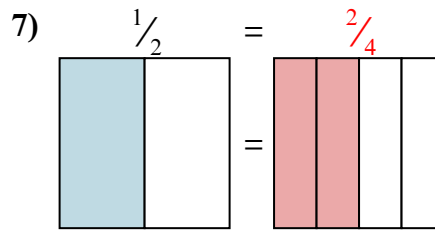
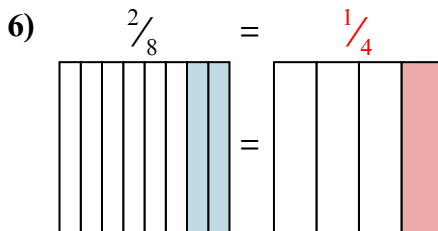
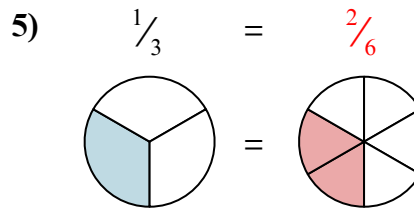
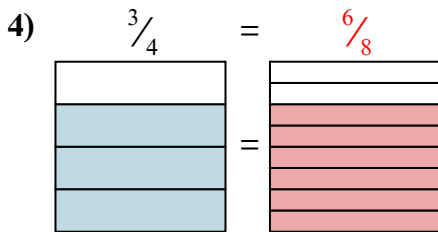
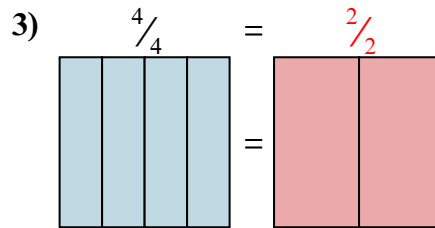
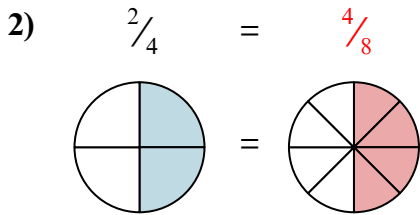
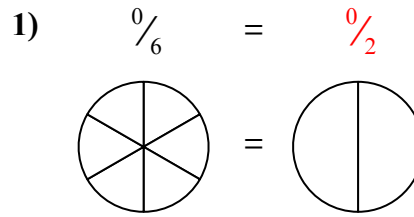
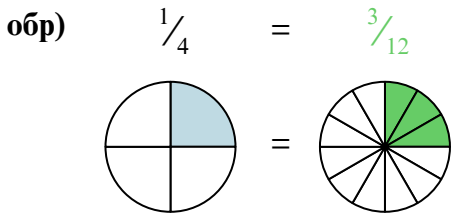
7. \_\_\_\_\_

8. \_\_\_\_\_

9. \_\_\_\_\_



Закрасьте визуальные дроби, чтобы найти ответ.

Ответыобр.  $\frac{3}{12}$ 1.  $\frac{0}{2}$ 2.  $\frac{4}{8}$ 3.  $\frac{2}{2}$ 4.  $\frac{6}{8}$ 5.  $\frac{2}{6}$ 6.  $\frac{1}{4}$ 7.  $\frac{2}{4}$ 8.  $\frac{4}{8}$ 9.  $\frac{4}{6}$