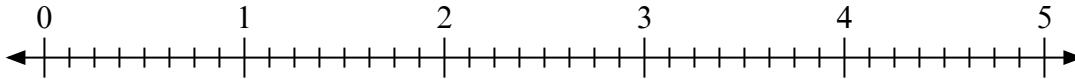




Используйте числовую прямую для решения задачи.

Ответы

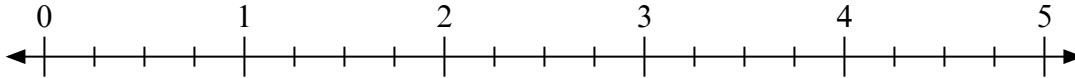
1) $4 : \frac{1}{8} =$



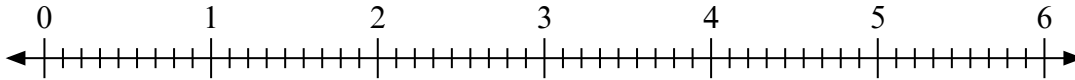
2) $2 : \frac{2}{3} =$



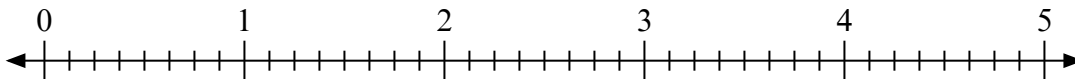
3) $2 : \frac{3}{4} =$



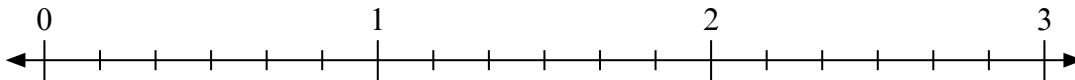
4) $4 : \frac{6}{9} =$



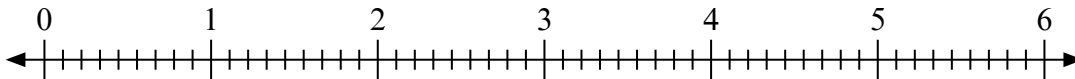
5) $5 : \frac{5}{8} =$



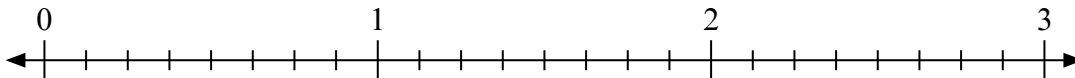
6) $3 : \frac{1}{6} =$



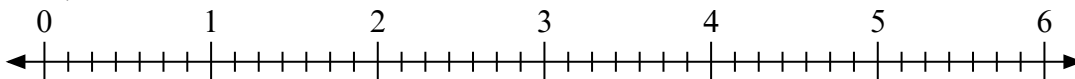
7) $4 : \frac{3}{9} =$



8) $2 : \frac{6}{8} =$



9) $6 : \frac{5}{7} =$



1. _____

2. _____

3. _____

4. _____

5. _____

6. _____

7. _____

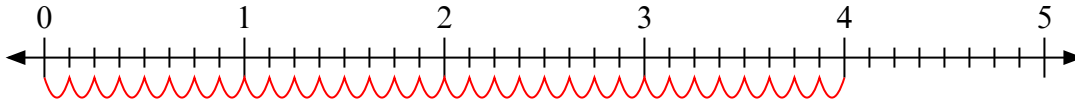
8. _____

9. _____

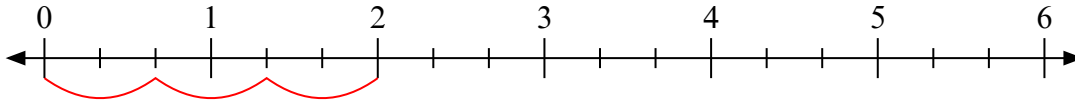


Используйте числовую прямую для решения задачи.

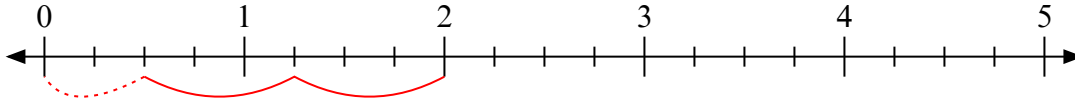
1) $4 : \frac{1}{8} =$



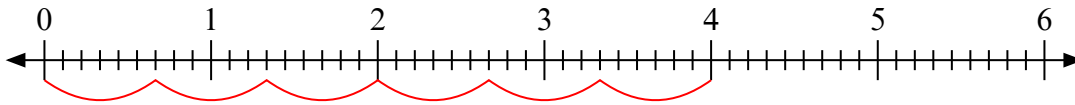
2) $2 : \frac{2}{3} =$



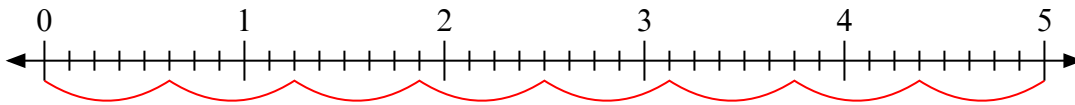
3) $2 : \frac{3}{4} =$



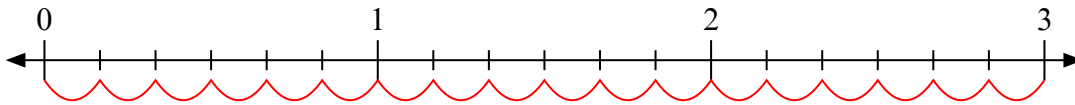
4) $4 : \frac{6}{9} =$



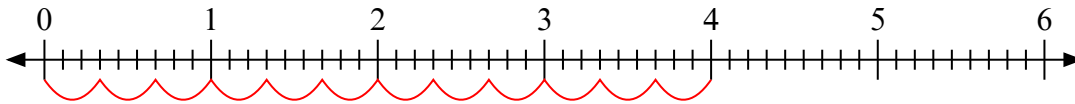
5) $5 : \frac{5}{8} =$



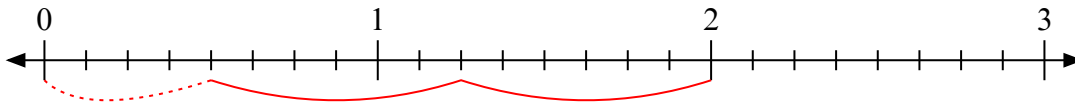
6) $3 : \frac{1}{6} =$



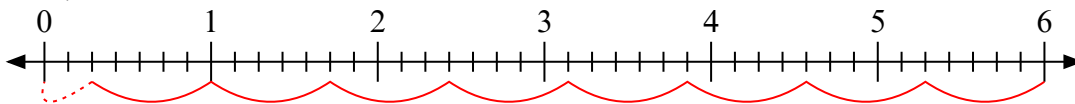
7) $4 : \frac{3}{9} =$



8) $2 : \frac{6}{8} =$



9) $6 : \frac{5}{7} =$



Ответы

1. 32

2. 3

3. $2 \frac{2}{3}$

4. 6

5. 8

6. 18

7. 12

8. $2 \frac{4}{6}$

9. $8 \frac{2}{5}$