


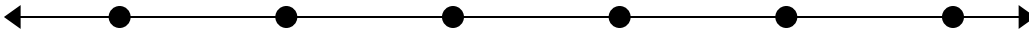


Решите примеры.

1)  $31\,210 - 22\,644 =$




2)  $70\,869 - 48\,766 =$




3)  $91\,432 - 51\,610 =$



4)  $96\,777 - 73\,926 =$



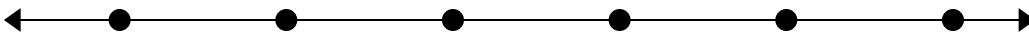
5)  $64\,948 - 37\,132 =$




6)  $82\,068 - 53\,279 =$



7)  $84\,548 - 42\,617 =$



8)  $80\,430 - 25\,072 =$

**Ответы**

1. \_\_\_\_\_

2. \_\_\_\_\_

3. \_\_\_\_\_

4. \_\_\_\_\_

5. \_\_\_\_\_

6. \_\_\_\_\_

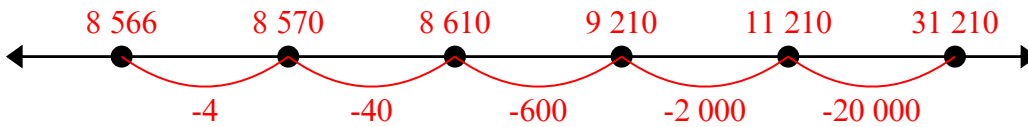
7. \_\_\_\_\_

8. \_\_\_\_\_

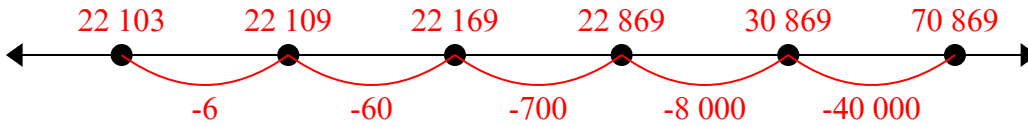


Решите примеры.

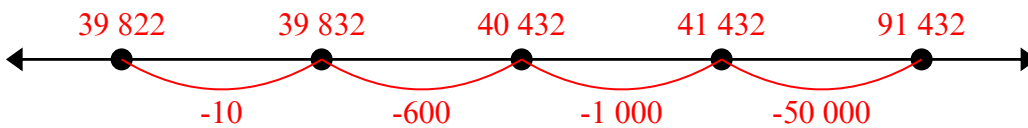
1)  $31\,210 - 22\,644 =$




2)  $70\,869 - 48\,766 =$



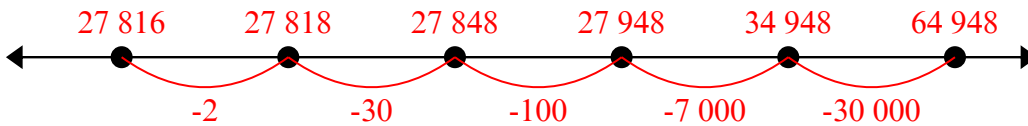
3)  $91\,432 - 51\,610 =$



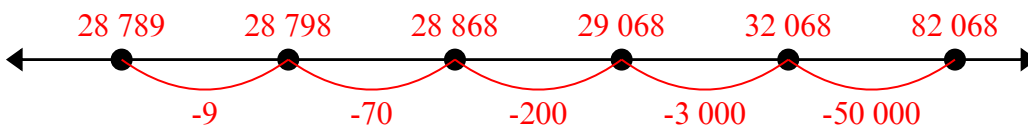
4)  $96\,777 - 73\,926 =$



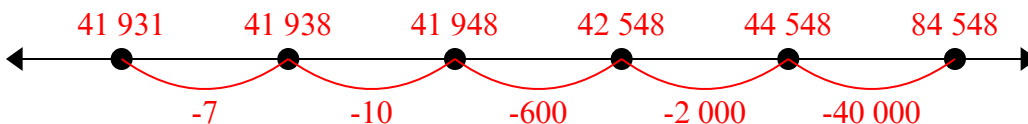
5)  $64\,948 - 37\,132 =$



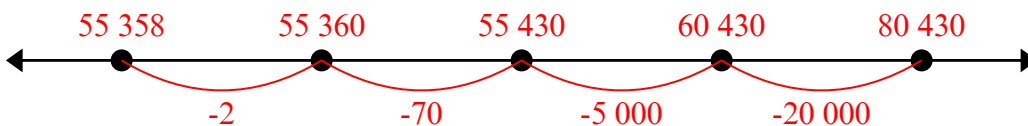
6)  $82\,068 - 53\,279 =$



7)  $84\,548 - 42\,617 =$



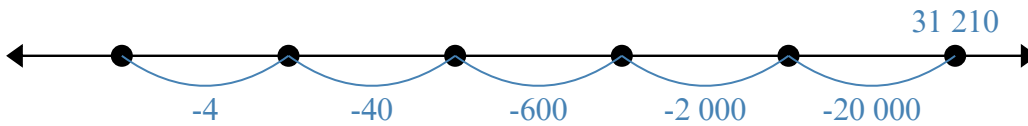
8)  $80\,430 - 25\,072 =$

**Ответы**1. 8 5662. 22 1033. 39 8224. 22 8515. 27 8166. 28 7897. 41 9318. 55 358

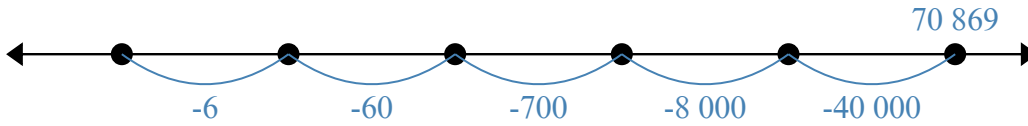


Решите примеры.

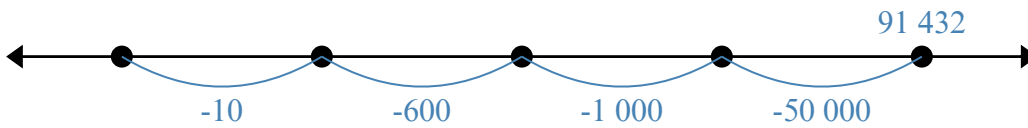
1)  $31\,210 - 22\,644 =$



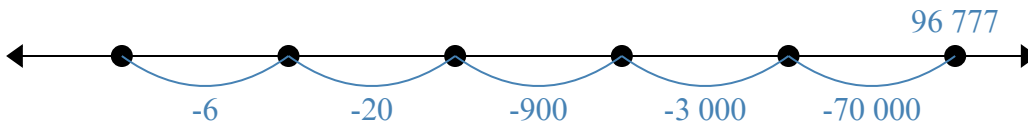
2)  $70\,869 - 48\,766 =$



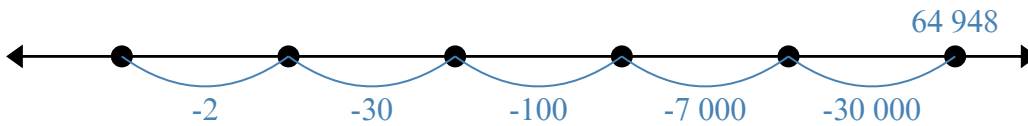
3)  $91\,432 - 51\,610 =$



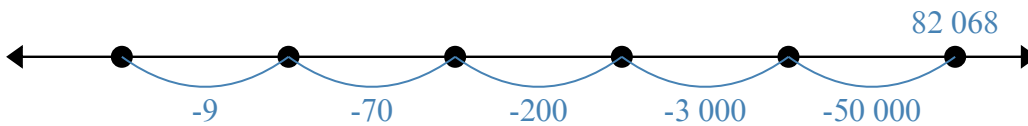
4)  $96\,777 - 73\,926 =$



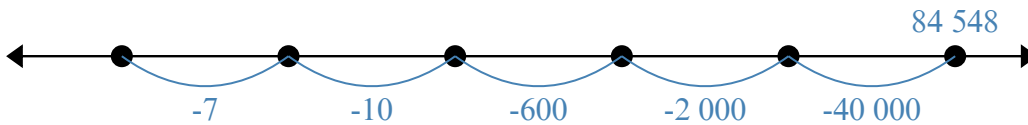
5)  $64\,948 - 37\,132 =$



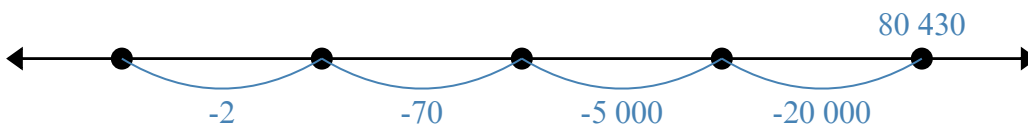
6)  $82\,068 - 53\,279 =$



7)  $84\,548 - 42\,617 =$



8)  $80\,430 - 25\,072 =$

Ответы

1. \_\_\_\_\_

2. \_\_\_\_\_

3. \_\_\_\_\_

4. \_\_\_\_\_

5. \_\_\_\_\_

6. \_\_\_\_\_

7. \_\_\_\_\_

8. \_\_\_\_\_