


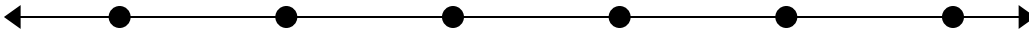


Решите примеры.

1)  $67\,617 - 66\,434 =$



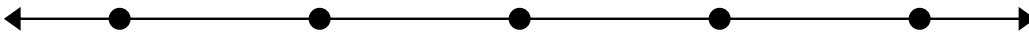
2)  $66\,230 - 59\,746 =$




3)  $42\,077 - 29\,154 =$



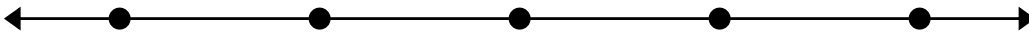
4)  $90\,653 - 20\,491 =$



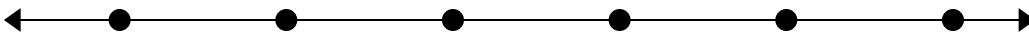
5)  $41\,843 - 13\,326 =$




6)  $42\,233 - 13\,650 =$



7)  $69\,122 - 44\,867 =$



8)  $65\,909 - 57\,408 =$

**Ответы**

1. \_\_\_\_\_

2. \_\_\_\_\_

3. \_\_\_\_\_

4. \_\_\_\_\_

5. \_\_\_\_\_

6. \_\_\_\_\_

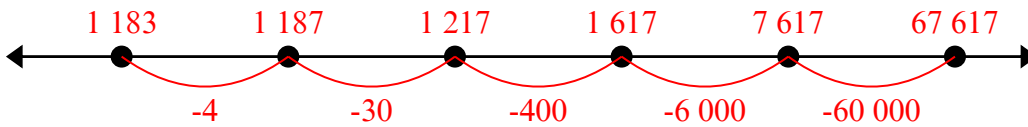
7. \_\_\_\_\_

8. \_\_\_\_\_

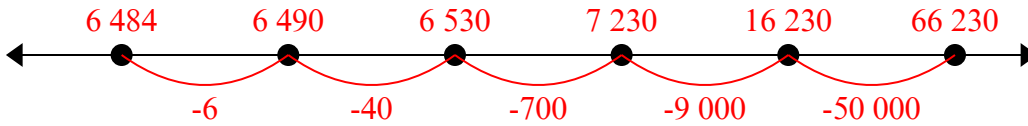


Решите примеры.

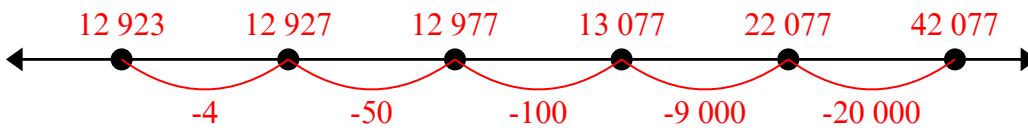
1)  $67\,617 - 66\,434 =$



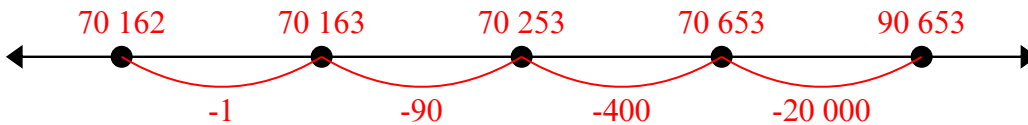
2)  $66\,230 - 59\,746 =$



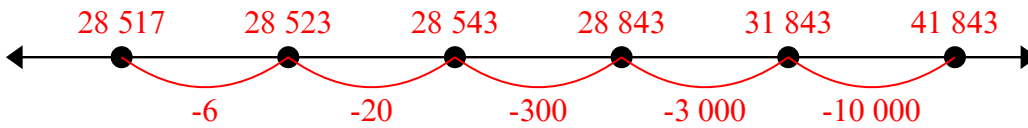
3)  $42\,077 - 29\,154 =$



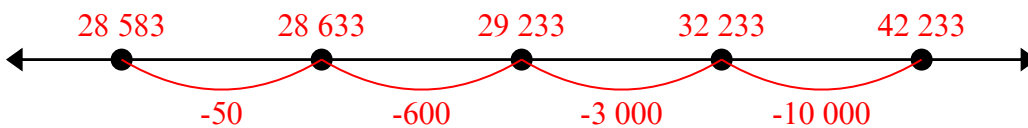
4)  $90\,653 - 20\,491 =$



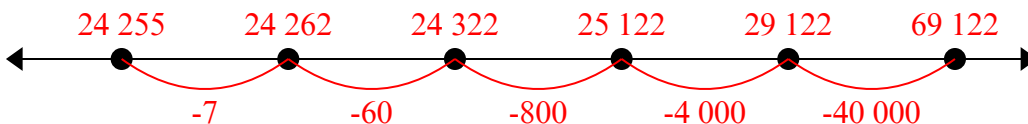
5)  $41\,843 - 13\,326 =$



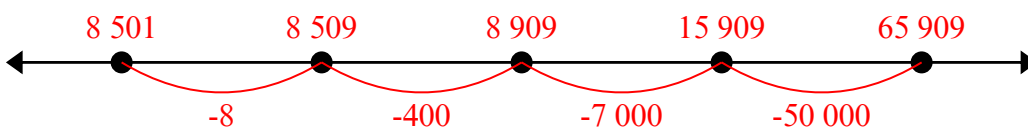
6)  $42\,233 - 13\,650 =$



7)  $69\,122 - 44\,867 =$



8)  $65\,909 - 57\,408 =$

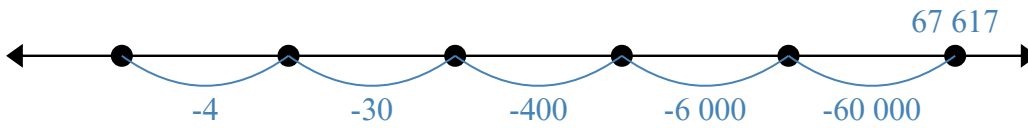
**Ответы**

1. 61 505
2. 60 026
3. 29 507
4. 36 345
5. 32 061
6. 46 579
7. 12 544
8. 62 449

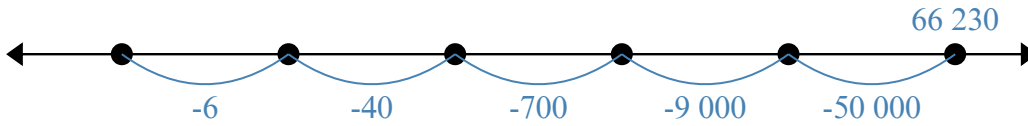


Решите примеры.

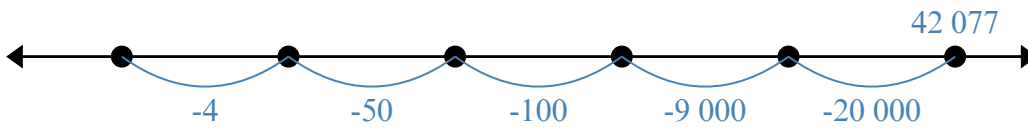
1)  $67\,617 - 66\,434 =$



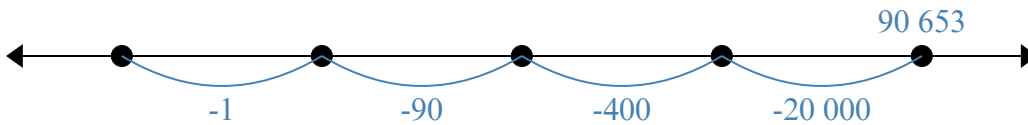
2)  $66\,230 - 59\,746 =$



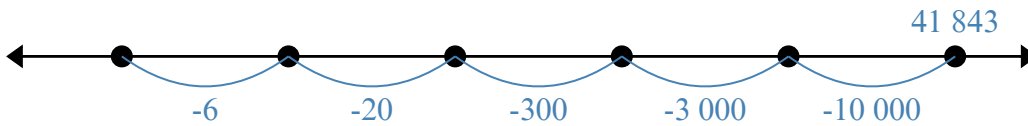
3)  $42\,077 - 29\,154 =$



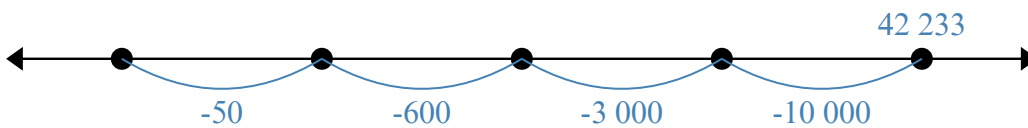
4)  $90\,653 - 20\,491 =$



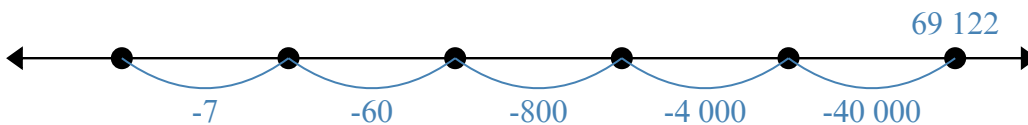
5)  $41\,843 - 13\,326 =$



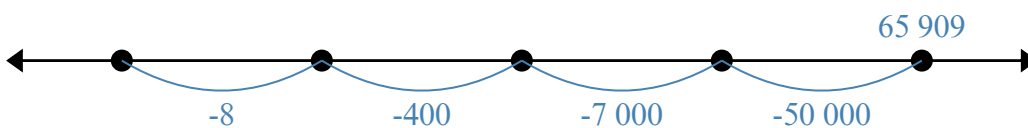
6)  $42\,233 - 13\,650 =$



7)  $69\,122 - 44\,867 =$



8)  $65\,909 - 57\,408 =$

**Ответы**

1. \_\_\_\_\_

2. \_\_\_\_\_

3. \_\_\_\_\_

4. \_\_\_\_\_

5. \_\_\_\_\_

6. \_\_\_\_\_

7. \_\_\_\_\_

8. \_\_\_\_\_