




Решите примеры.


1) $92\,323 - 31\,654 =$




2) $88\,865 - 53\,667 =$



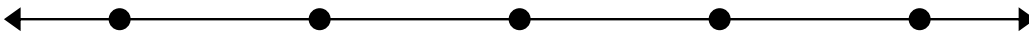
3) $74\,489 - 64\,538 =$



4) $80\,988 - 33\,178 =$



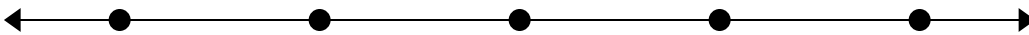
5) $96\,759 - 45\,016 =$




6) $73\,638 - 70\,169 =$



7) $84\,399 - 30\,942 =$



8) $49\,328 - 30\,253 =$

**Ответы**

1. _____

2. _____

3. _____

4. _____

5. _____

6. _____

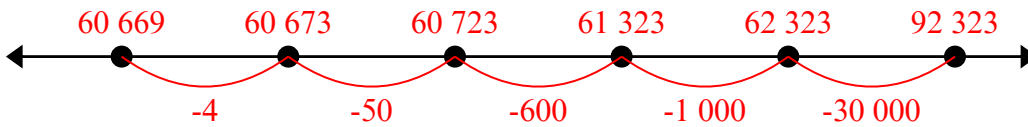
7. _____

8. _____

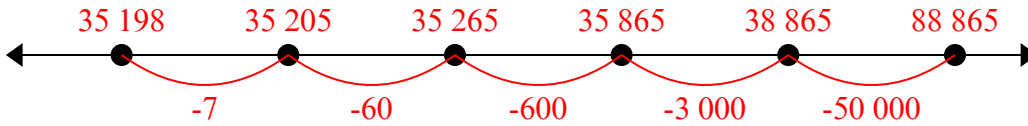


Решите примеры.

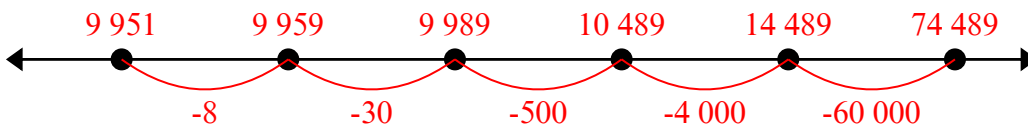
1) $92\,323 - 31\,654 =$



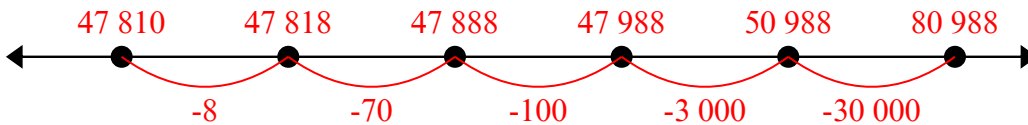
2) $88\,865 - 53\,667 =$



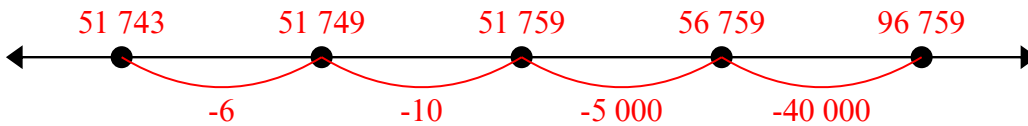
3) $74\,489 - 64\,538 =$



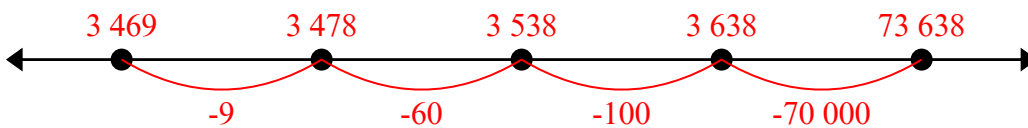
4) $80\,988 - 33\,178 =$



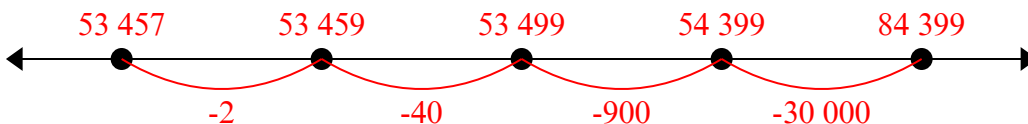
5) $96\,759 - 45\,016 =$



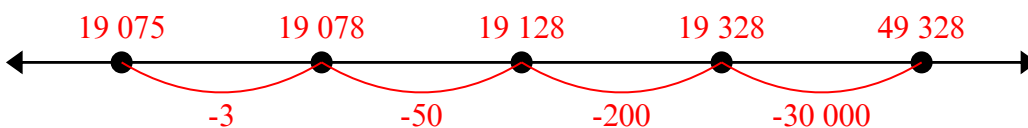
6) $73\,638 - 70\,169 =$



7) $84\,399 - 30\,942 =$



8) $49\,328 - 30\,253 =$



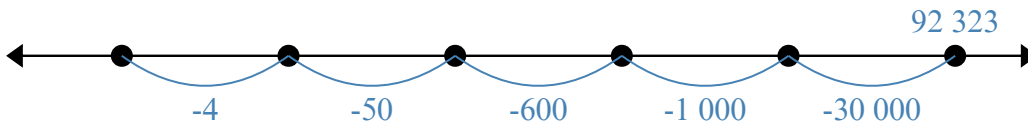
Отвeты

1. 61 505
2. 60 026
3. 29 507
4. 36 345
5. 32 061
6. 46 579
7. 12 544
8. 62 449

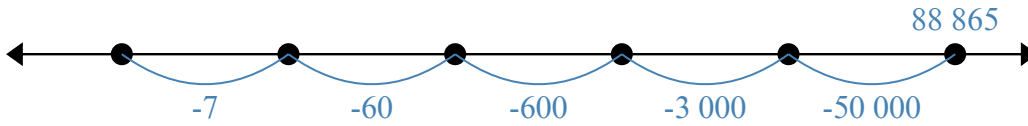


Решите примеры.

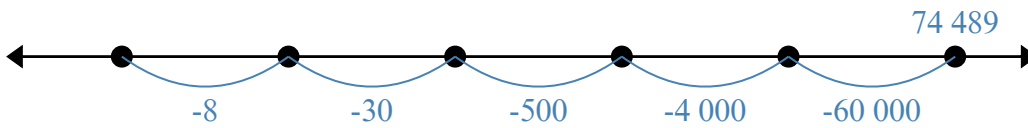
1) $92\,323 - 31\,654 =$



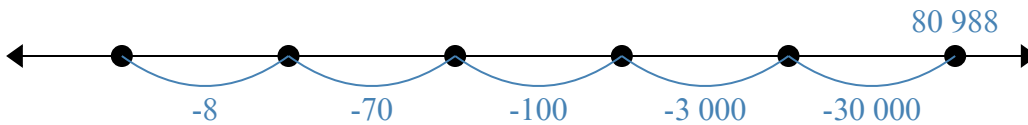
2) $88\,865 - 53\,667 =$



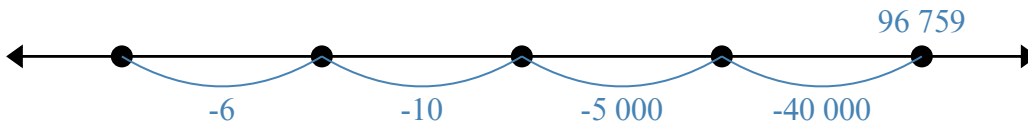
3) $74\,489 - 64\,538 =$



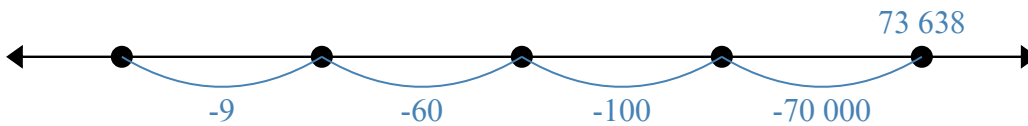
4) $80\,988 - 33\,178 =$



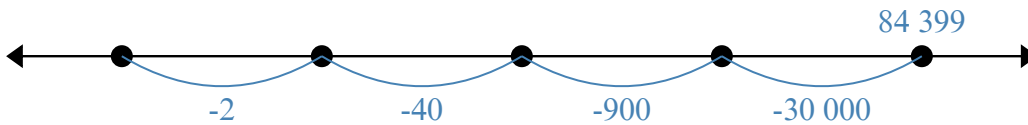
5) $96\,759 - 45\,016 =$



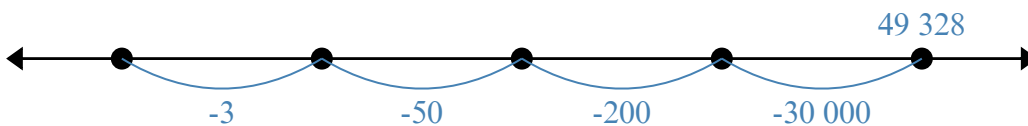
6) $73\,638 - 70\,169 =$



7) $84\,399 - 30\,942 =$



8) $49\,328 - 30\,253 =$

Отвeты

1. _____

2. _____

3. _____

4. _____

5. _____

6. _____

7. _____

8. _____