




Решите примеры.


1)  $65\,980 - 28\,174 =$



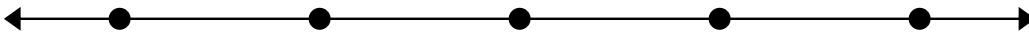
2)  $62\,239 - 51\,130 =$



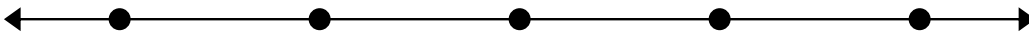
3)  $96\,190 - 60\,388 =$



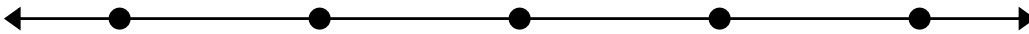
4)  $99\,722 - 54\,450 =$



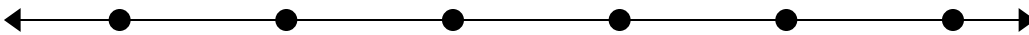
5)  $46\,886 - 40\,281 =$



6)  $96\,108 - 26\,094 =$



7)  $82\,633 - 33\,911 =$



8)  $59\,974 - 53\,110 =$

**Ответы**

1. \_\_\_\_\_

2. \_\_\_\_\_

3. \_\_\_\_\_

4. \_\_\_\_\_

5. \_\_\_\_\_

6. \_\_\_\_\_

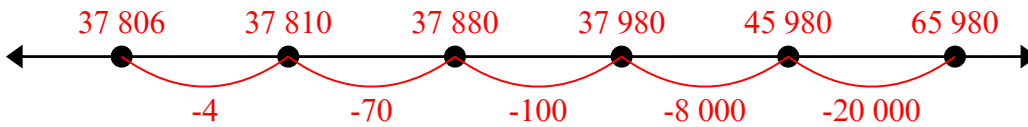
7. \_\_\_\_\_

8. \_\_\_\_\_

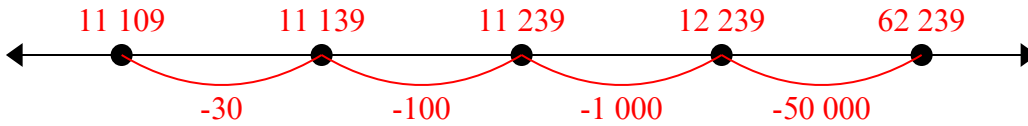


Решите примеры.

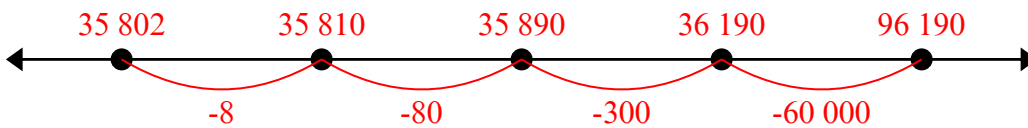
1)  $65\,980 - 28\,174 =$



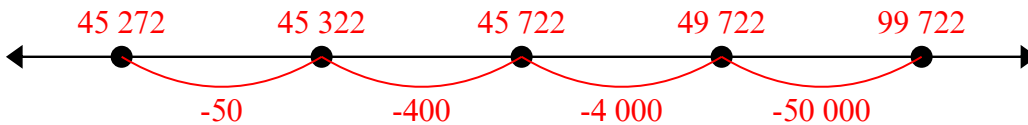
2)  $62\,239 - 51\,130 =$



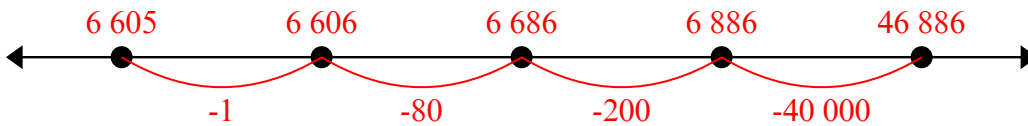
3)  $96\,190 - 60\,388 =$



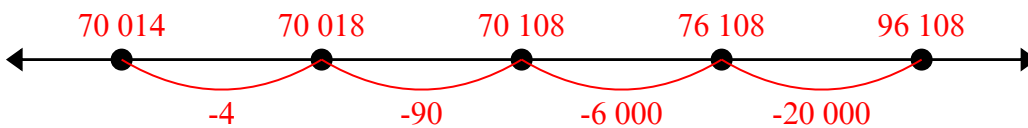
4)  $99\,722 - 54\,450 =$



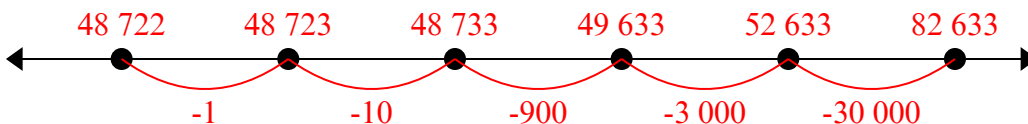
5)  $46\,886 - 40\,281 =$



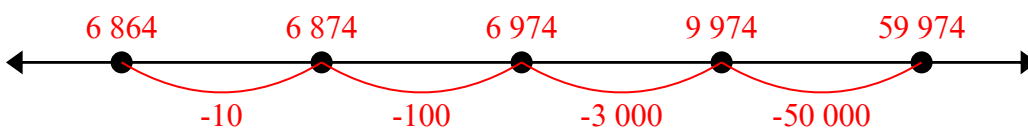
6)  $96\,108 - 26\,094 =$



7)  $82\,633 - 33\,911 =$



8)  $59\,974 - 53\,110 =$

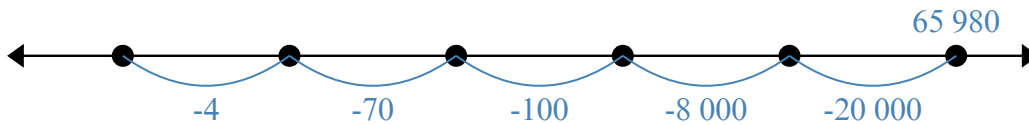
**Ответы**

1. **61 505**
2. **60 026**
3. **29 507**
4. **36 345**
5. **32 061**
6. **46 579**
7. **12 544**
8. **62 449**

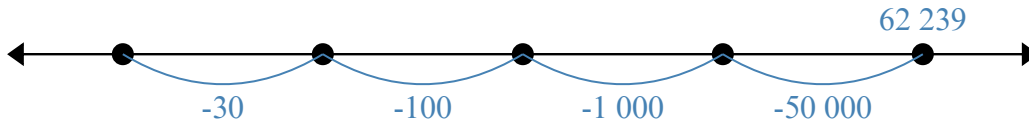


Решите примеры.

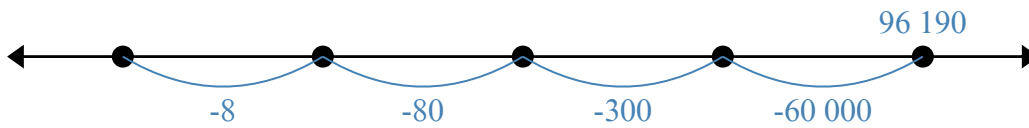
1)  $65\,980 - 28\,174 =$



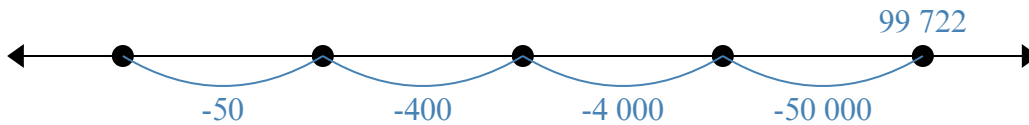
2)  $62\,239 - 51\,130 =$



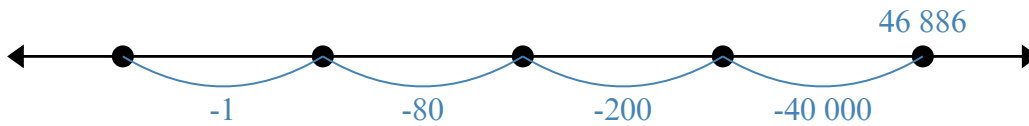
3)  $96\,190 - 60\,388 =$



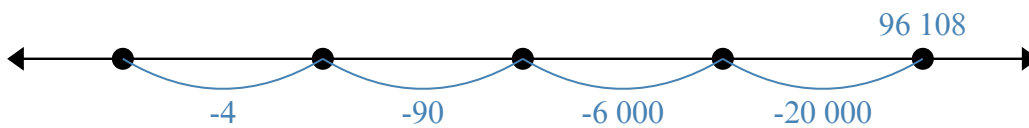
4)  $99\,722 - 54\,450 =$



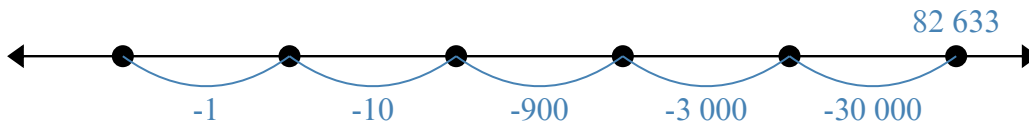
5)  $46\,886 - 40\,281 =$



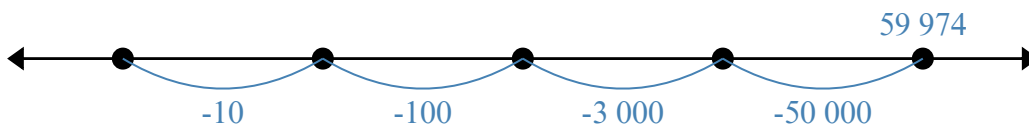
6)  $96\,108 - 26\,094 =$



7)  $82\,633 - 33\,911 =$



8)  $59\,974 - 53\,110 =$

**Ответы**

1. \_\_\_\_\_
2. \_\_\_\_\_
3. \_\_\_\_\_
4. \_\_\_\_\_
5. \_\_\_\_\_
6. \_\_\_\_\_
7. \_\_\_\_\_
8. \_\_\_\_\_