

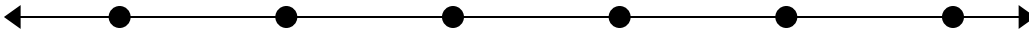


Решите примеры.

1)  $78\,378 - 27\,207 =$



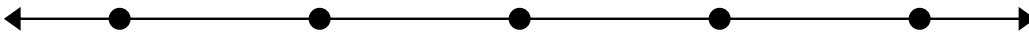
2)  $95\,599 - 84\,616 =$




3)  $67\,249 - 57\,254 =$



4)  $91\,414 - 16\,490 =$



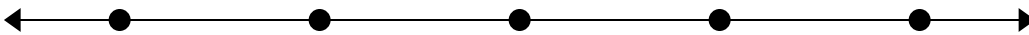
5)  $75\,876 - 27\,116 =$




6)  $98\,656 - 11\,818 =$



7)  $78\,917 - 35\,260 =$



8)  $80\,804 - 45\,249 =$

**Ответы**

1. \_\_\_\_\_

2. \_\_\_\_\_

3. \_\_\_\_\_

4. \_\_\_\_\_

5. \_\_\_\_\_

6. \_\_\_\_\_

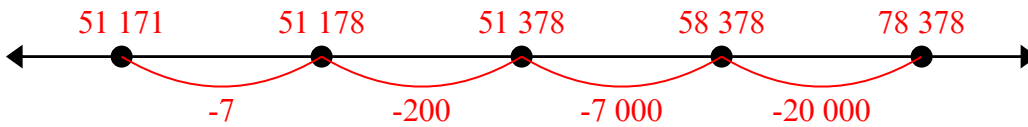
7. \_\_\_\_\_

8. \_\_\_\_\_

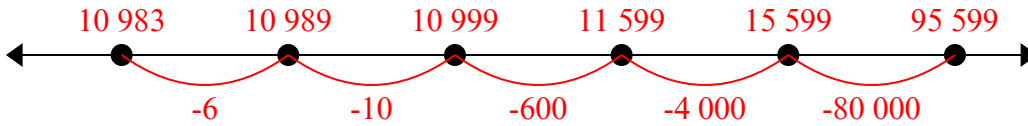


Решите примеры.

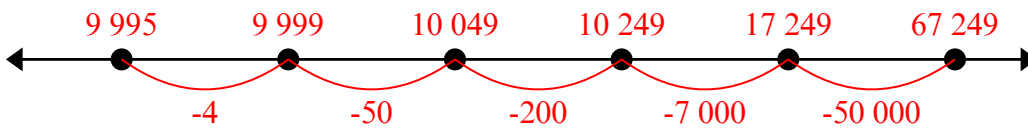
1)  $78\,378 - 27\,207 =$



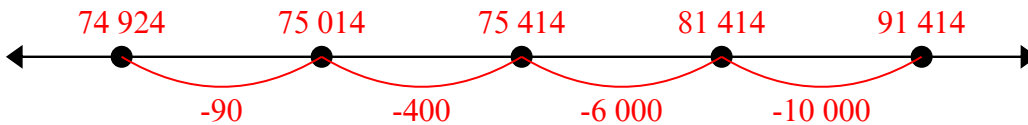
2)  $95\,599 - 84\,616 =$



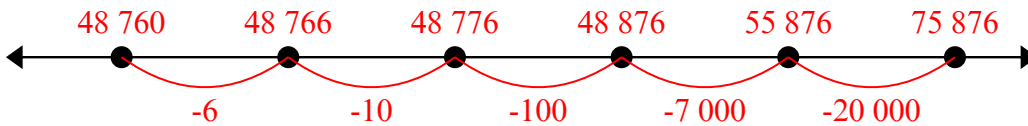
3)  $67\,249 - 57\,254 =$



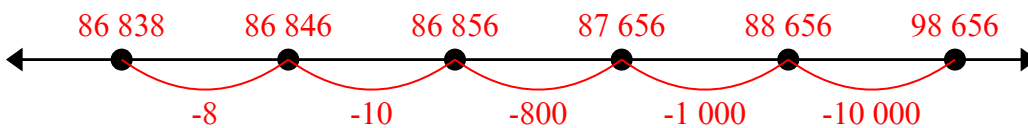
4)  $91\,414 - 16\,490 =$



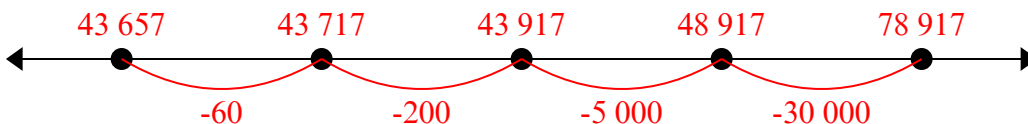
5)  $75\,876 - 27\,116 =$



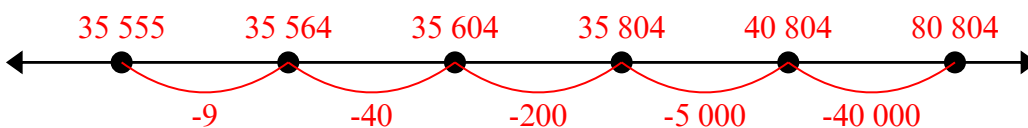
6)  $98\,656 - 11\,818 =$



7)  $78\,917 - 35\,260 =$



8)  $80\,804 - 45\,249 =$

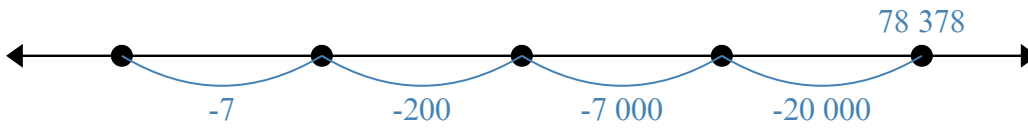
**Ответы**

1. 61 505
2. 60 026
3. 29 507
4. 36 345
5. 32 061
6. 46 579
7. 12 544
8. 62 449

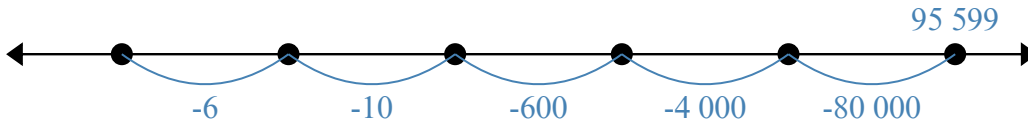


Решите примеры.

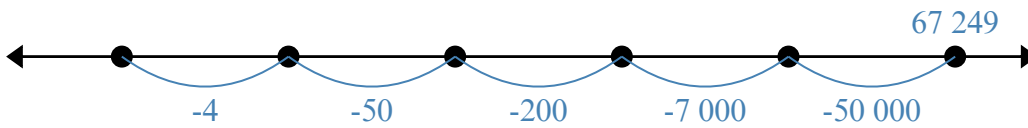
1)  $78\,378 - 27\,207 =$



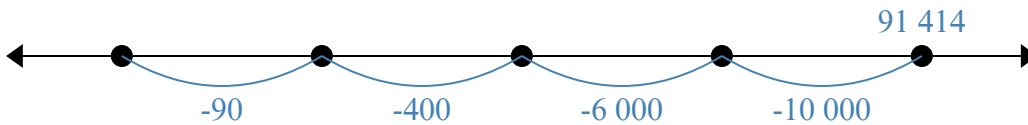
2)  $95\,599 - 84\,616 =$



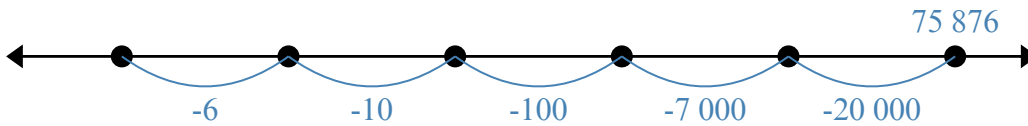
3)  $67\,249 - 57\,254 =$



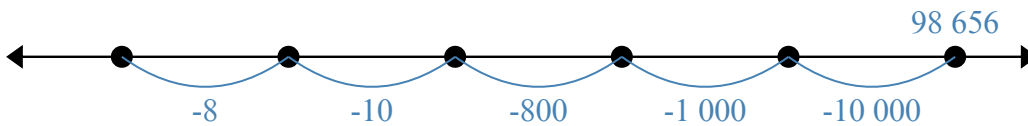
4)  $91\,414 - 16\,490 =$



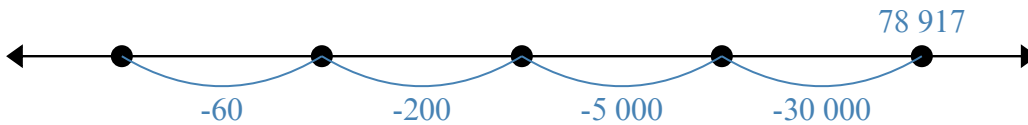
5)  $75\,876 - 27\,116 =$



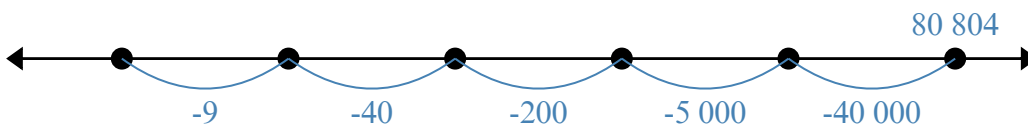
6)  $98\,656 - 11\,818 =$



7)  $78\,917 - 35\,260 =$



8)  $80\,804 - 45\,249 =$

Ответы

1. \_\_\_\_\_
2. \_\_\_\_\_
3. \_\_\_\_\_
4. \_\_\_\_\_
5. \_\_\_\_\_
6. \_\_\_\_\_
7. \_\_\_\_\_
8. \_\_\_\_\_