


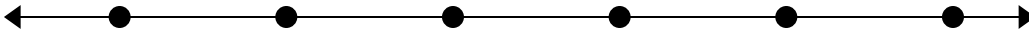


Решите примеры.

1)  $86\,275 - 73\,698 =$




2)  $42\,931 - 23\,318 =$



3)  $70\,004 - 15\,811 =$




4)  $86\,764 - 79\,175 =$



5)  $88\,714 - 80\,795 =$




6)  $56\,884 - 43\,159 =$



7)  $29\,588 - 27\,091 =$



8)  $74\,495 - 24\,691 =$

Ответы

1. \_\_\_\_\_

2. \_\_\_\_\_

3. \_\_\_\_\_

4. \_\_\_\_\_

5. \_\_\_\_\_

6. \_\_\_\_\_

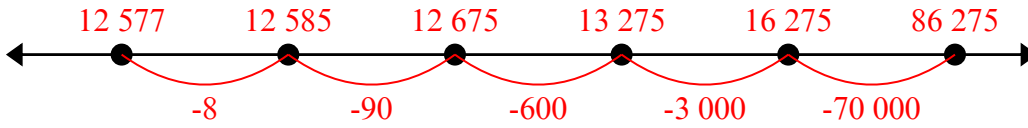
7. \_\_\_\_\_

8. \_\_\_\_\_

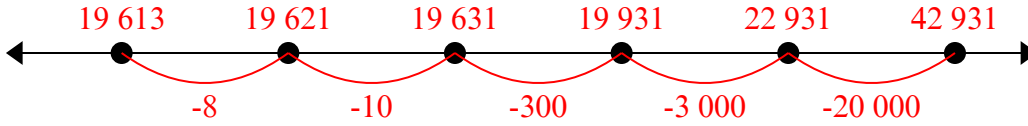


Решите примеры.

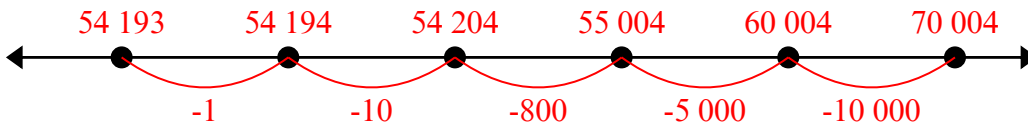
1)  $86\,275 - 73\,698 =$



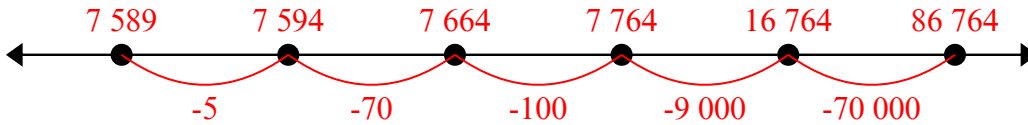
2)  $42\,931 - 23\,318 =$



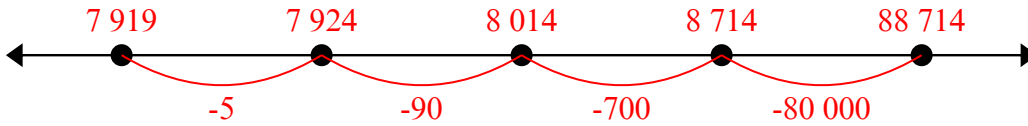
3)  $70\,004 - 15\,811 =$



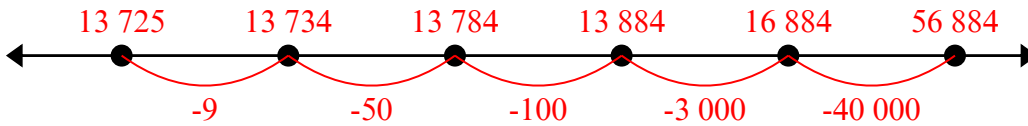
4)  $86\,764 - 79\,175 =$



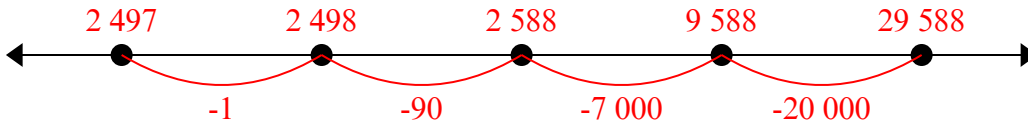
5)  $88\,714 - 80\,795 =$



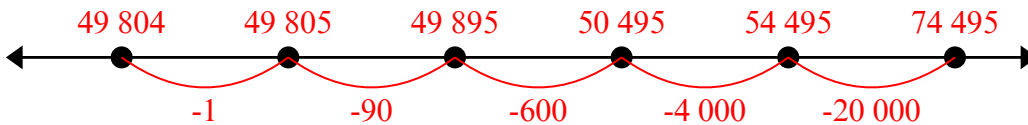
6)  $56\,884 - 43\,159 =$



7)  $29\,588 - 27\,091 =$



8)  $74\,495 - 24\,691 =$



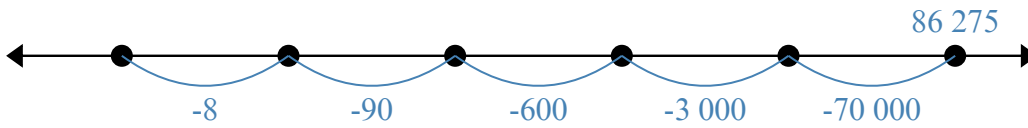
**Ответы**

1. 61 505
2. 60 026
3. 29 507
4. 36 345
5. 32 061
6. 46 579
7. 12 544
8. 62 449

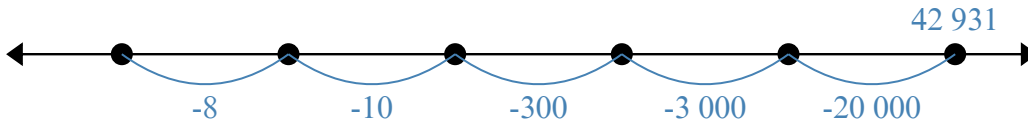


Решите примеры.

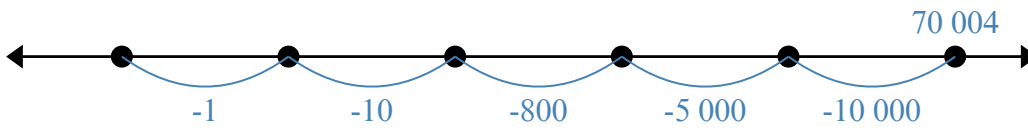
1)  $86\,275 - 73\,698 =$



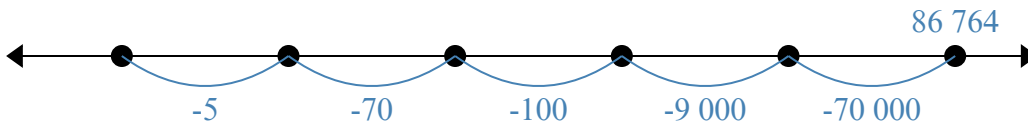
2)  $42\,931 - 23\,318 =$



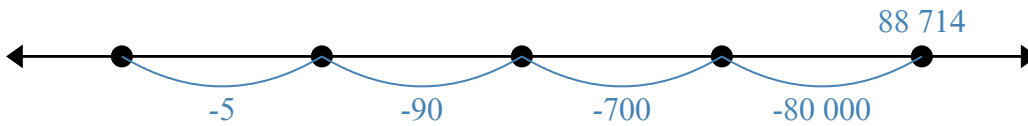
3)  $70\,004 - 15\,811 =$



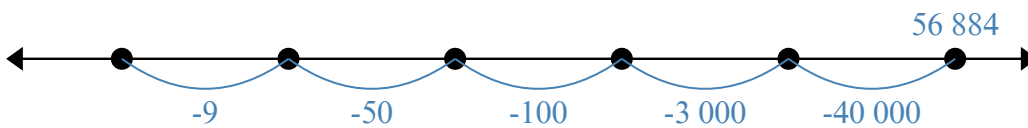
4)  $86\,764 - 79\,175 =$



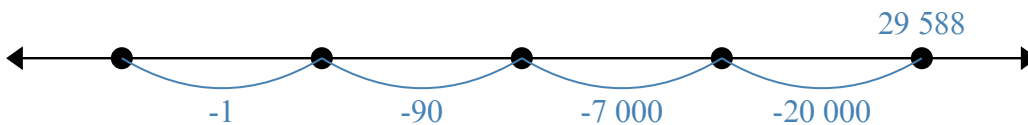
5)  $88\,714 - 80\,795 =$



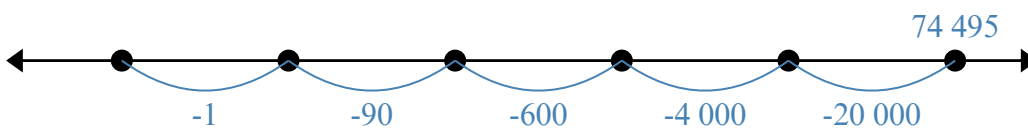
6)  $56\,884 - 43\,159 =$



7)  $29\,588 - 27\,091 =$



8)  $74\,495 - 24\,691 =$

Ответы

1. \_\_\_\_\_
2. \_\_\_\_\_
3. \_\_\_\_\_
4. \_\_\_\_\_
5. \_\_\_\_\_
6. \_\_\_\_\_
7. \_\_\_\_\_
8. \_\_\_\_\_