


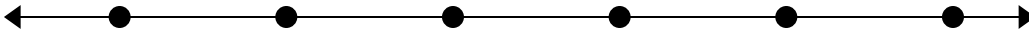


Решите примеры.

1)  $77\,395 - 25\,130 =$




2)  $85\,967 - 17\,668 =$




3)  $32\,252 - 13\,518 =$




4)  $87\,047 - 53\,525 =$



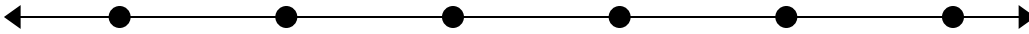
5)  $88\,917 - 21\,387 =$




6)  $67\,312 - 65\,546 =$



7)  $98\,236 - 68\,515 =$



8)  $74\,105 - 12\,018 =$

**Ответы**

1. \_\_\_\_\_

2. \_\_\_\_\_

3. \_\_\_\_\_

4. \_\_\_\_\_

5. \_\_\_\_\_

6. \_\_\_\_\_

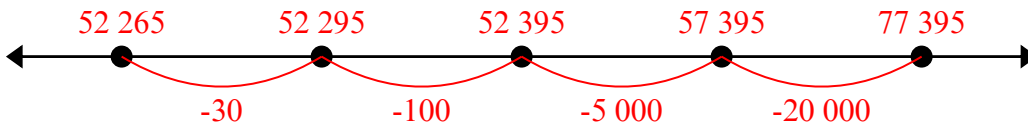
7. \_\_\_\_\_

8. \_\_\_\_\_

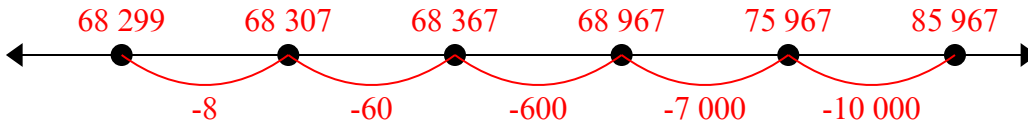


Решите примеры.

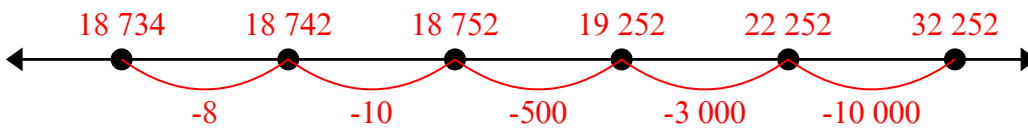
1)  $77\,395 - 25\,130 =$



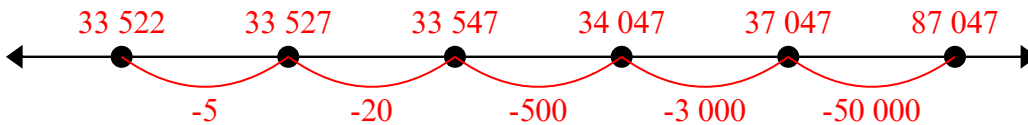
2)  $85\,967 - 17\,668 =$



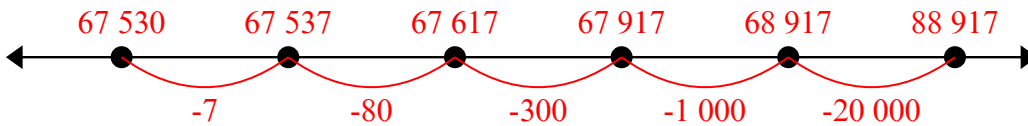
3)  $32\,252 - 13\,518 =$



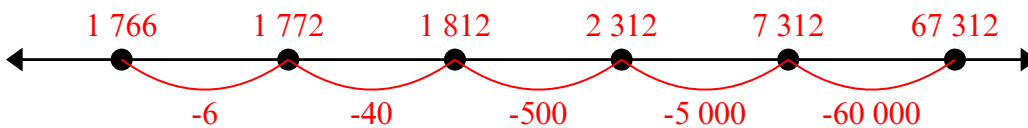
4)  $87\,047 - 53\,525 =$



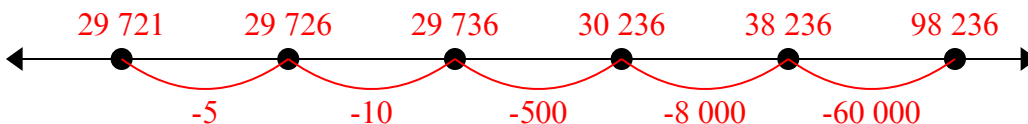
5)  $88\,917 - 21\,387 =$



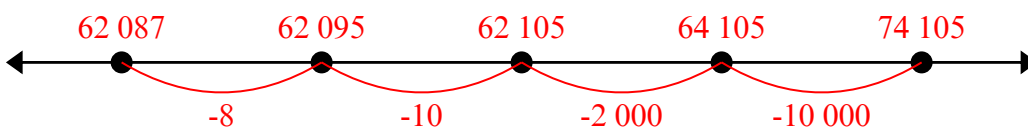
6)  $67\,312 - 65\,546 =$



7)  $98\,236 - 68\,515 =$



8)  $74\,105 - 12\,018 =$

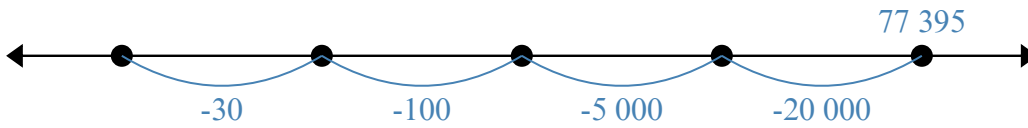
**Ответы**

1. 61 505
2. 60 026
3. 29 507
4. 36 345
5. 32 061
6. 46 579
7. 12 544
8. 62 449

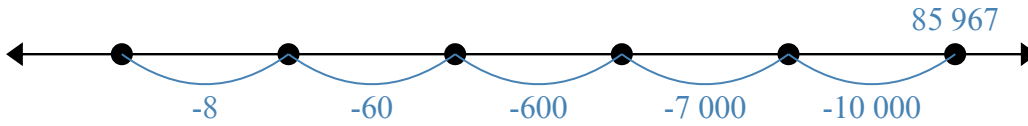


Решите примеры.

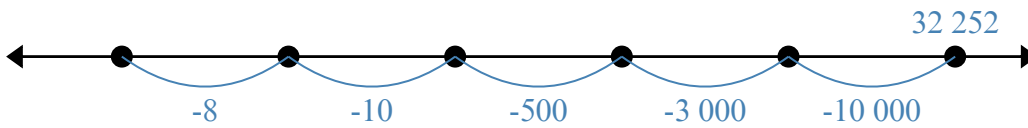
1)  $77\,395 - 25\,130 =$



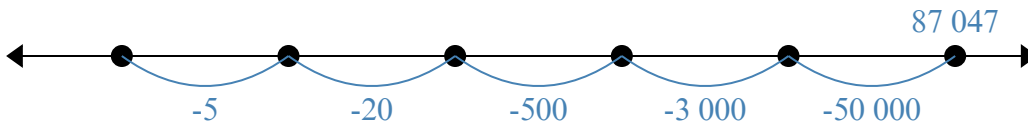
2)  $85\,967 - 17\,668 =$



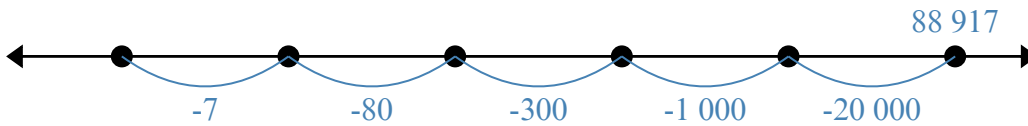
3)  $32\,252 - 13\,518 =$



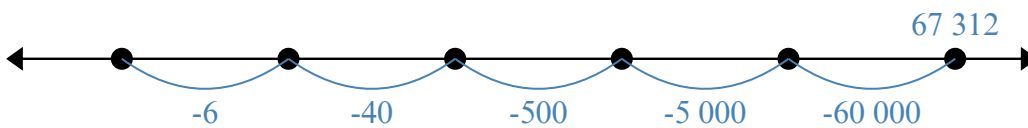
4)  $87\,047 - 53\,525 =$



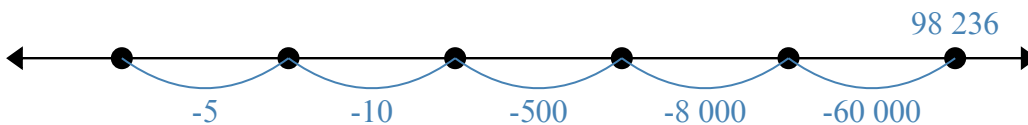
5)  $88\,917 - 21\,387 =$



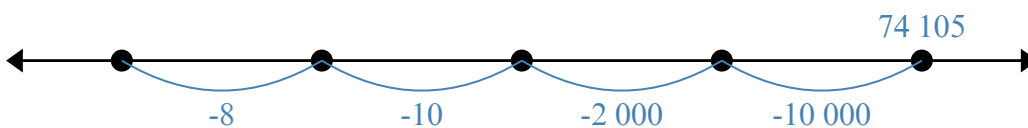
6)  $67\,312 - 65\,546 =$



7)  $98\,236 - 68\,515 =$



8)  $74\,105 - 12\,018 =$

Ответы

1. \_\_\_\_\_

2. \_\_\_\_\_

3. \_\_\_\_\_

4. \_\_\_\_\_

5. \_\_\_\_\_

6. \_\_\_\_\_

7. \_\_\_\_\_

8. \_\_\_\_\_