




Решите примеры.

1) $83\ 883 - 14\ 034 =$



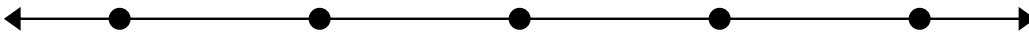
2) $49\ 160 - 34\ 617 =$




3) $55\ 508 - 11\ 757 =$




4) $86\ 198 - 30\ 385 =$



5) $59\ 691 - 43\ 368 =$




6) $88\ 384 - 17\ 761 =$



7) $64\ 802 - 33\ 620 =$



8) $64\ 728 - 15\ 863 =$

**Ответы**

1. _____

2. _____

3. _____

4. _____

5. _____

6. _____

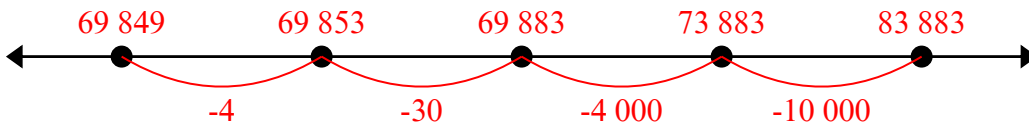
7. _____

8. _____

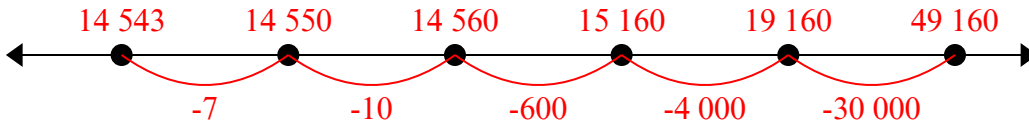


Решите примеры.

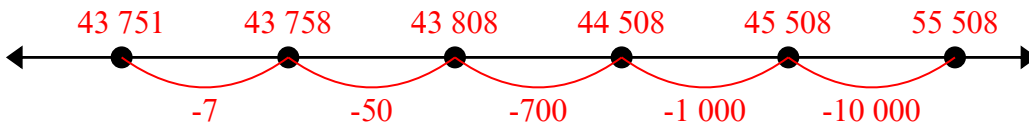
1) $83\ 883 - 14\ 034 =$



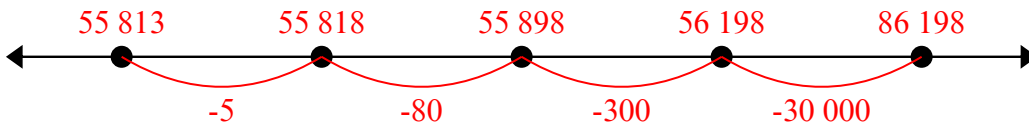
2) $49\ 160 - 34\ 617 =$



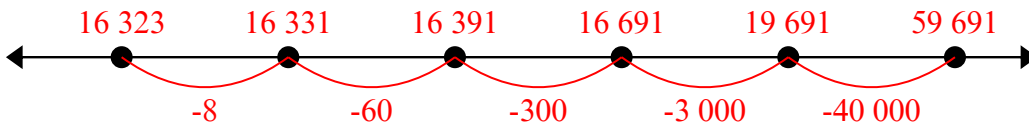
3) $55\ 508 - 11\ 757 =$



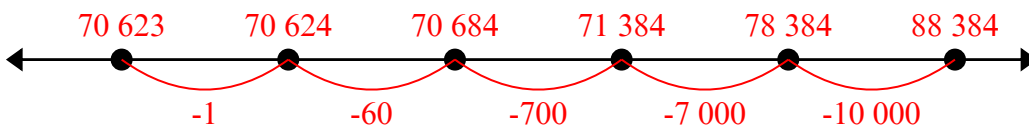
4) $86\ 198 - 30\ 385 =$



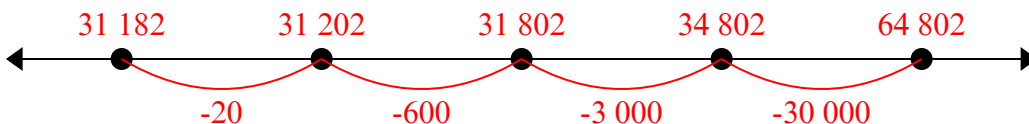
5) $59\ 691 - 43\ 368 =$



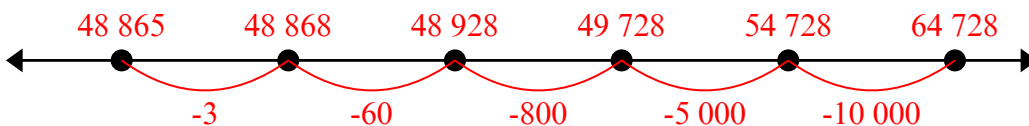
6) $88\ 384 - 17\ 761 =$



7) $64\ 802 - 33\ 620 =$



8) $64\ 728 - 15\ 863 =$



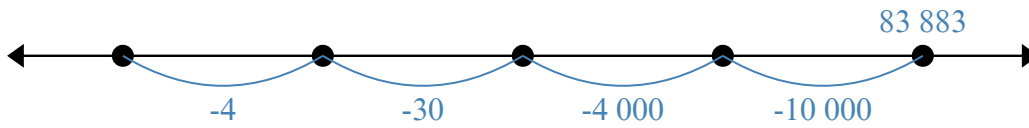
Ответы

1. 61 505
2. 60 026
3. 29 507
4. 36 345
5. 32 061
6. 46 579
7. 12 544
8. 62 449

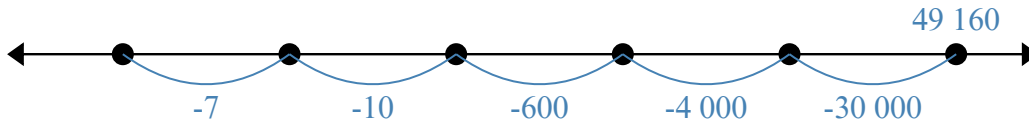


Решите примеры.

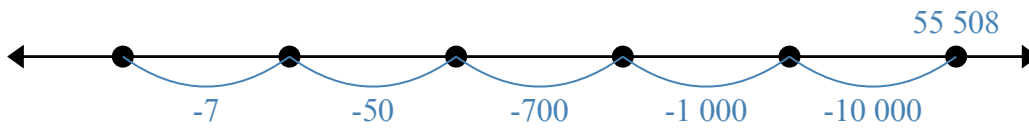
1) $83\,883 - 14\,034 =$



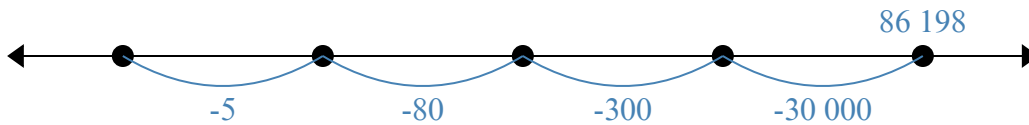
2) $49\,160 - 34\,617 =$



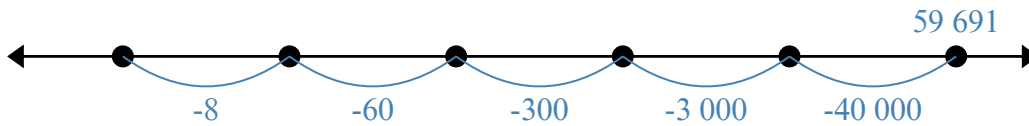
3) $55\,508 - 11\,757 =$



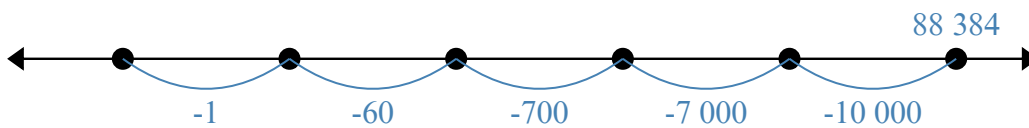
4) $86\,198 - 30\,385 =$



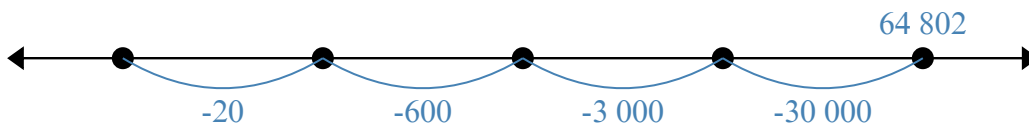
5) $59\,691 - 43\,368 =$



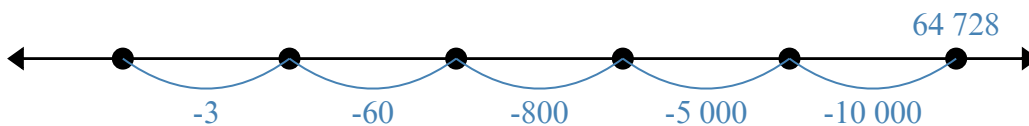
6) $88\,384 - 17\,761 =$



7) $64\,802 - 33\,620 =$



8) $64\,728 - 15\,863 =$

Ответы

1. _____
2. _____
3. _____
4. _____
5. _____
6. _____
7. _____
8. _____