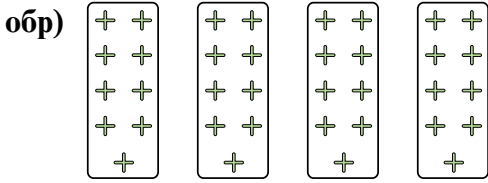


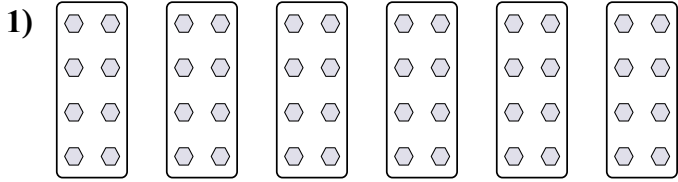


Определите, как нужно изобразить численно данные задачи.


**Ответы**



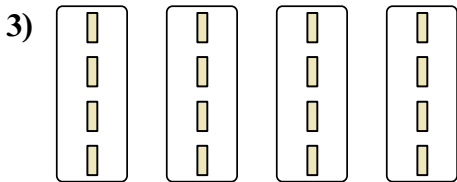
обр  $4 \times 9 = 36$



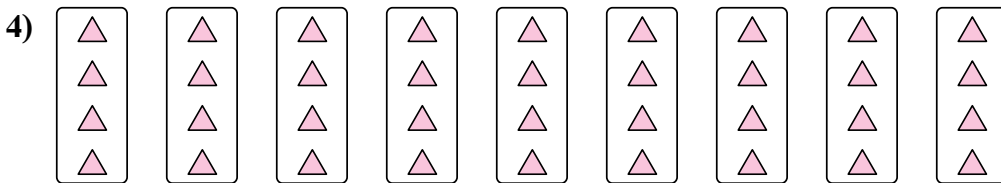
1. \_\_\_\_\_



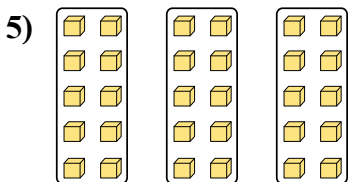
2. \_\_\_\_\_




3. \_\_\_\_\_



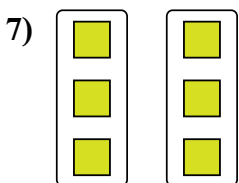
4. \_\_\_\_\_



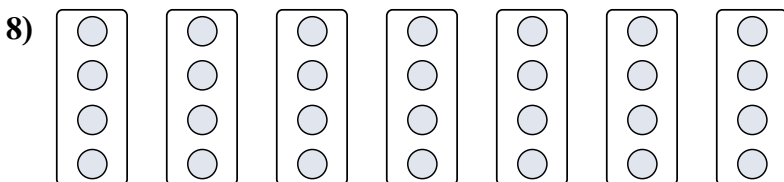
5. \_\_\_\_\_



6. \_\_\_\_\_



7. \_\_\_\_\_

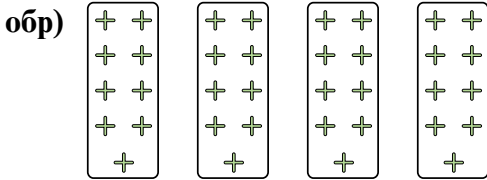


8. \_\_\_\_\_

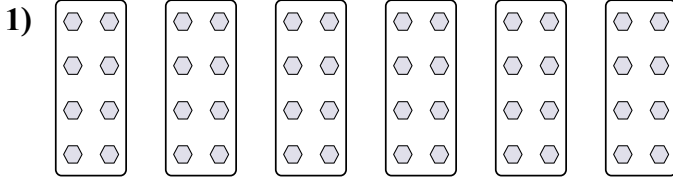


Определите, как нужно изобразить численно данные задачи.


**Ответы**



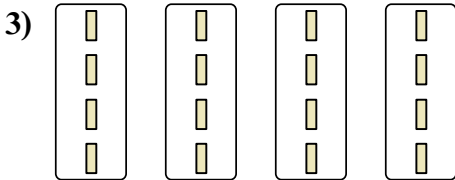
обр  $4 \times 9 = 36$



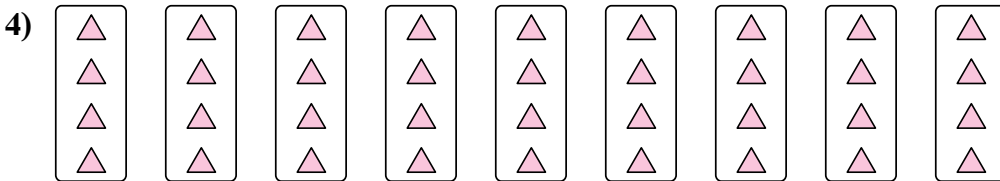
1.  $6 \times 8 = 48$



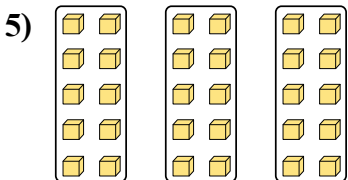
2.  $2 \times 4 = 8$




3.  $4 \times 4 = 16$




4.  $9 \times 4 = 36$



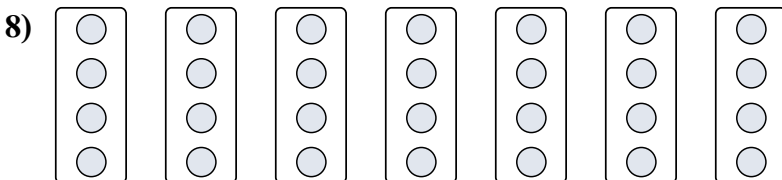
5.  $3 \times 10 = 30$



6.  $3 \times 3 = 9$



7.  $2 \times 3 = 6$



8.  $7 \times 4 = 28$