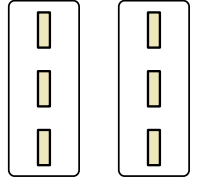




Определите, как нужно изобразить численно данные задачи.

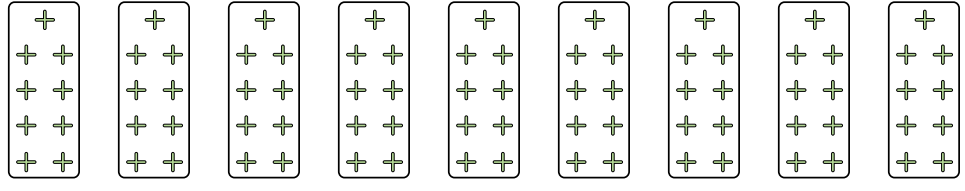
**Ответы**

обр)



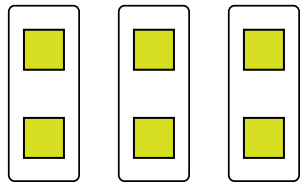
обр  $2 \times 3 = 6$

1)



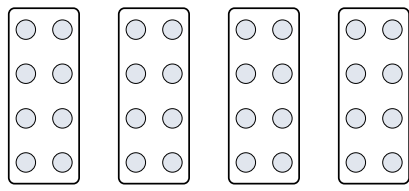
1. \_\_\_\_\_

2)




2. \_\_\_\_\_

3)




3. \_\_\_\_\_

4)



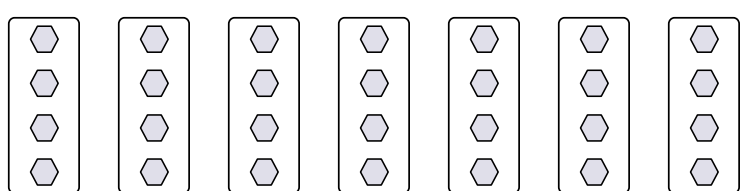
4. \_\_\_\_\_

5)




5. \_\_\_\_\_

6)



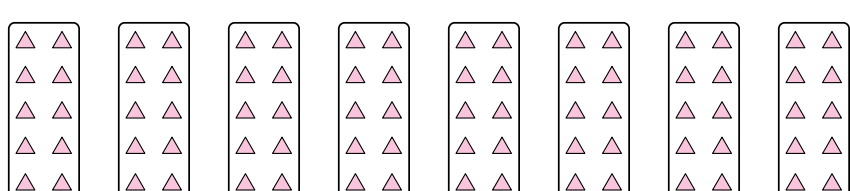
6. \_\_\_\_\_

7)



7. \_\_\_\_\_

8)



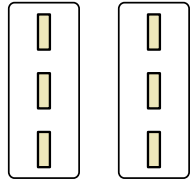
8. \_\_\_\_\_



Определите, как нужно изобразить численно данные задачи.

**Ответы**

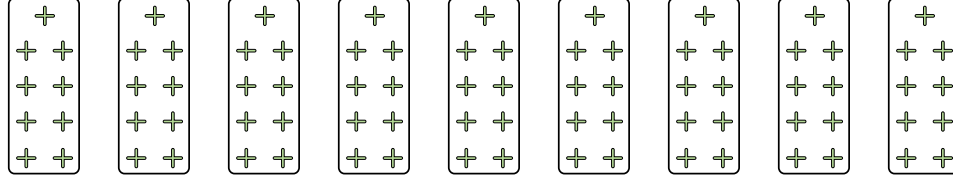
обр)



обр

$2 \times 3 = 6$

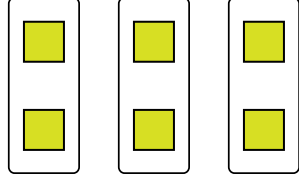
1)



1.

$9 \times 9 = 81$

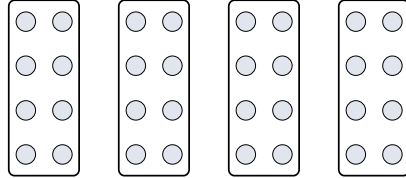
2)



2.

$3 \times 2 = 6$


3)



3.

$4 \times 8 = 32$


4)



4.

$8 \times 6 = 48$

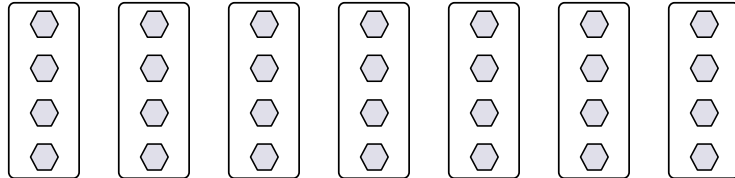
5)



5.

$10 \times 9 = 90$


6)



6.

$7 \times 4 = 28$

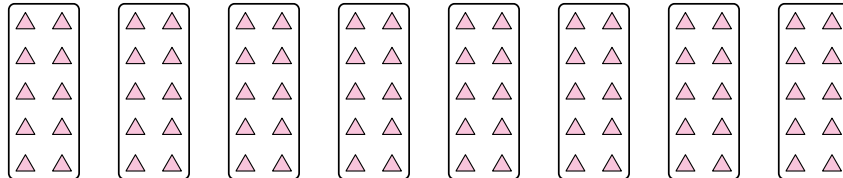
7)



7.

$8 \times 5 = 40$

8)



8.

$8 \times 10 = 80$