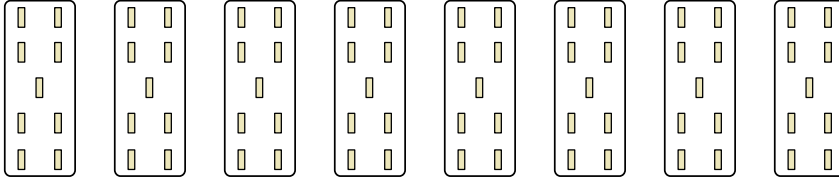




Определите, как нужно изобразить численно данные задачи.

Отвeты

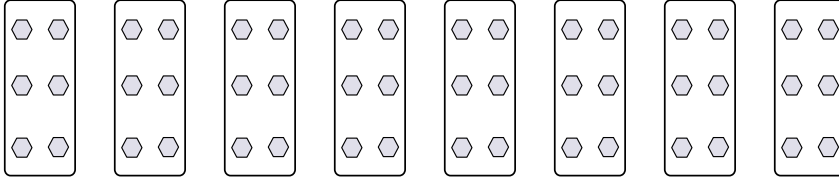
обр)




обр

$8 \times 9 = 72$

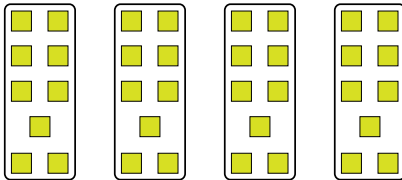
1)



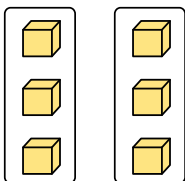
2)



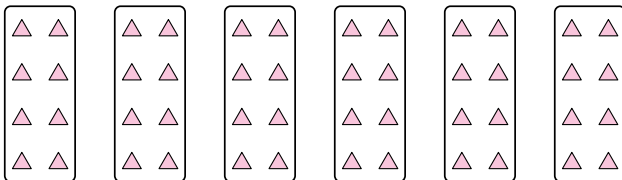
3)



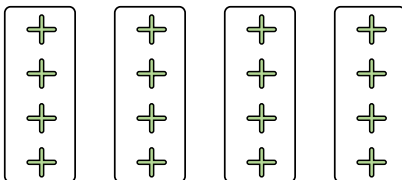
4)




5)




6)



7)



8)



- 1. _____
- 2. _____
- 3. _____
- 4. _____
- 5. _____
- 6. _____
- 7. _____
- 8. _____



Определите, как нужно изобразить численно данные задачи.

Ответы

обр)

обр $8 \times 9 = 72$

1)

1. $8 \times 6 = 48$

2)

2. $2 \times 2 = 4$

3)

3. $4 \times 9 = 36$

4)

4. $2 \times 3 = 6$

5)

5. $6 \times 8 = 48$

6)

6. $4 \times 4 = 16$

7)

7. $7 \times 6 = 42$

8)

8. $8 \times 5 = 40$