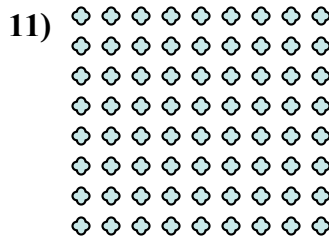





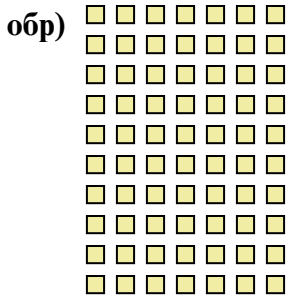




Перепишите каждую матрицу в виде умножения и решите.



Ответы

обр. 10 × 7 = 70

1. _____

2. _____

3. _____

4. _____

5. _____

6. _____

7. _____

8. _____

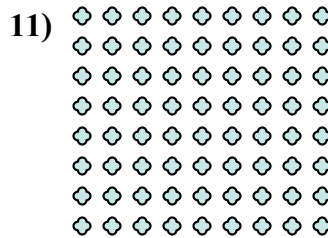



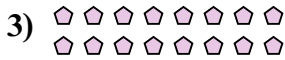

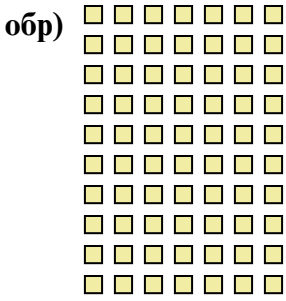
9. _____

10. _____

11. _____



Перепишите каждую матрицу в виде умножения и решите.



Ответы

обр. $10 \times 7 = 70$

1. $7 \times 9 = 63$

2. $6 \times 6 = 36$

3. $2 \times 8 = 16$

4. $10 \times 6 = 60$

5. $8 \times 6 = 48$

6. $6 \times 7 = 42$

7. $4 \times 8 = 32$

8. $10 \times 4 = 40$

9. $2 \times 2 = 4$

10. $9 \times 10 = 90$

11. $8 \times 9 = 72$