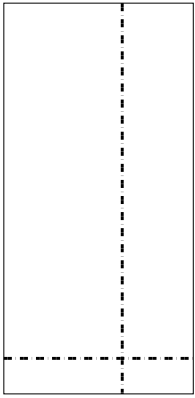


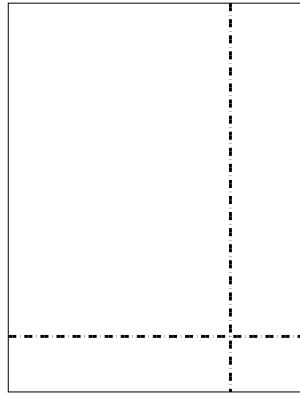


Используйте матрицу для решения задачи.


1) $33 \times 16 =$




2) $35 \times 27 =$



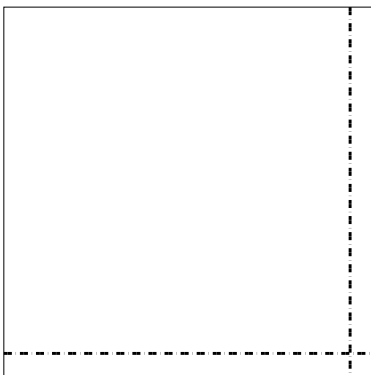
3) $37 \times 57 =$



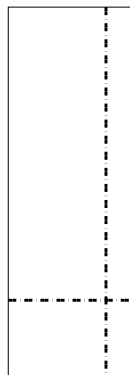
4) $36 \times 33 =$



5) $32 \times 32 =$



6) $38 \times 13 =$



Ответы

1. _____

2. _____

3. _____

4. _____

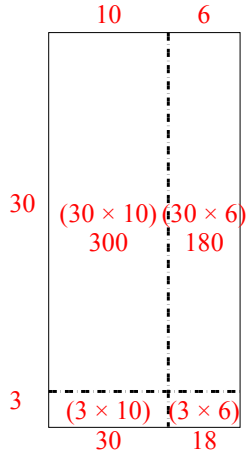
5. _____

6. _____

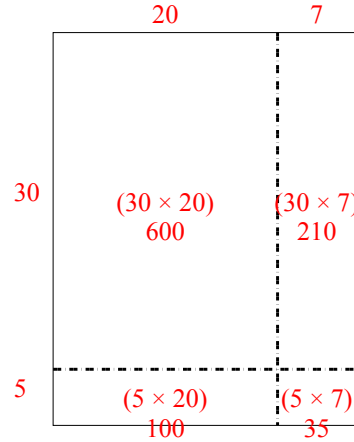


Используйте матрицу для решения задачи.

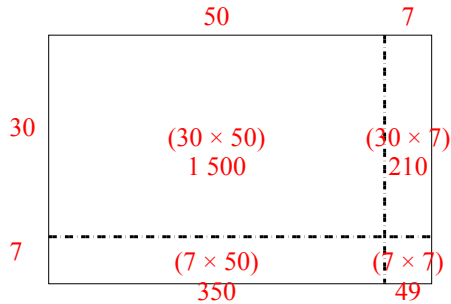
1) $33 \times 16 =$



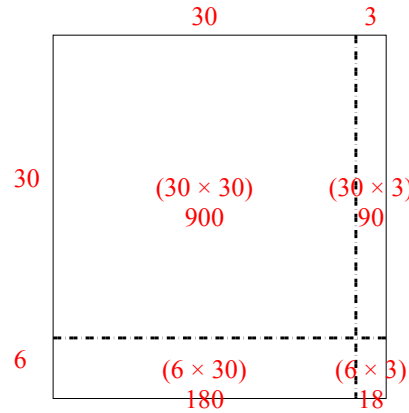
2) $35 \times 27 =$



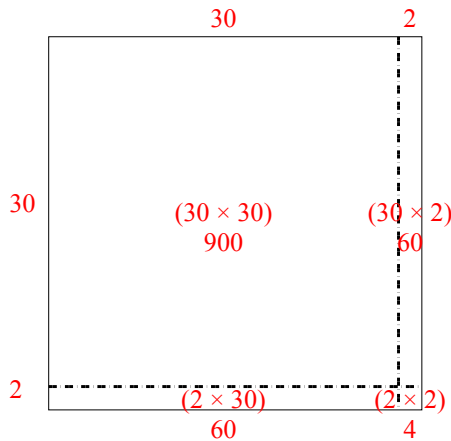
3) $37 \times 57 =$



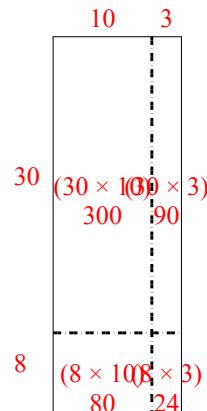
4) $36 \times 33 =$



5) $32 \times 32 =$



6) $38 \times 13 =$



Ответы

1. 528

2. 945

3. 2 109

4. 1 188

5. 1 024

6. 494