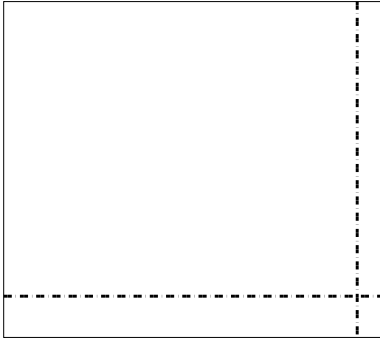





Используйте матрицу для решения задачи.

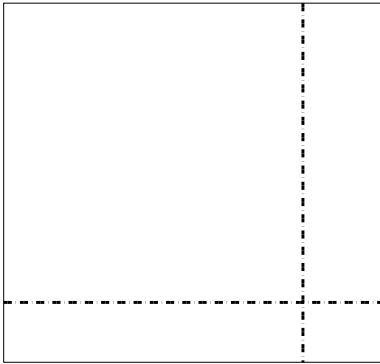
1) $57 \times 64 =$



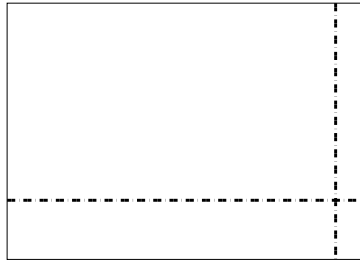
2) $37 \times 46 =$




3) $36 \times 38 =$




4) $39 \times 55 =$



5) $32 \times 35 =$



6) $37 \times 42 =$

**Ответы**

1. _____

2. _____

3. _____

4. _____

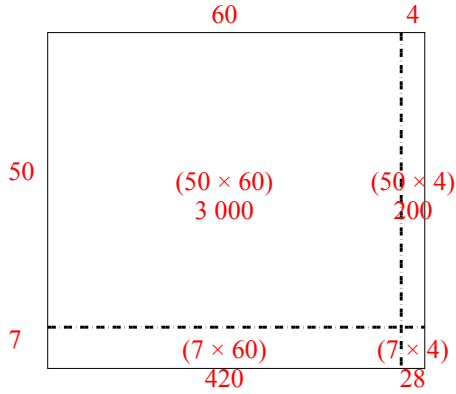
5. _____

6. _____

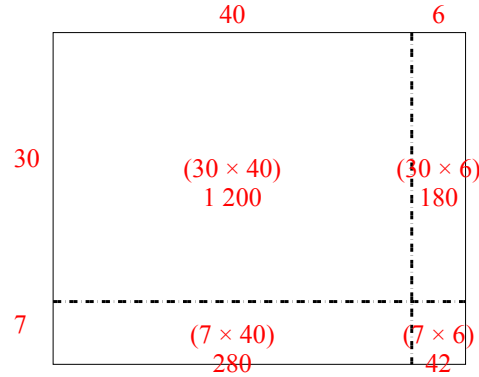


Используйте матрицу для решения задачи.

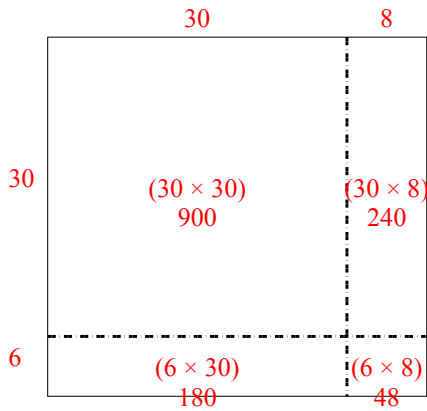
1) $57 \times 64 =$



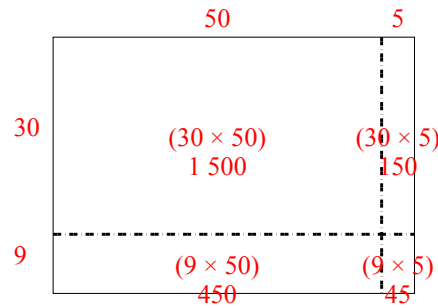
2) $37 \times 46 =$



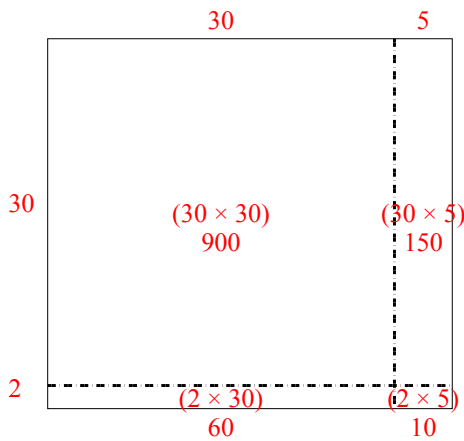
3) $36 \times 38 =$



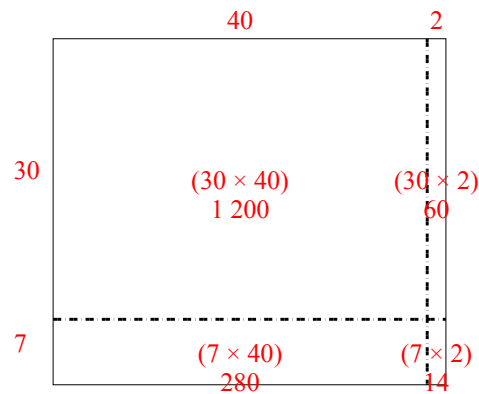
4) $39 \times 55 =$



5) $32 \times 35 =$



6) $37 \times 42 =$



Ответы

1. 3 648
2. 1 702
3. 1 368
4. 2 145
5. 1 120
6. 1 554