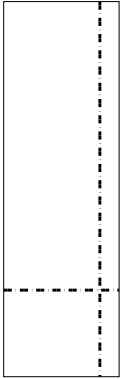


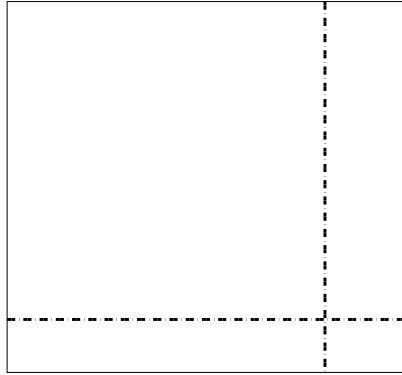


Используйте матрицу для решения задачи.

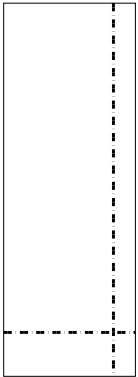
1) $39 \times 12 =$




2) $35 \times 38 =$




3) $34 \times 12 =$




4) $33 \times 48 =$



5) $35 \times 49 =$



6) $36 \times 48 =$

**Ответы**

1. _____

2. _____

3. _____

4. _____

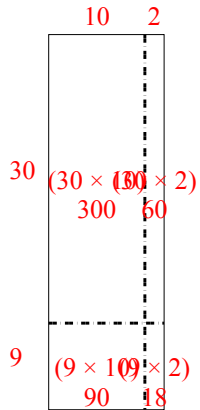
5. _____

6. _____

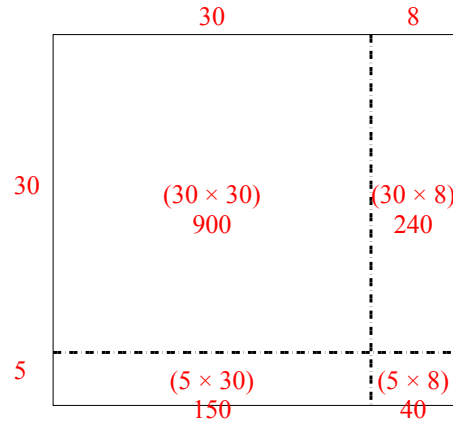


Используйте матрицу для решения задачи.

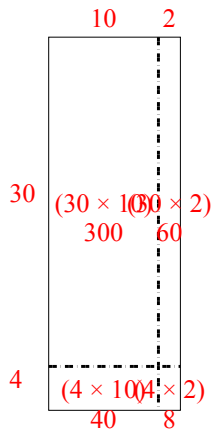
1) $39 \times 12 =$



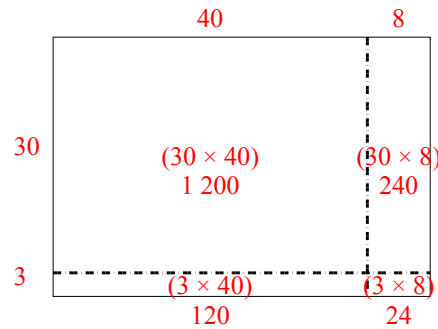
2) $35 \times 38 =$



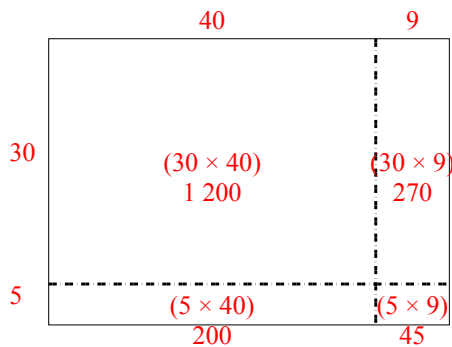
3) $34 \times 12 =$



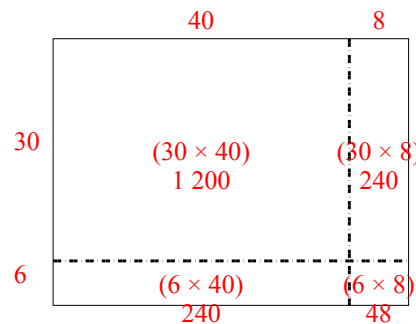
4) $33 \times 48 =$



5) $35 \times 49 =$



6) $36 \times 48 =$



Ответы

1. 468
2. 1 330
3. 408
4. 1 584
5. 1 715
6. 1 728