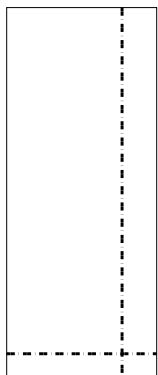


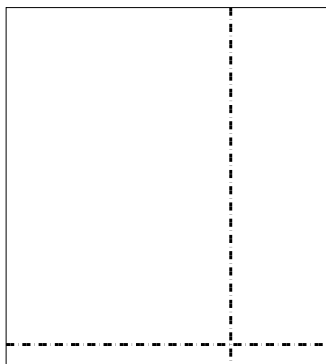


Используйте матрицу для решения задачи.

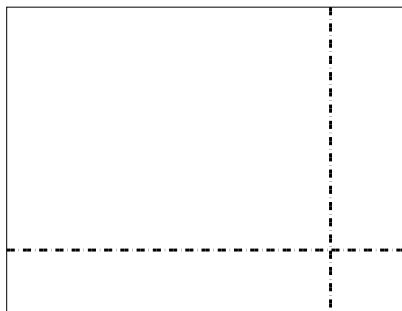
1)  $32 \times 13 =$




2)  $32 \times 29 =$



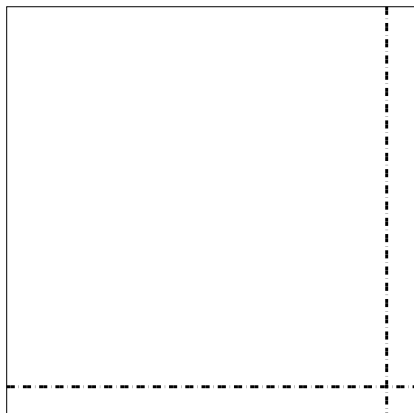
3)  $38 \times 49 =$




4)  $36 \times 43 =$



5)  $43 \times 43 =$



6)  $34 \times 28 =$



**Ответы**

1. \_\_\_\_\_

2. \_\_\_\_\_

3. \_\_\_\_\_

4. \_\_\_\_\_

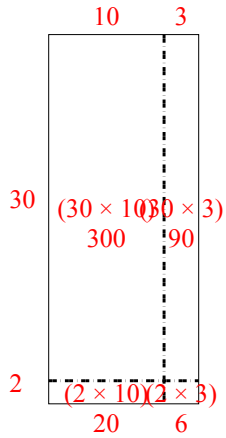
5. \_\_\_\_\_

6. \_\_\_\_\_

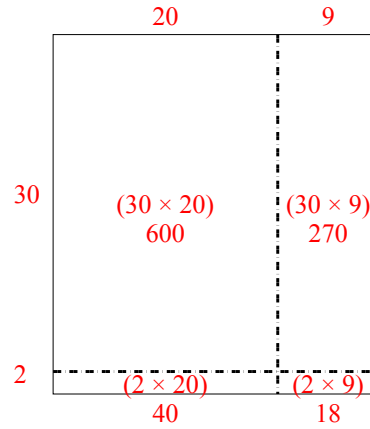


Используйте матрицу для решения задачи.

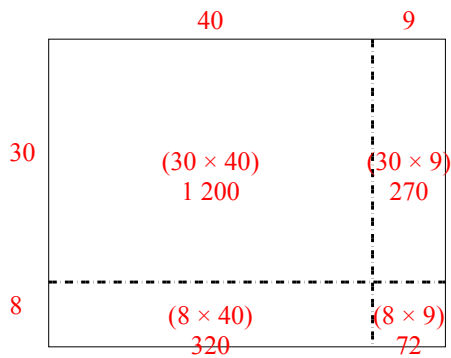
1)  $32 \times 13 =$



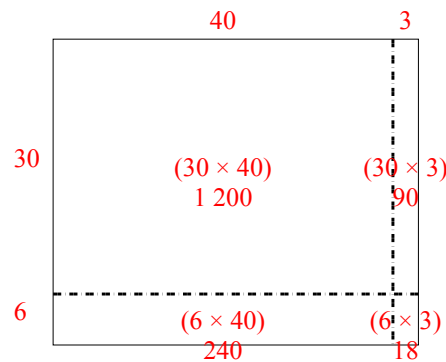
2)  $32 \times 29 =$



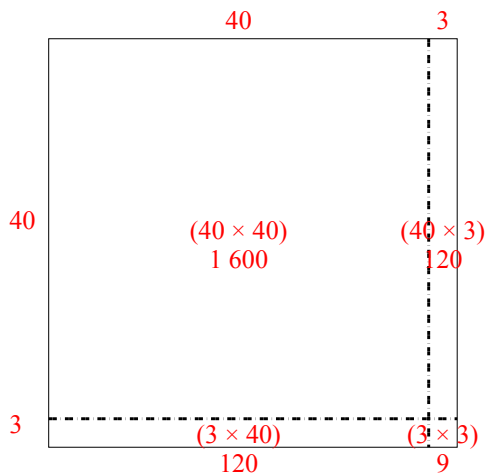
3)  $38 \times 49 =$



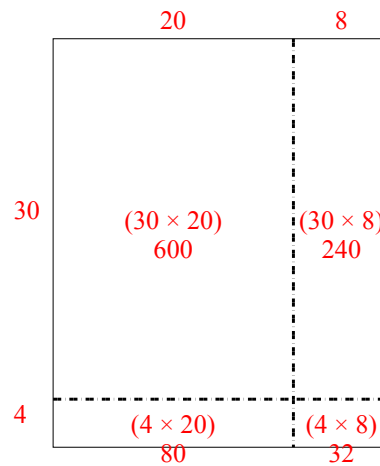
4)  $36 \times 43 =$



5)  $43 \times 43 =$



6)  $34 \times 28 =$



Ответы

1. 416
2. 928
3. 1 862
4. 1 548
5. 1 849
6. 952