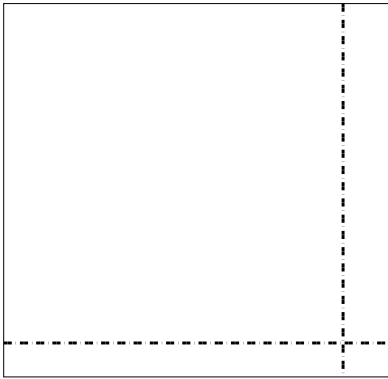





Используйте матрицу для решения задачи.


1) $55 \times 57 =$



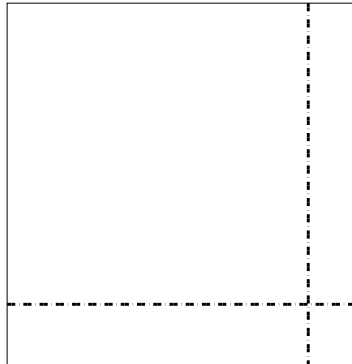
2) $33 \times 15 =$




3) $37 \times 14 =$




4) $36 \times 35 =$



5) $33 \times 17 =$



6) $38 \times 42 =$

**Ответы**

1. _____

2. _____

3. _____

4. _____

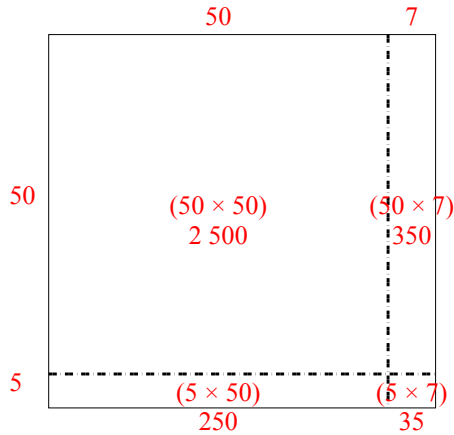
5. _____

6. _____

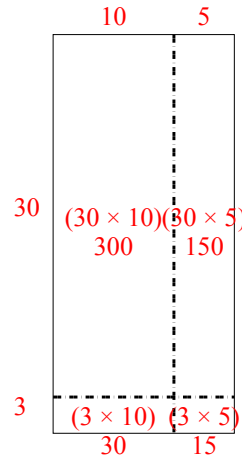


Используйте матрицу для решения задачи.

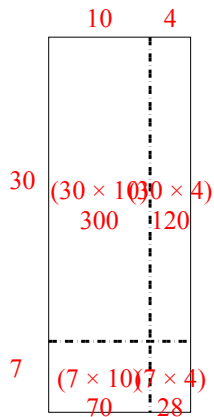
1) $55 \times 57 =$



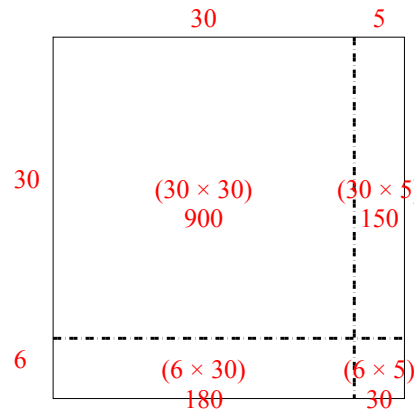
2) $33 \times 15 =$



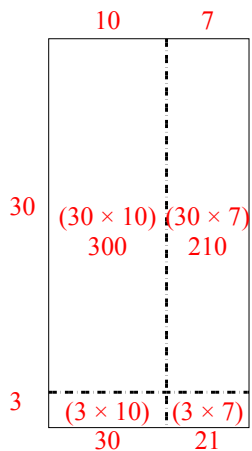
3) $37 \times 14 =$



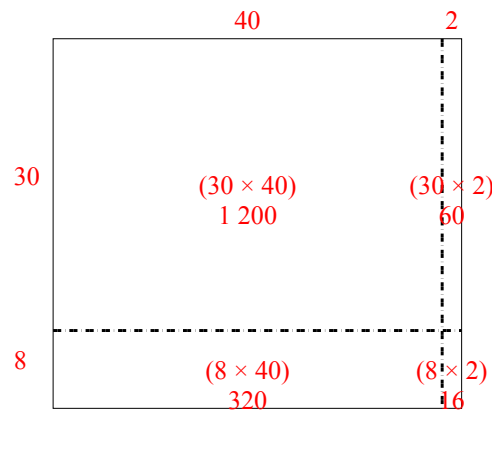
4) $36 \times 35 =$



5) $33 \times 17 =$



6) $38 \times 42 =$



Ответы

1. 3 135
2. 495
3. 518
4. 1 260
5. 561
6. 1 596