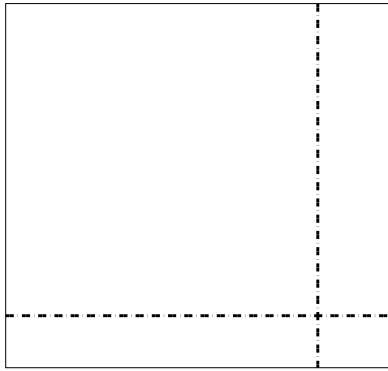





Используйте матрицу для решения задачи.

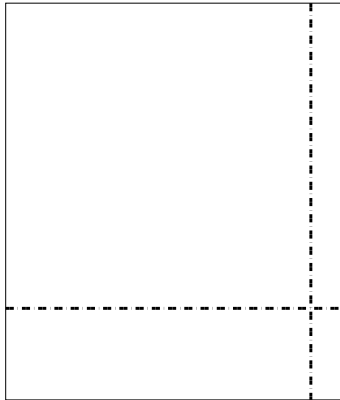
1)  $35 \times 37 =$




2)  $32 \times 32 =$



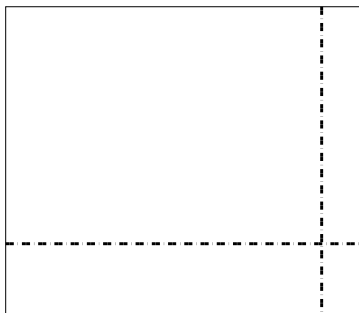
3)  $39 \times 33 =$




4)  $38 \times 23 =$



5)  $39 \times 45 =$



6)  $35 \times 18 =$

**Ответы**

1. \_\_\_\_\_

2. \_\_\_\_\_

3. \_\_\_\_\_

4. \_\_\_\_\_

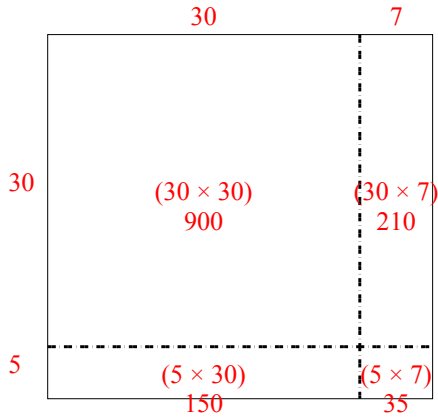
5. \_\_\_\_\_

6. \_\_\_\_\_

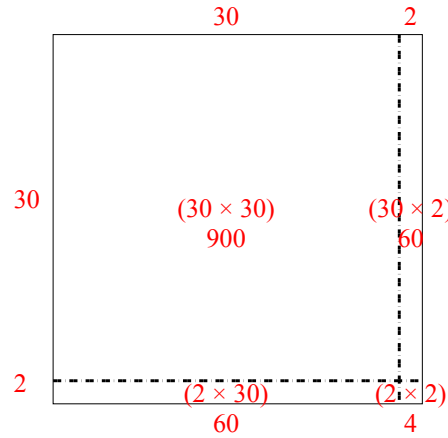


Используйте матрицу для решения задачи.

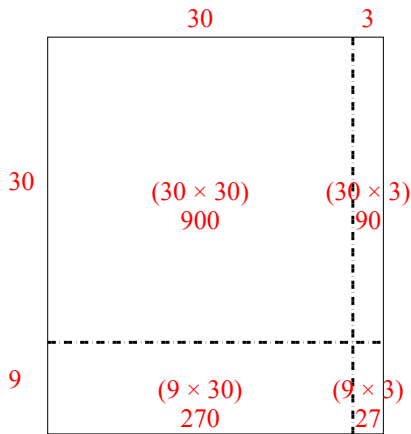
1)  $35 \times 37 =$



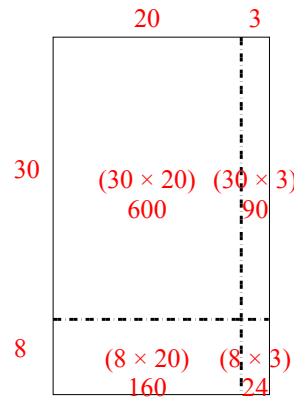
2)  $32 \times 32 =$



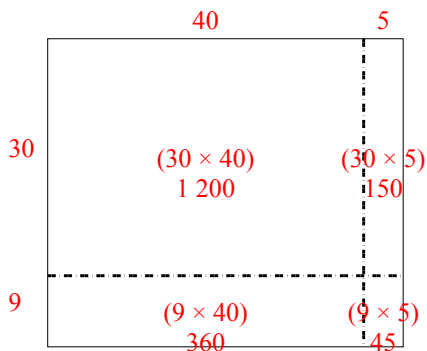
3)  $39 \times 33 =$



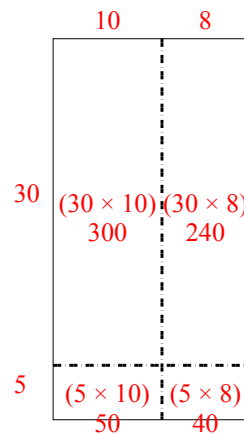
4)  $38 \times 23 =$



5)  $39 \times 45 =$



6)  $35 \times 18 =$



Ответы

1. 1 295
2. 1 024
3. 1 287
4. 874
5. 1 755
6. 630