





Используйте матрицу для решения задачи.

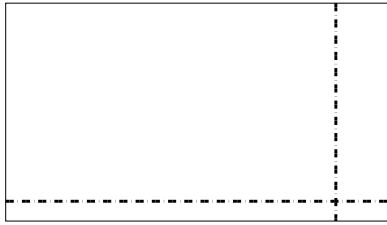
1) $63 \times 73 =$




2) $33 \times 28 =$




3) $33 \times 58 =$



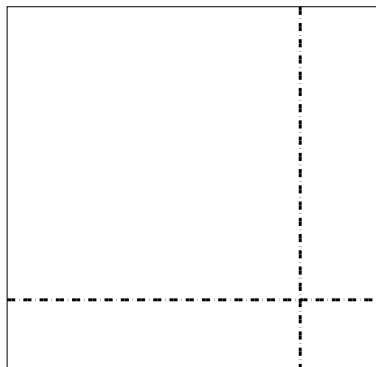
4) $52 \times 55 =$



5) $35 \times 16 =$



6) $37 \times 39 =$



Ответы

1. _____

2. _____

3. _____

4. _____

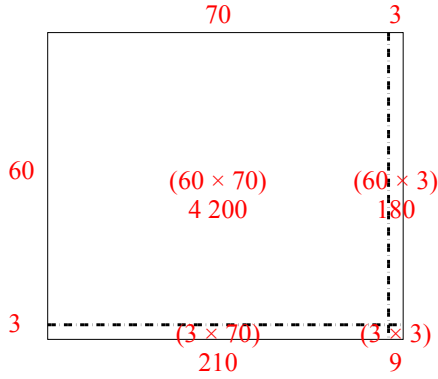
5. _____

6. _____

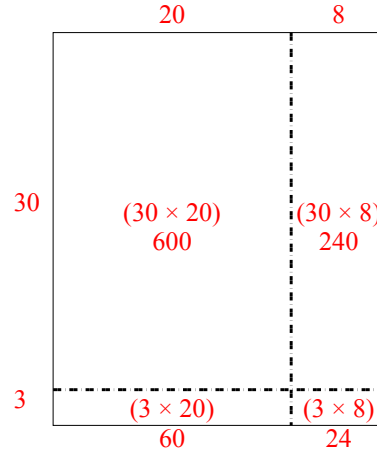


Используйте матрицу для решения задачи.

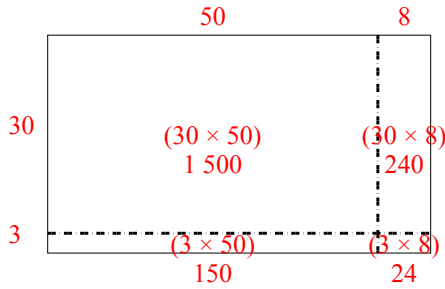
1) $63 \times 73 =$



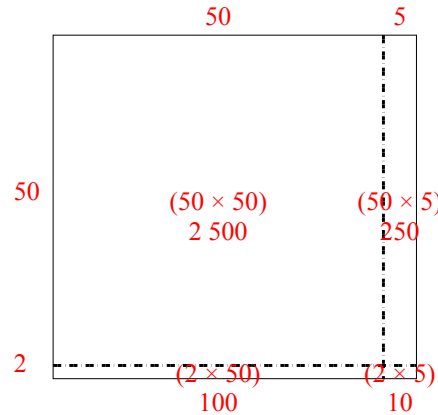
2) $33 \times 28 =$



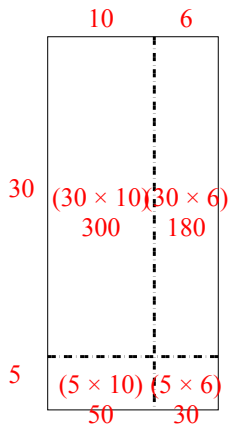
3) $33 \times 58 =$



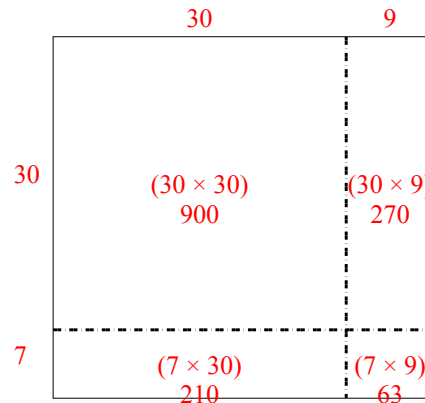
4) $52 \times 55 =$



5) $35 \times 16 =$



6) $37 \times 39 =$



Ответы

1. 4 599
2. 924
3. 1 914
4. 2 860
5. 560
6. 1 443