





Используйте матрицу для решения задачи.

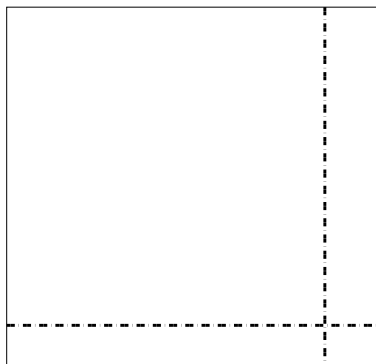
1) $34 \times 49 =$




2) $32 \times 25 =$




3) $34 \times 35 =$




4) $39 \times 42 =$



5) $37 \times 43 =$



6) $45 \times 34 =$

**Ответы**

1. _____

2. _____

3. _____

4. _____

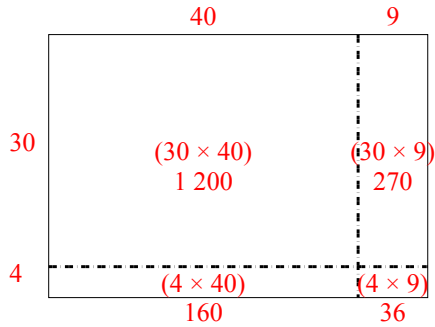
5. _____

6. _____

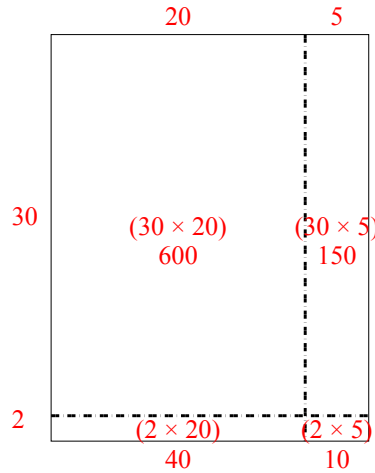


Используйте матрицу для решения задачи.

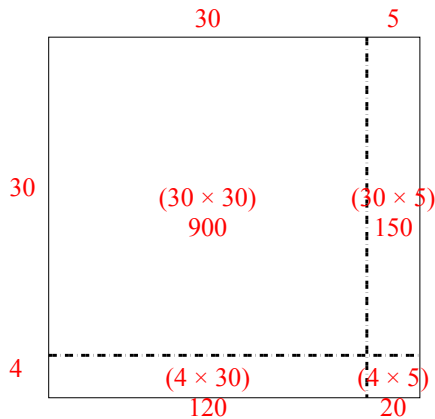
1) $34 \times 49 =$



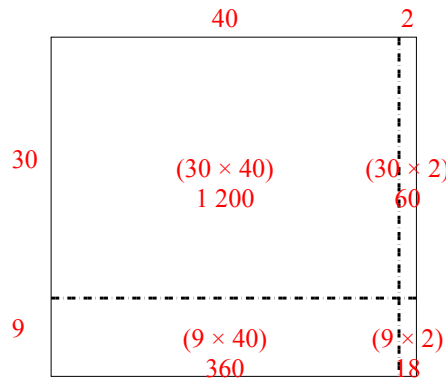
2) $32 \times 25 =$



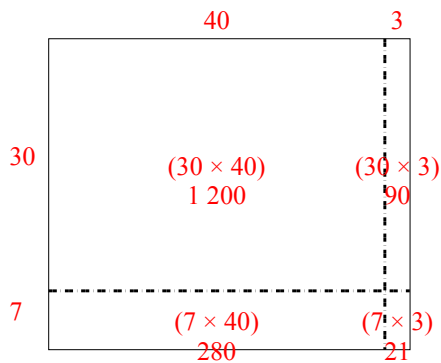
3) $34 \times 35 =$



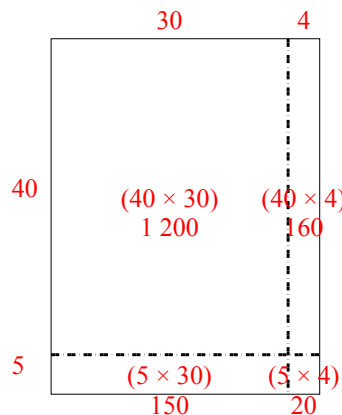
4) $39 \times 42 =$



5) $37 \times 43 =$



6) $45 \times 34 =$



Ответы

1. 1 666
2. 800
3. 1 190
4. 1 638
5. 1 591
6. 1 530