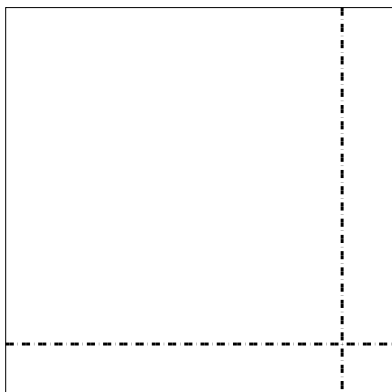





Используйте матрицу для решения задачи.

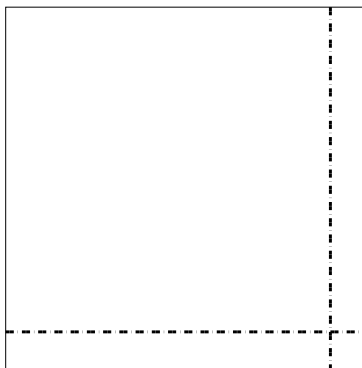
1) $69 \times 69 =$



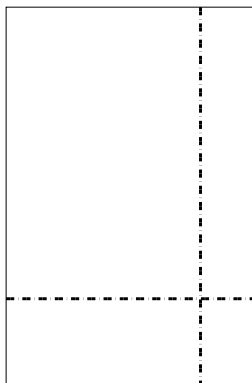
2) $56 \times 32 =$



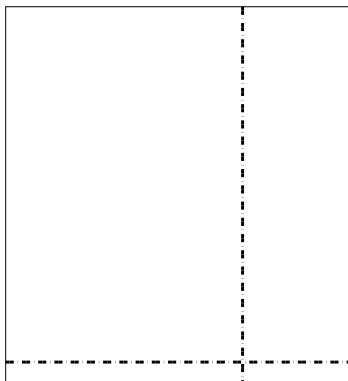
3) $45 \times 44 =$




4) $39 \times 26 =$



5) $32 \times 29 =$



6) $39 \times 45 =$



Ответы

1. _____

2. _____

3. _____

4. _____

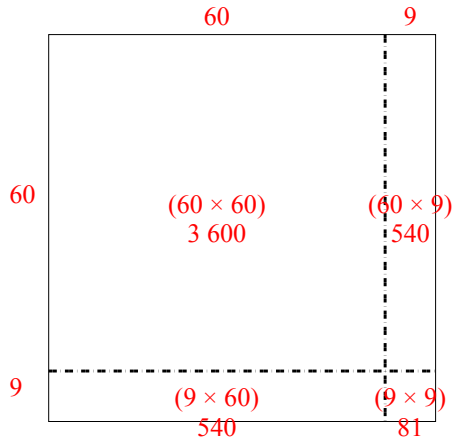
5. _____

6. _____

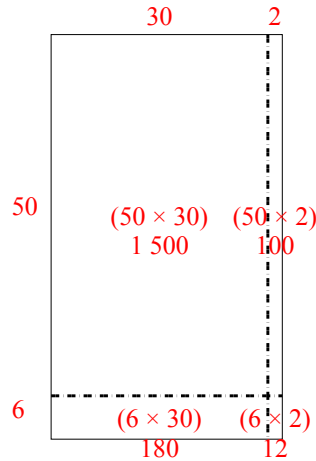


Используйте матрицу для решения задачи.

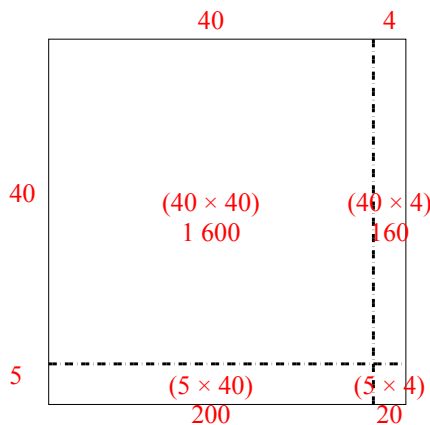
1) $69 \times 69 =$



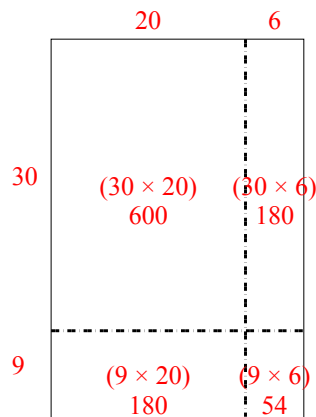
2) $56 \times 32 =$



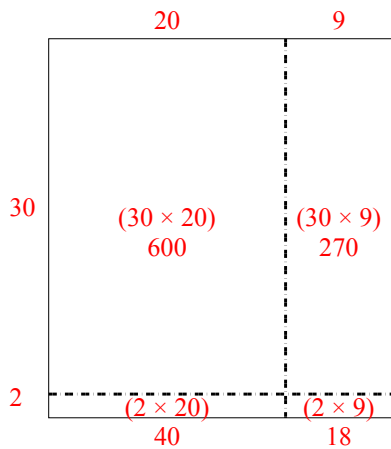
3) $45 \times 44 =$



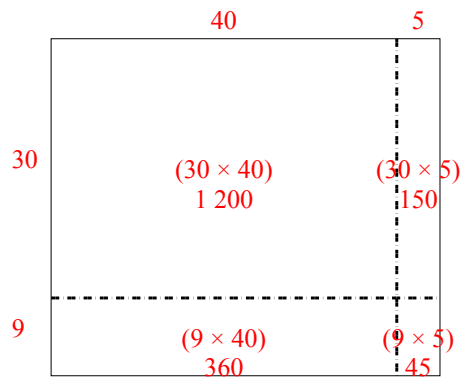
4) $39 \times 26 =$



5) $32 \times 29 =$



6) $39 \times 45 =$



Ответы

1. 4 761
2. 1 792
3. 1 980
4. 1 014
5. 928
6. 1 755