


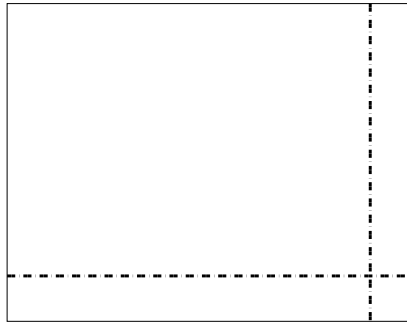


Используйте матрицу для решения задачи.


1) $46 \times 25 =$




2) $35 \times 45 =$




3) $32 \times 36 =$




4) $33 \times 46 =$



5) $35 \times 38 =$



6) $38 \times 25 =$

**Ответы**

1. _____

2. _____

3. _____

4. _____

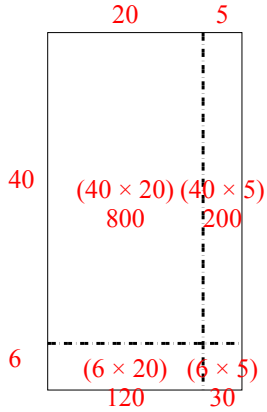
5. _____

6. _____

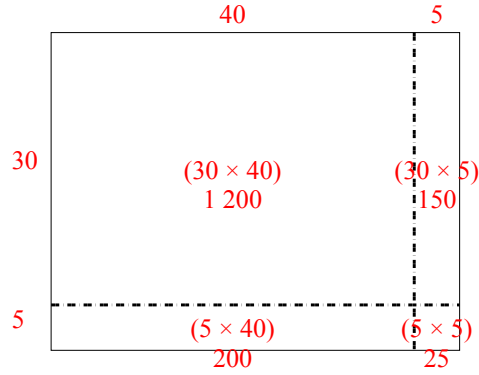


Используйте матрицу для решения задачи.

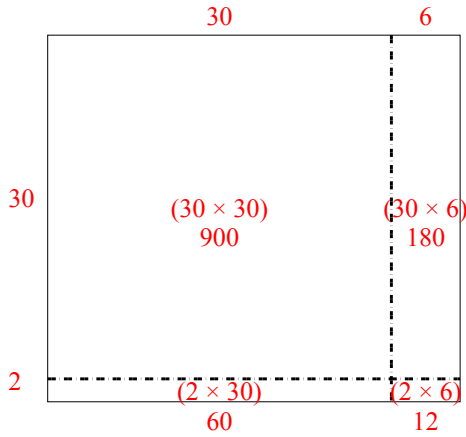
1) $46 \times 25 =$



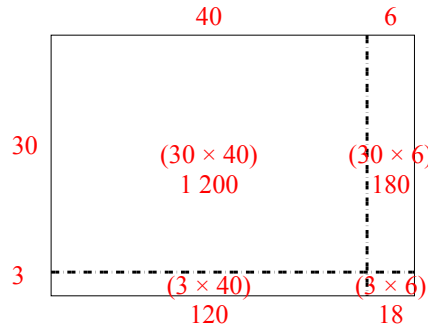
2) $35 \times 45 =$



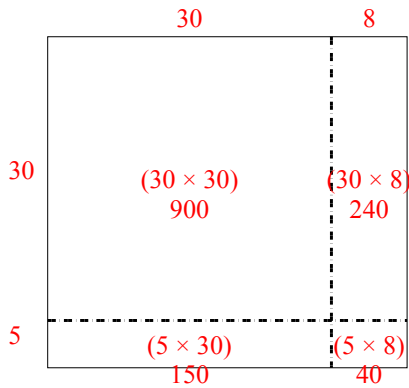
3) $32 \times 36 =$



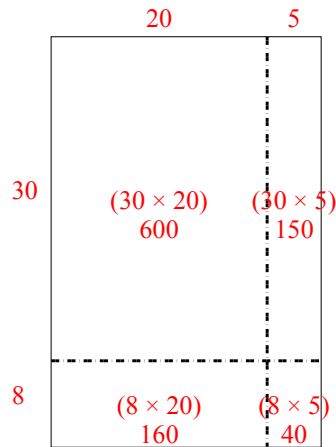
4) $33 \times 46 =$



5) $35 \times 38 =$



6) $38 \times 25 =$



Ответы

1. 1 150
2. 1 575
3. 1 152
4. 1 518
5. 1 330
6. 950