





Используйте матрицу для решения задачи.


1) $59 \times 33 =$




2) $56 \times 39 =$



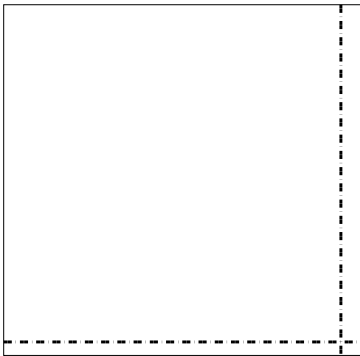
3) $44 \times 57 =$




4) $53 \times 37 =$



5) $52 \times 53 =$



6) $47 \times 23 =$



Ответы

1. _____

2. _____

3. _____

4. _____

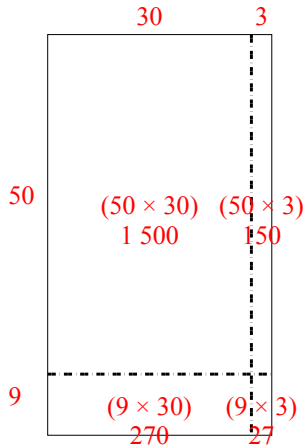
5. _____

6. _____

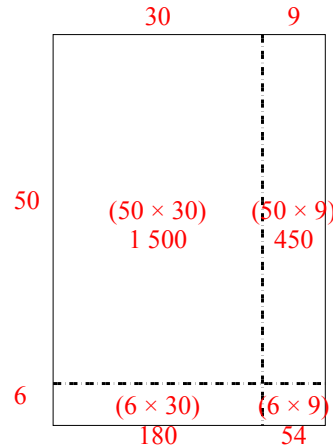


Используйте матрицу для решения задачи.

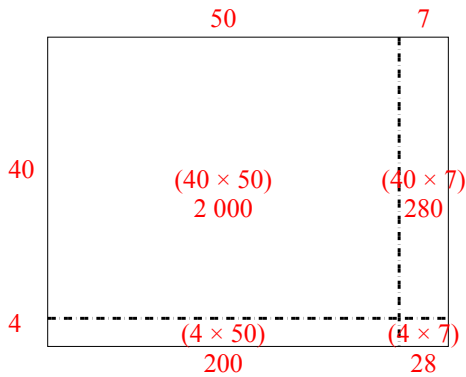
1) $59 \times 33 =$



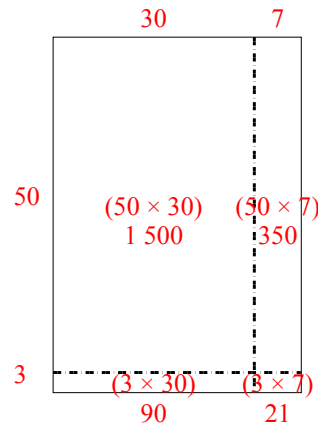
2) $56 \times 39 =$



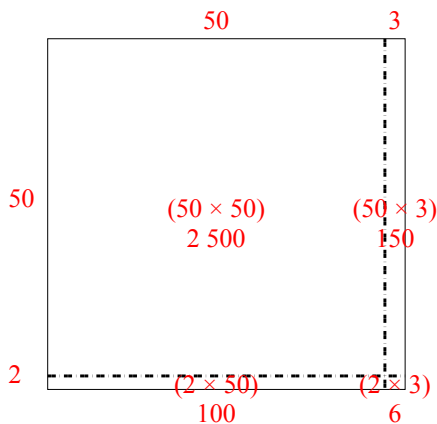
3) $44 \times 57 =$



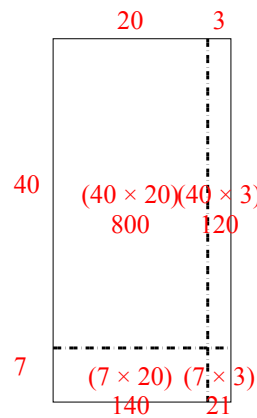
4) $53 \times 37 =$



5) $52 \times 53 =$



6) $47 \times 23 =$



Ответы

1. 1 947
2. 2 184
3. 2 508
4. 1 961
5. 2 756
6. 1 081