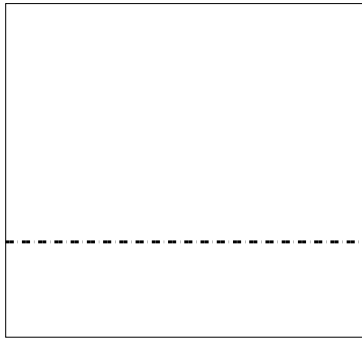





Используйте матрицу для решения задачи.


1) $28 \times 30 =$




2) $23 \times 20 =$




3) $20 \times 22 =$




4) $20 \times 23 =$



5) $24 \times 20 =$



6) $20 \times 25 =$

**Ответы**

1. _____

2. _____

3. _____

4. _____

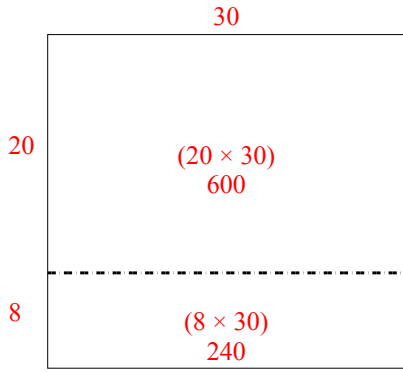
5. _____

6. _____

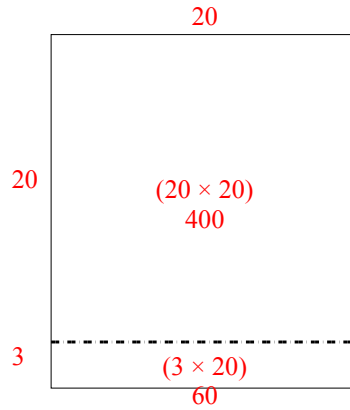


Используйте матрицу для решения задачи.

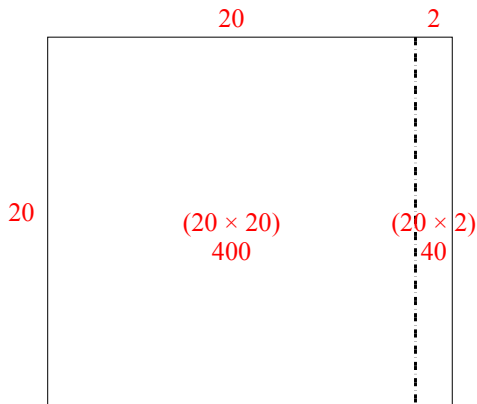
1) $28 \times 30 =$



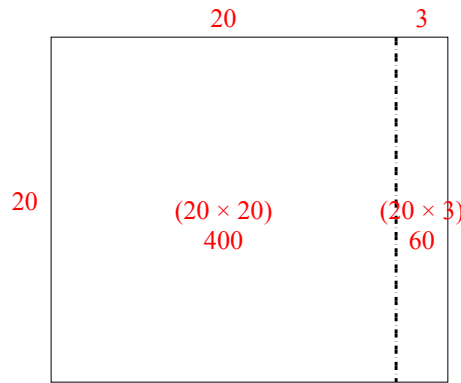
2) $23 \times 20 =$



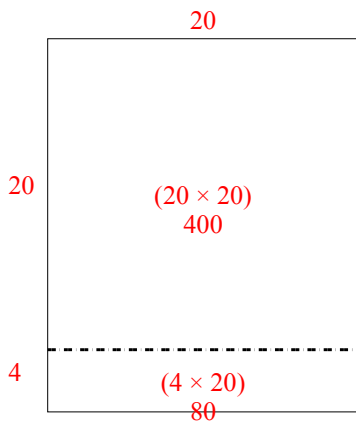
3) $20 \times 22 =$



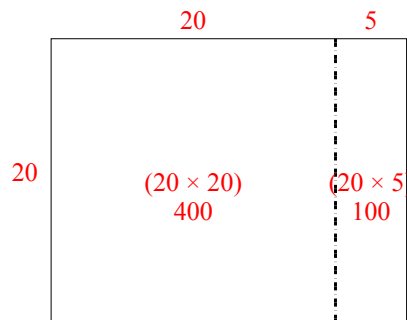
4) $20 \times 23 =$



5) $24 \times 20 =$



6) $20 \times 25 =$



Ответы

1. 840
2. 460
3. 440
4. 460
5. 480
6. 500