




Используйте матрицу для решения задачи.


1) $35 \times 30 =$




2) $21 \times 30 =$




3) $26 \times 20 =$




4) $24 \times 20 =$



5) $21 \times 20 =$



6) $20 \times 22 =$



Ответы

1. _____

2. _____

3. _____

4. _____

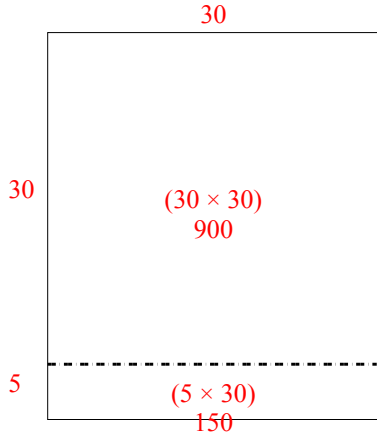
5. _____

6. _____

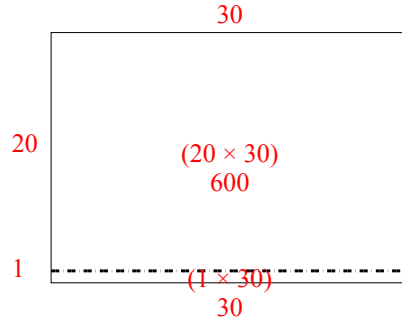


Используйте матрицу для решения задачи.

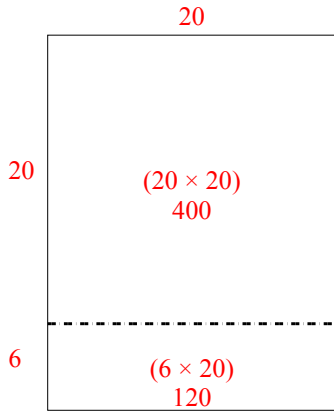
1) $35 \times 30 =$



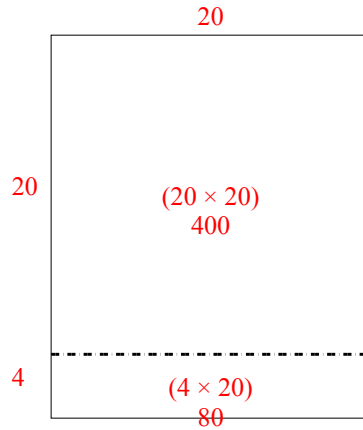
2) $21 \times 30 =$



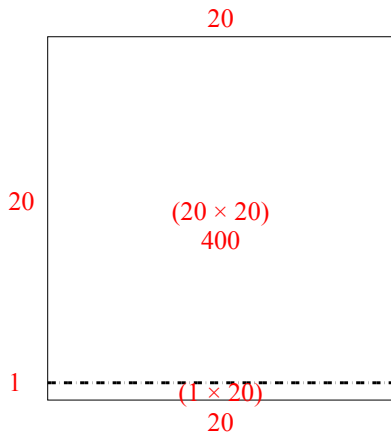
3) $26 \times 20 =$



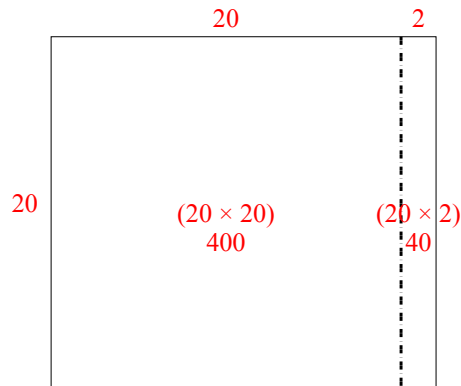
4) $24 \times 20 =$



5) $21 \times 20 =$



6) $20 \times 22 =$



Ответы

1. 1 050
2. 630
3. 520
4. 480
5. 420
6. 440