




Используйте матрицу для решения задачи.

1) $30 \times 23 =$




2) $31 \times 20 =$




3) $20 \times 26 =$



4) $20 \times 29 =$



5) $20 \times 28 =$



6) $20 \times 23 =$



Ответы

1. _____

2. _____

3. _____

4. _____

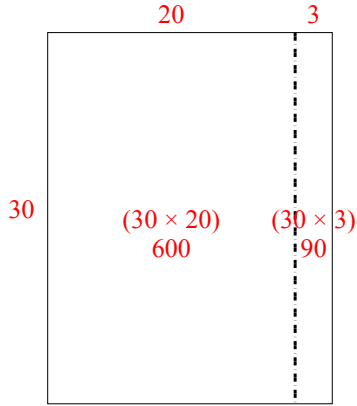
5. _____

6. _____

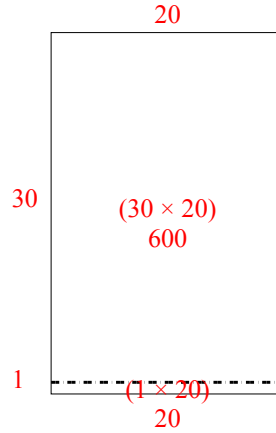


Используйте матрицу для решения задачи.

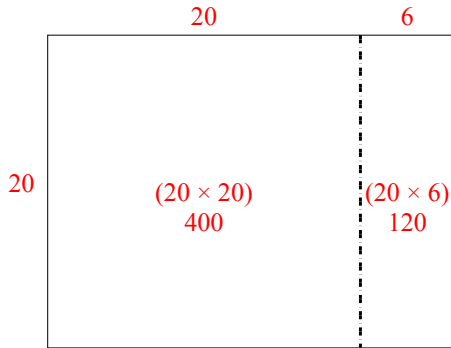
1) $30 \times 23 =$



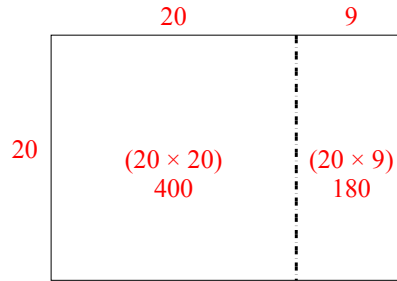
2) $31 \times 20 =$



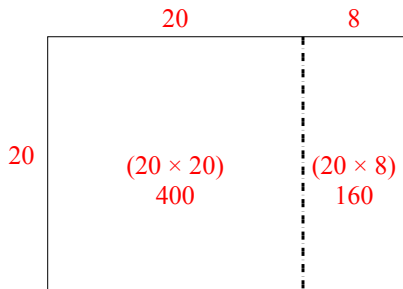
3) $20 \times 26 =$



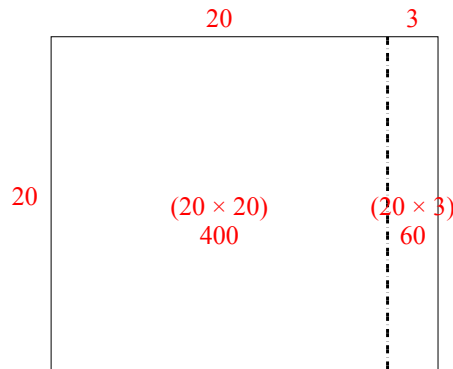
4) $20 \times 29 =$



5) $20 \times 28 =$



6) $20 \times 23 =$



Ответы

1. 690
2. 620
3. 520
4. 580
5. 560
6. 460