





Используйте матрицу для решения задачи.


1) $20 \times 29 =$




2) $27 \times 20 =$




3) $23 \times 20 =$




4) $20 \times 27 =$



5) $20 \times 25 =$



6) $26 \times 20 =$

**Ответы**

1. _____

2. _____

3. _____

4. _____

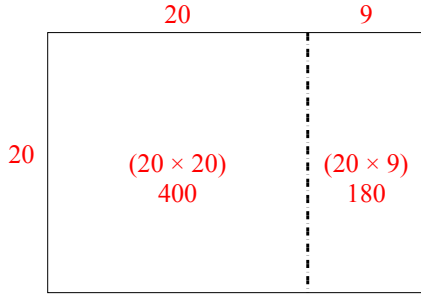
5. _____

6. _____

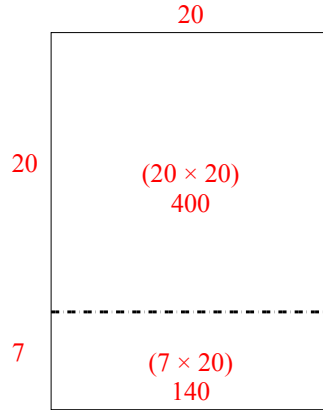


Используйте матрицу для решения задачи.

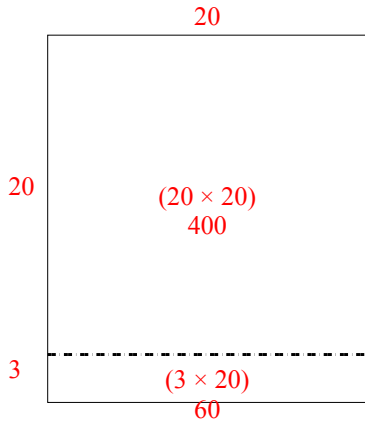
1) $20 \times 29 =$



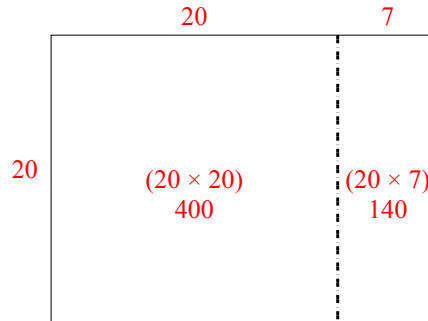
2) $27 \times 20 =$



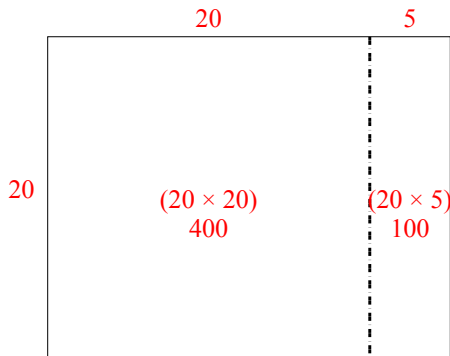
3) $23 \times 20 =$



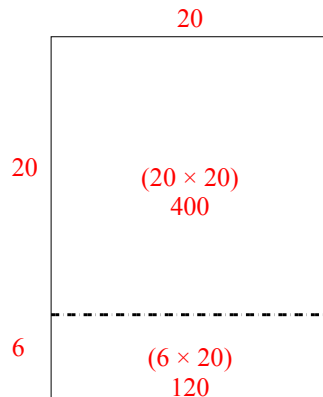
4) $20 \times 27 =$



5) $20 \times 25 =$



6) $26 \times 20 =$



Ответы

1. 580
2. 540
3. 460
4. 540
5. 500
6. 520