





Используйте матрицу для решения задачи.


1) $30 \times 24 =$




2) $20 \times 23 =$




3) $27 \times 20 =$




4) $20 \times 22 =$



5) $29 \times 20 =$



6) $26 \times 20 =$



Ответы

1. _____

2. _____

3. _____

4. _____

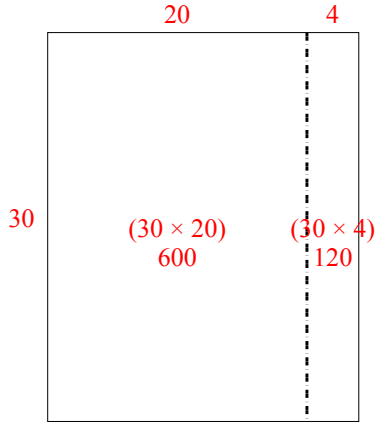
5. _____

6. _____

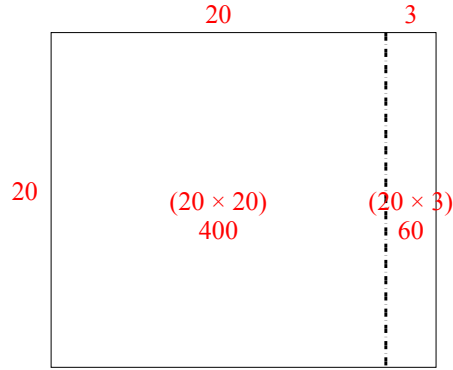


Используйте матрицу для решения задачи.

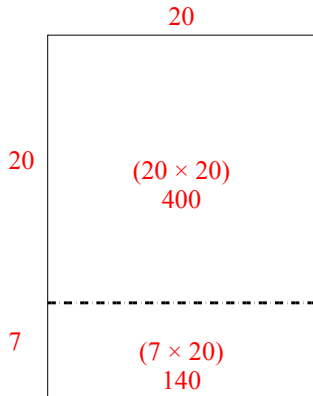
1) $30 \times 24 =$



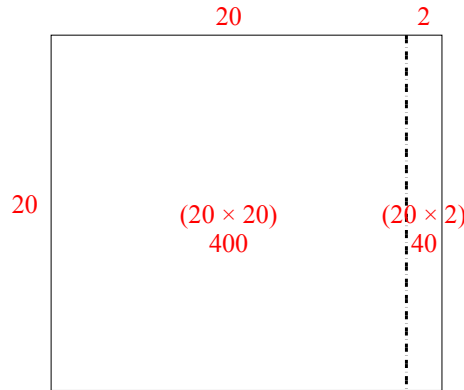
2) $20 \times 23 =$



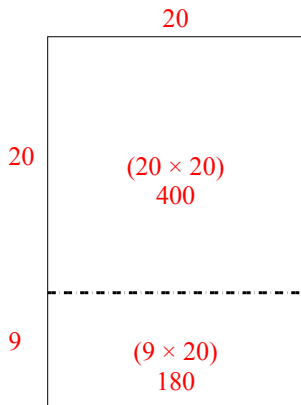
3) $27 \times 20 =$



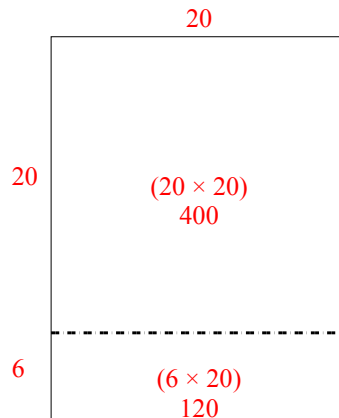
4) $20 \times 22 =$



5) $29 \times 20 =$



6) $26 \times 20 =$



Ответы

1. 720
2. 460
3. 540
4. 440
5. 580
6. 520