





Используйте матрицу для решения задачи.


1) $30 \times 28 =$




2) $20 \times 22 =$




3) $27 \times 20 =$




4) $23 \times 20 =$



5) $22 \times 20 =$



6) $20 \times 28 =$



Ответы

1. _____

2. _____

3. _____

4. _____

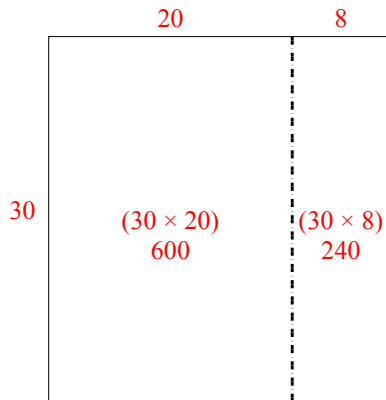
5. _____

6. _____

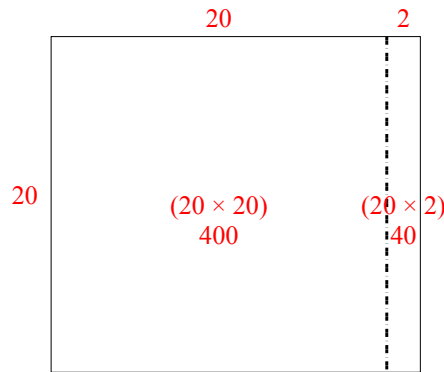


Используйте матрицу для решения задачи.

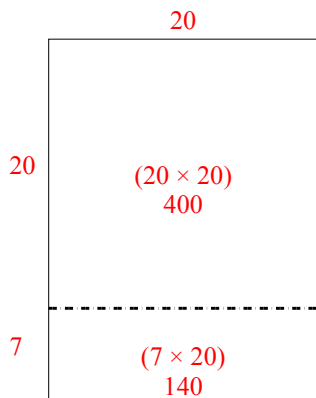
1) $30 \times 28 =$



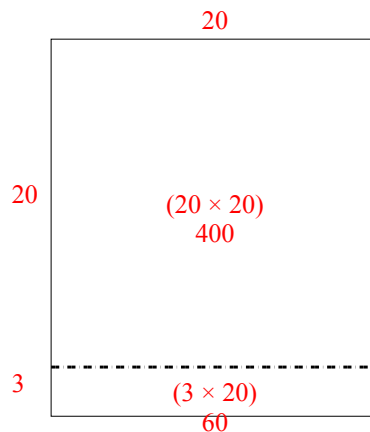
2) $20 \times 22 =$



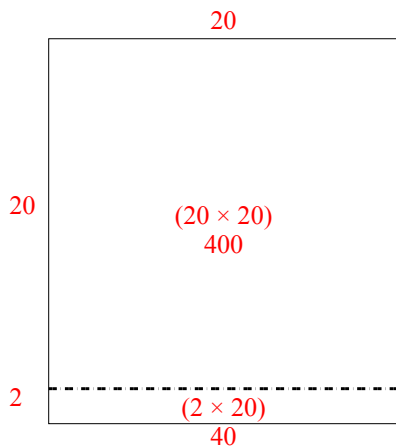
3) $27 \times 20 =$



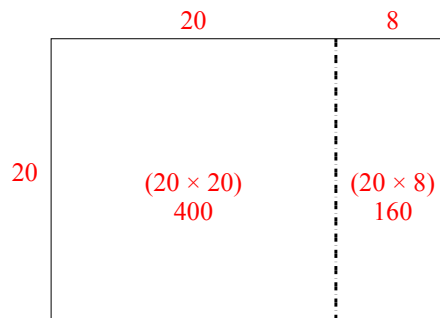
4) $23 \times 20 =$



5) $22 \times 20 =$



6) $20 \times 28 =$



Ответы

1. 840
2. 440
3. 540
4. 460
5. 440
6. 560