





Используйте матрицу для решения задачи.


1) $31 \times 20 =$




2) $24 \times 20 =$




3) $20 \times 28 =$




4) $20 \times 24 =$



5) $22 \times 20 =$



6) $29 \times 20 =$



Ответы

1. _____

2. _____

3. _____

4. _____

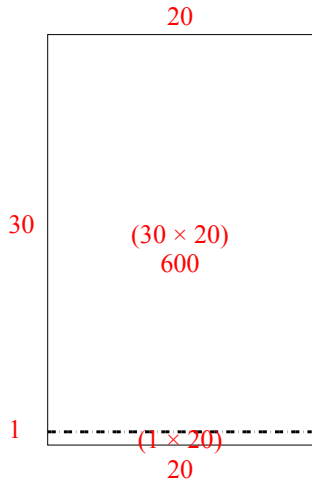
5. _____

6. _____

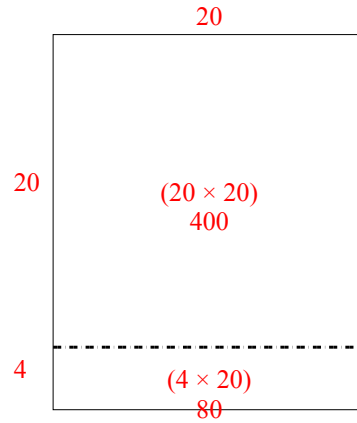


Используйте матрицу для решения задачи.

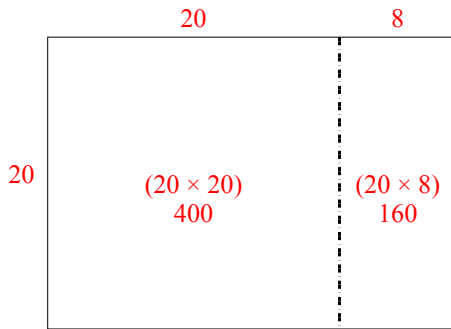
1) $31 \times 20 =$



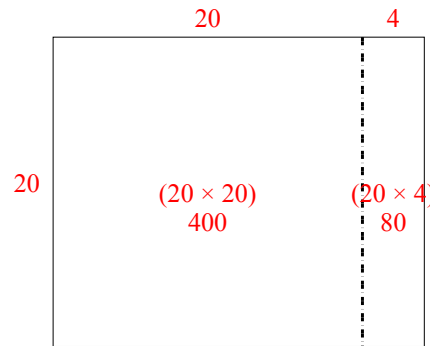
2) $24 \times 20 =$



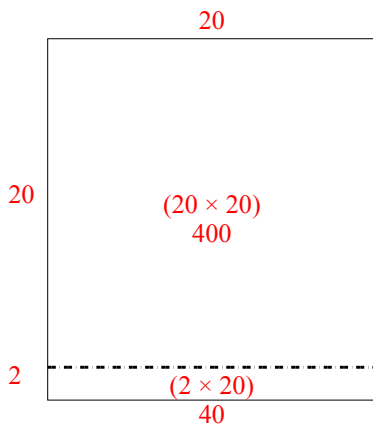
3) $20 \times 28 =$



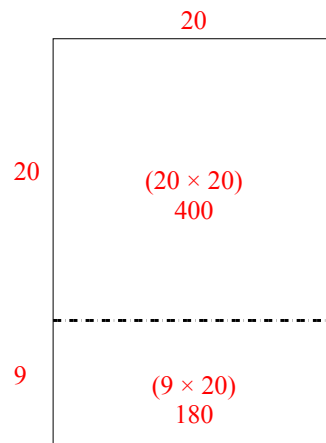
4) $20 \times 24 =$



5) $22 \times 20 =$



6) $29 \times 20 =$



Ответы

1. 620
2. 480
3. 560
4. 480
5. 440
6. 580