





Используйте матрицу для решения задачи.


1) $40 \times 26 =$




2) $30 \times 21 =$




3) $30 \times 29 =$




4) $28 \times 20 =$



5) $24 \times 20 =$



6) $20 \times 23 =$

Ответы

1. _____

2. _____

3. _____

4. _____

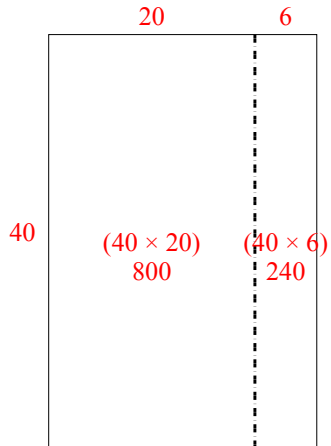
5. _____

6. _____

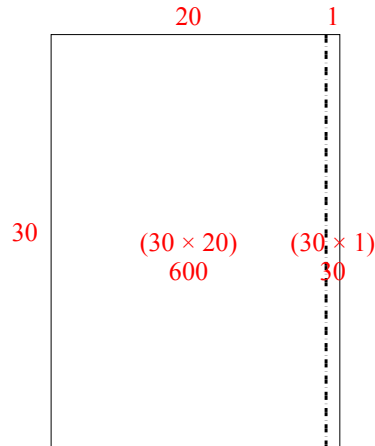


Используйте матрицу для решения задачи.

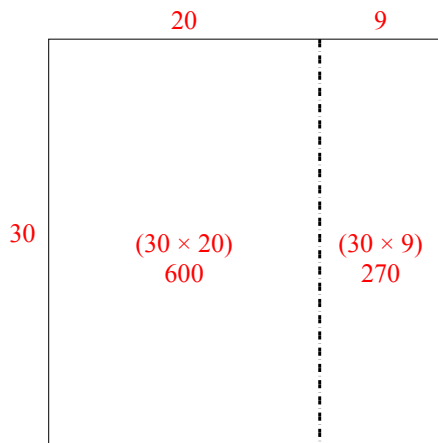
1) $40 \times 26 =$



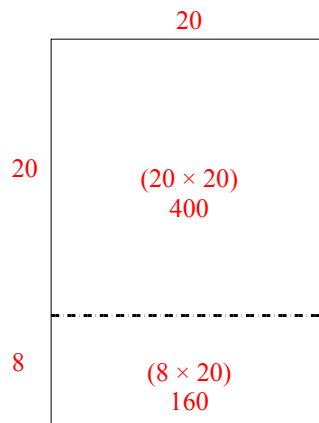
2) $30 \times 21 =$



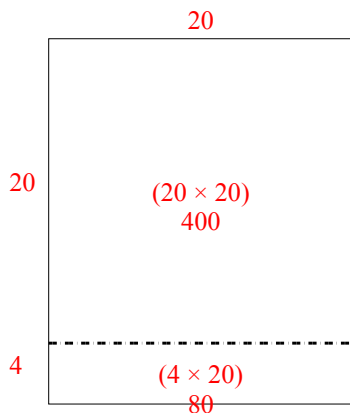
3) $30 \times 29 =$



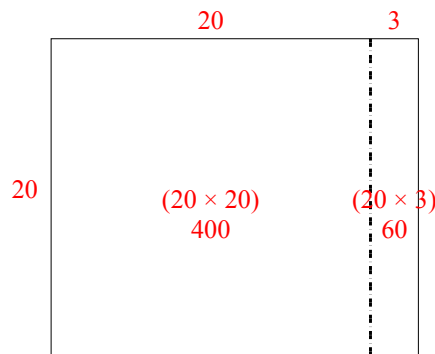
4) $28 \times 20 =$



5) $24 \times 20 =$



6) $20 \times 23 =$



Ответы

1. 1 040
2. 630
3. 870
4. 560
5. 480
6. 460