





Используйте матрицу для решения задачи.

1) $23 \times 20 =$




2) $20 \times 21 =$




3) $20 \times 22 =$




4) $20 \times 26 =$



5) $20 \times 24 =$



6) $29 \times 20 =$



Ответы

1. _____

2. _____

3. _____

4. _____

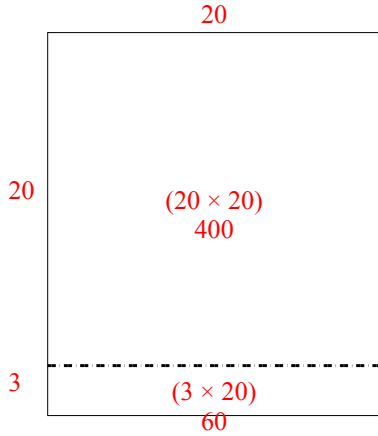
5. _____

6. _____

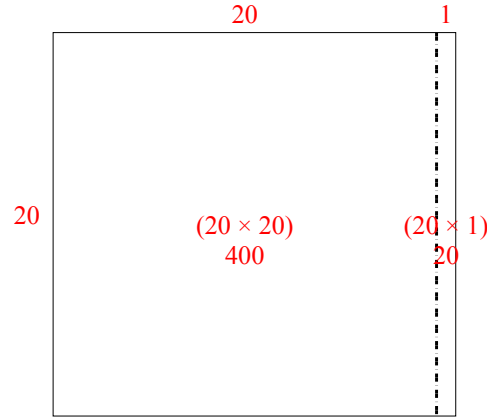


Используйте матрицу для решения задачи.

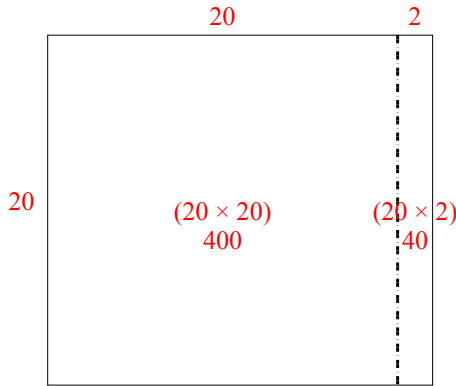
1) $23 \times 20 =$



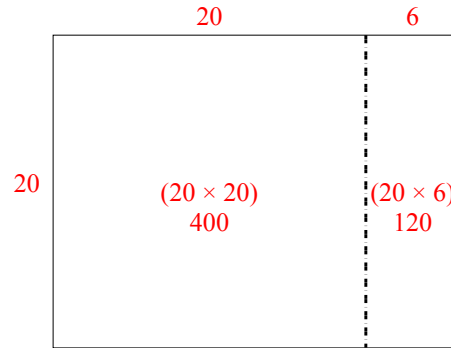
2) $20 \times 21 =$



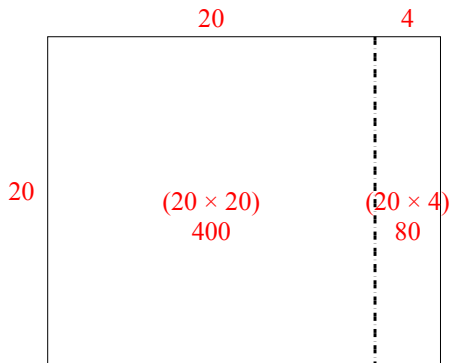
3) $20 \times 22 =$



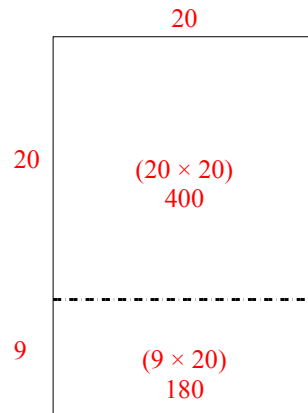
4) $20 \times 26 =$



5) $20 \times 24 =$



6) $29 \times 20 =$



Ответы

1. 460
2. 420
3. 440
4. 520
5. 480
6. 580