





Используйте матрицу для решения задачи.


1) $20 \times 26 =$




2) $20 \times 27 =$



3) $25 \times 20 =$




4) $20 \times 21 =$



5) $29 \times 20 =$



6) $24 \times 20 =$

**Ответы**

1. _____

2. _____

3. _____

4. _____

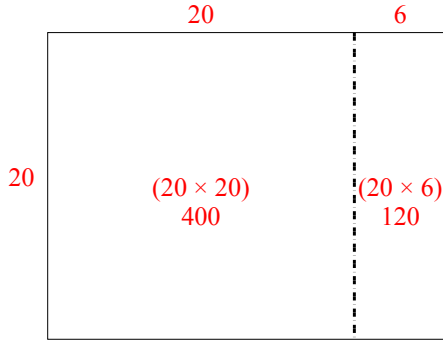
5. _____

6. _____

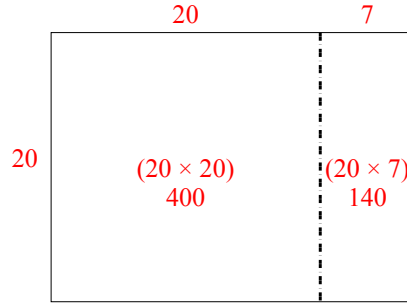


Используйте матрицу для решения задачи.

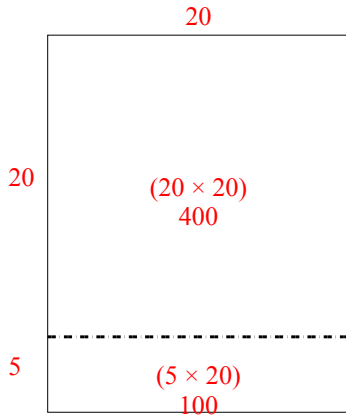
1) $20 \times 26 =$



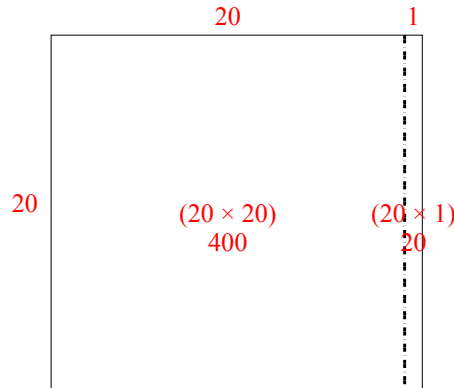
2) $20 \times 27 =$



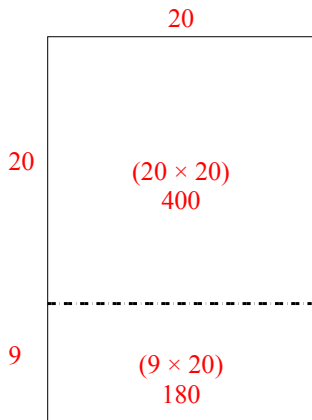
3) $25 \times 20 =$



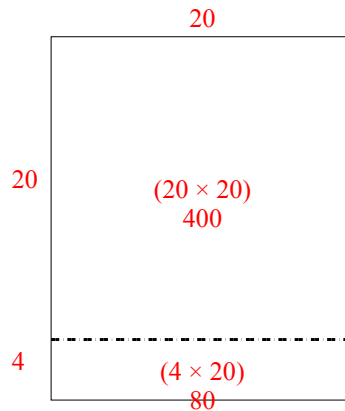
4) $20 \times 21 =$



5) $29 \times 20 =$



6) $24 \times 20 =$



Ответы

1. 520
2. 540
3. 500
4. 420
5. 580
6. 480