





Используйте матрицу для решения задачи.


1) $30 \times 33 =$




2) $28 \times 30 =$



3) $35 \times 20 =$




4) $37 \times 30 =$



5) $22 \times 30 =$



6) $29 \times 20 =$



Ответы

1. _____

2. _____

3. _____

4. _____

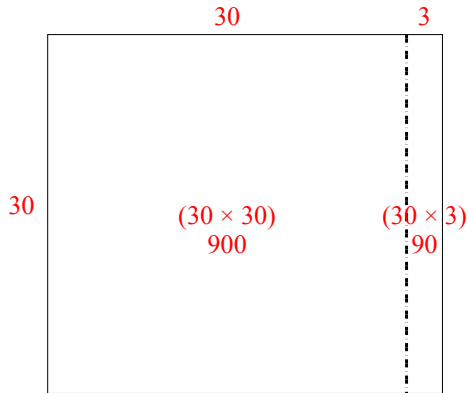
5. _____

6. _____

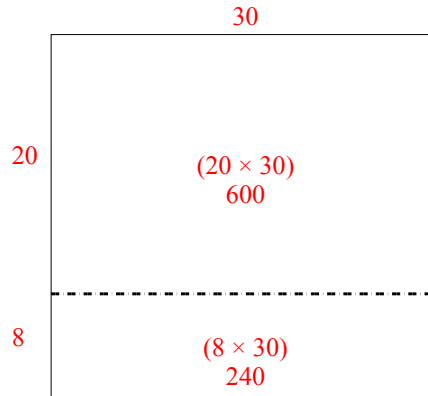


Используйте матрицу для решения задачи.

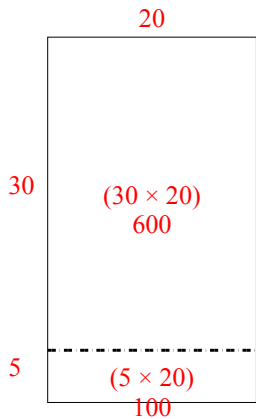
1) $30 \times 33 =$



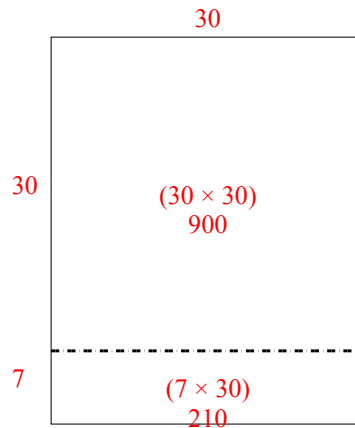
2) $28 \times 30 =$



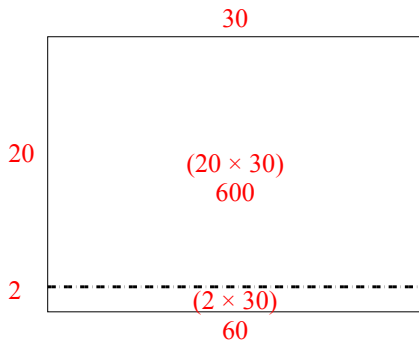
3) $35 \times 20 =$



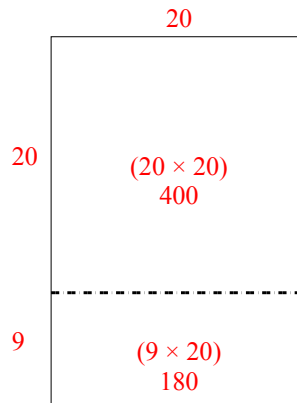
4) $37 \times 30 =$



5) $22 \times 30 =$



6) $29 \times 20 =$



Ответы

1. 990
2. 840
3. 700
4. 1 110
5. 660
6. 580