


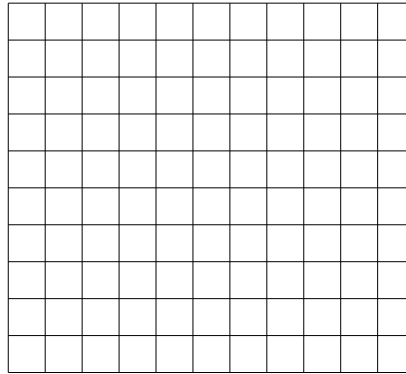


Используйте матрицу для решения задачи.


1) $10 \times 16 =$




2) $10 \times 11 =$




3) $12 \times 10 =$




4) $10 \times 15 =$



5) $16 \times 10 =$



6) $14 \times 10 =$



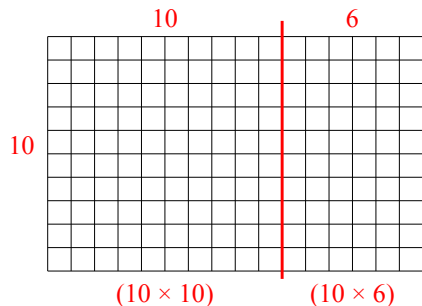
Ответы

- 1. _____
- 2. _____
- 3. _____
- 4. _____
- 5. _____
- 6. _____

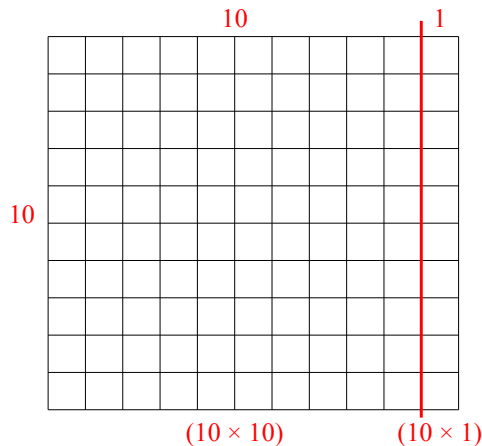


Используйте матрицу для решения задачи.

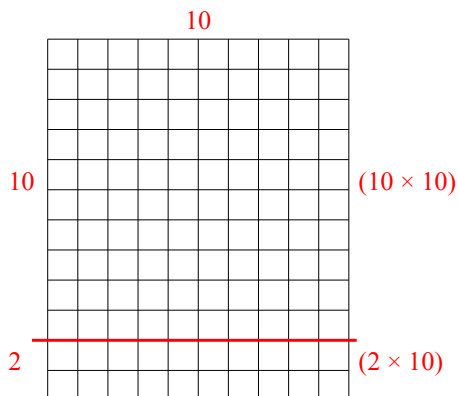
1) $10 \times 16 =$



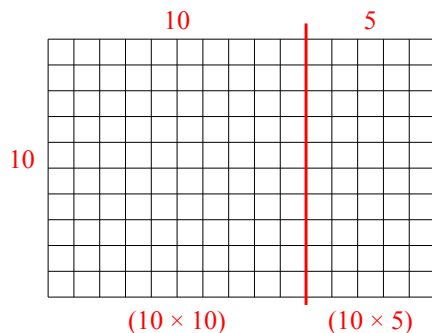
2) $10 \times 11 =$



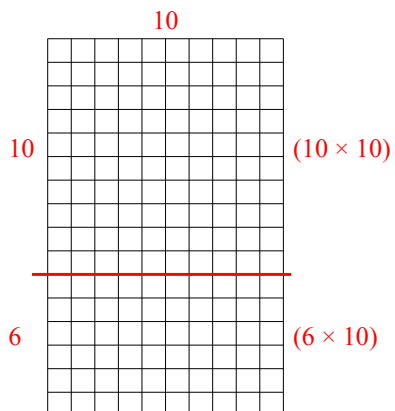
3) $12 \times 10 =$



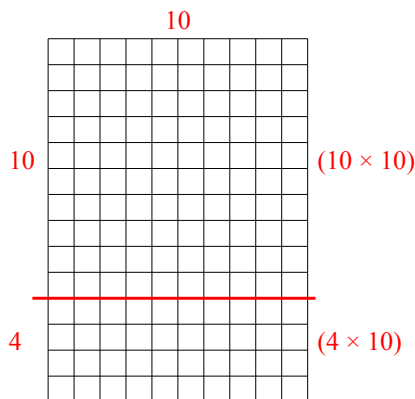
4) $10 \times 15 =$



5) $16 \times 10 =$



6) $14 \times 10 =$



Ответы

1. 160

2. 110

3. 120

4. 150

5. 160

6. 140