





Используйте матрицу для решения задачи.


1) $22 \times 10 =$




2) $15 \times 10 =$




3) $10 \times 14 =$




4) $10 \times 13 =$



5) $18 \times 10 =$



6) $10 \times 16 =$

**Ответы**

1. _____

2. _____

3. _____

4. _____

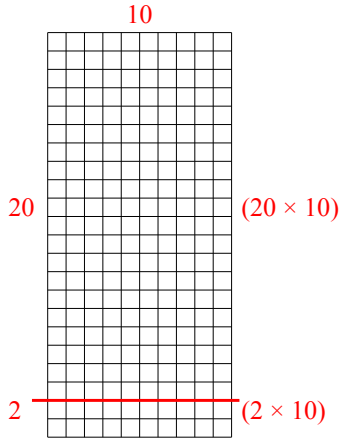
5. _____

6. _____

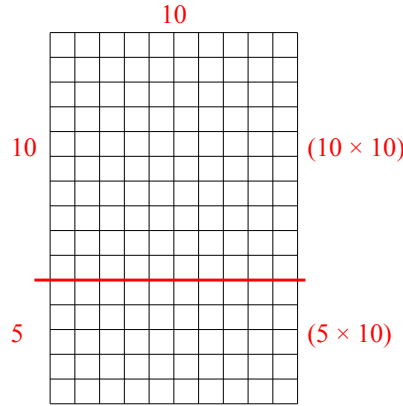


Используйте матрицу для решения задачи.

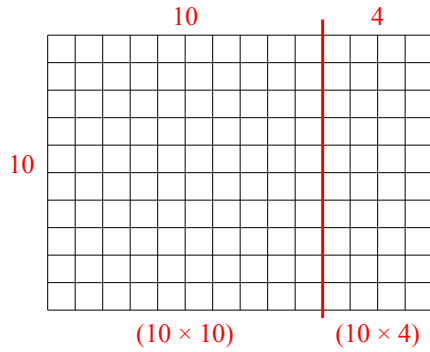
1) $22 \times 10 =$



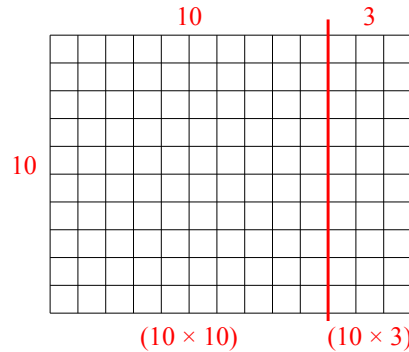
2) $15 \times 10 =$



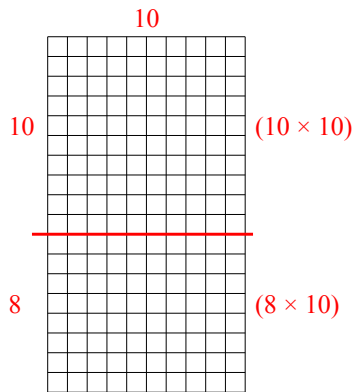
3) $10 \times 14 =$



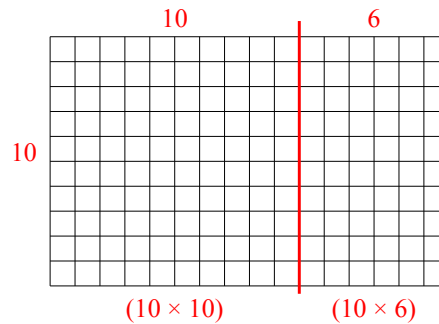
4) $10 \times 13 =$



5) $18 \times 10 =$



6) $10 \times 16 =$



Ответы

1. 220
2. 150
3. 140
4. 130
5. 180
6. 160