





Используйте матрицу для решения задачи.


1)  $27 \times 10 =$




2)  $25 \times 10 =$




3)  $10 \times 14 =$




4)  $19 \times 10 =$



5)  $10 \times 17 =$



6)  $11 \times 10 =$



**Ответы**

1. \_\_\_\_\_

2. \_\_\_\_\_

3. \_\_\_\_\_

4. \_\_\_\_\_

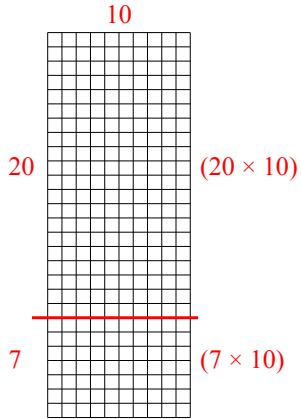
5. \_\_\_\_\_

6. \_\_\_\_\_

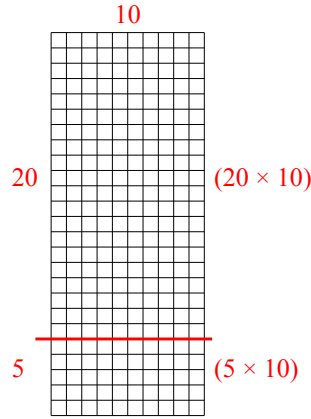


Используйте матрицу для решения задачи.

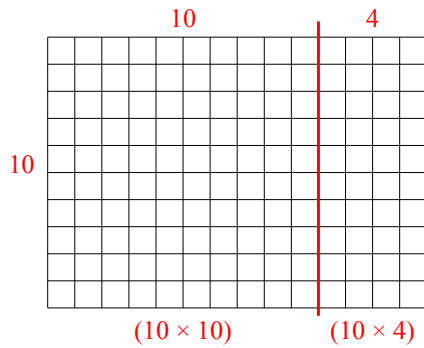
1)  $27 \times 10 =$



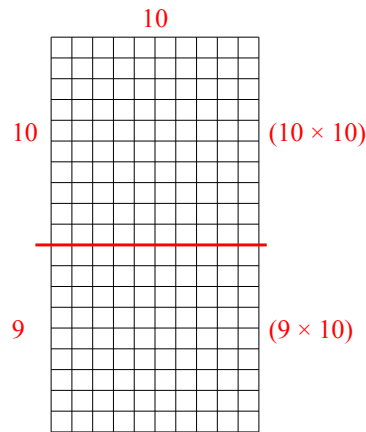
2)  $25 \times 10 =$



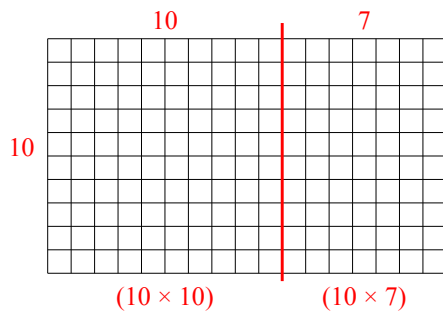
3)  $10 \times 14 =$



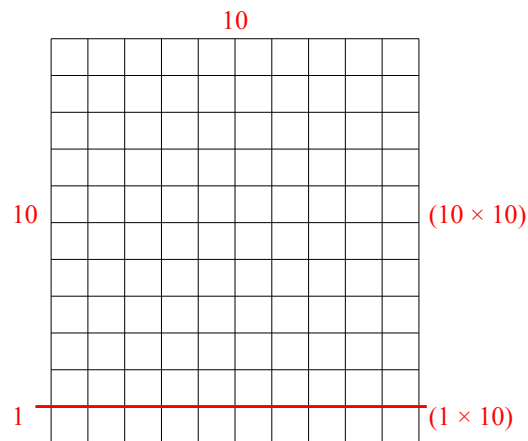
4)  $19 \times 10 =$



5)  $10 \times 17 =$



6)  $11 \times 10 =$



Ответы

1. 270
2. 250
3. 140
4. 190
5. 170
6. 110