





Используйте матрицу для решения задачи.

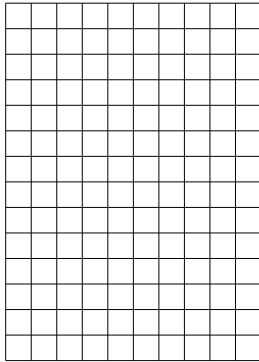
1) $20 \times 29 =$



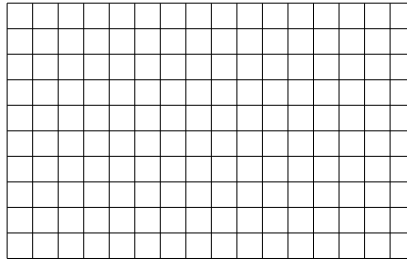
2) $16 \times 10 =$




3) $14 \times 10 =$




4) $10 \times 16 =$



5) $10 \times 15 =$



6) $19 \times 10 =$



Ответы

1. _____

2. _____

3. _____

4. _____

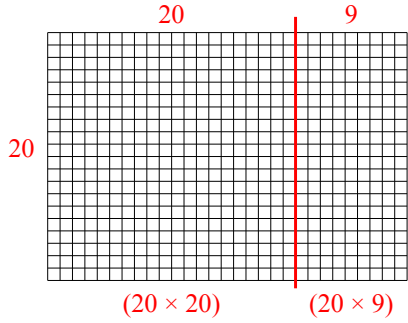
5. _____

6. _____

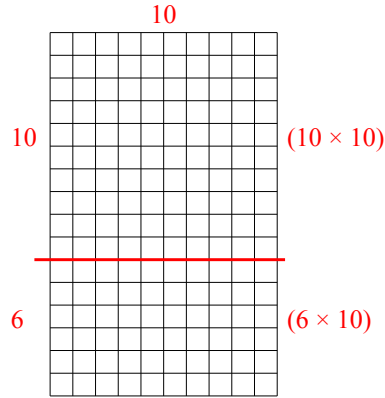


Используйте матрицу для решения задачи.

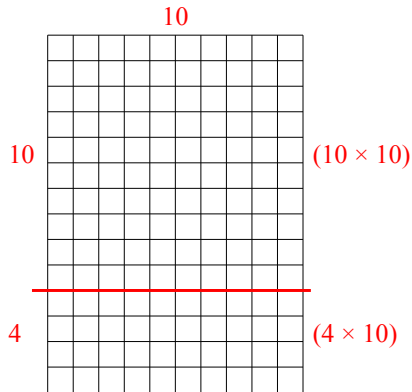
1) $20 \times 29 =$



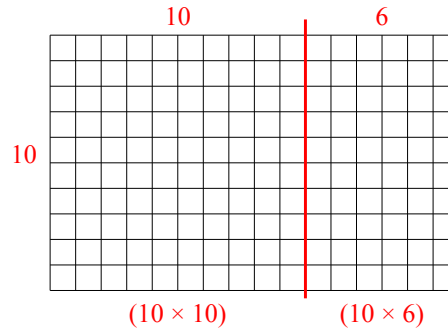
2) $16 \times 10 =$



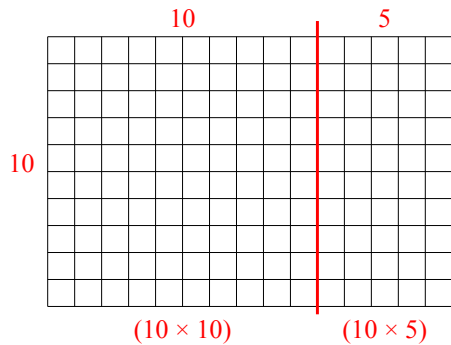
3) $14 \times 10 =$



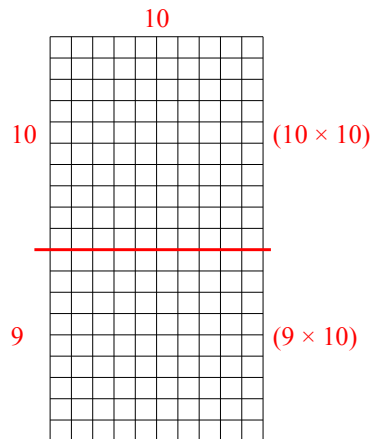
4) $10 \times 16 =$



5) $10 \times 15 =$



6) $19 \times 10 =$



Ответы

1. 580
2. 160
3. 140
4. 160
5. 150
6. 190