





Используйте матрицу для решения задачи.

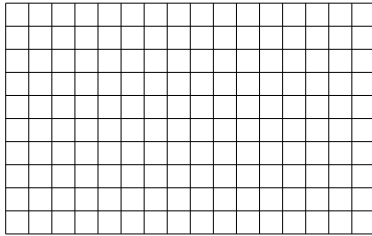
1)  $29 \times 20 =$




2)  $16 \times 20 =$




3)  $10 \times 16 =$




4)  $10 \times 14 =$



5)  $13 \times 10 =$



6)  $10 \times 18 =$

**Ответы**

1. \_\_\_\_\_

2. \_\_\_\_\_

3. \_\_\_\_\_

4. \_\_\_\_\_

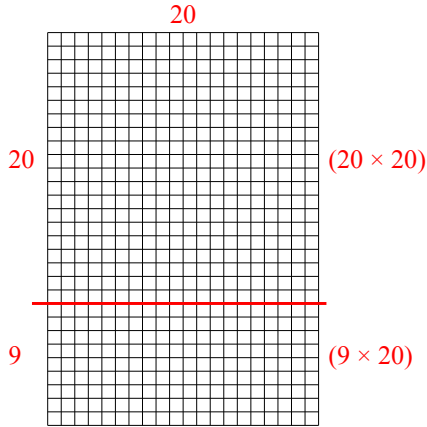
5. \_\_\_\_\_

6. \_\_\_\_\_

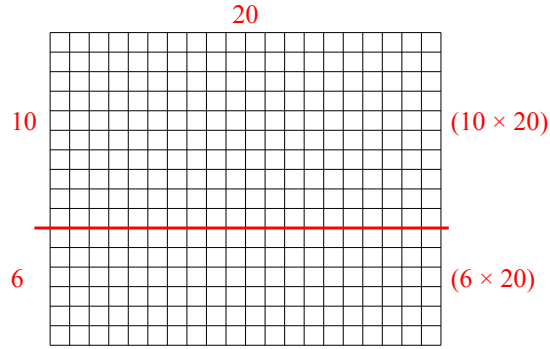


Используйте матрицу для решения задачи.

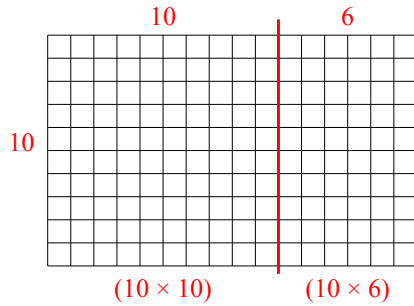
1)  $29 \times 20 =$



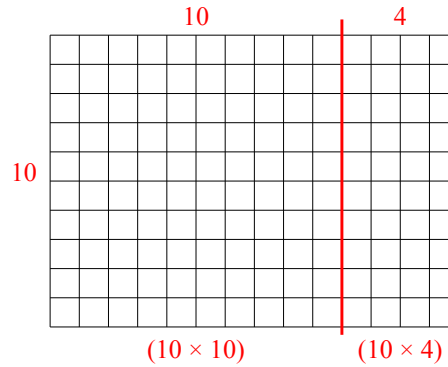
2)  $16 \times 20 =$



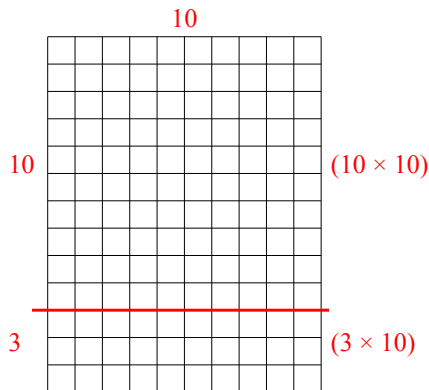
3)  $10 \times 16 =$



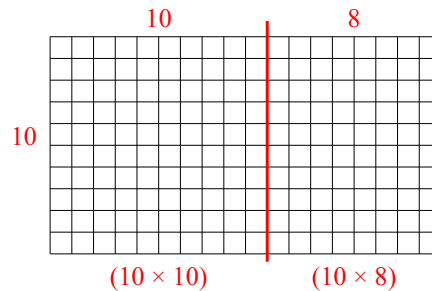
4)  $10 \times 14 =$



5)  $13 \times 10 =$



6)  $10 \times 18 =$



Ответы

1. 580
2. 320
3. 160
4. 140
5. 130
6. 180