


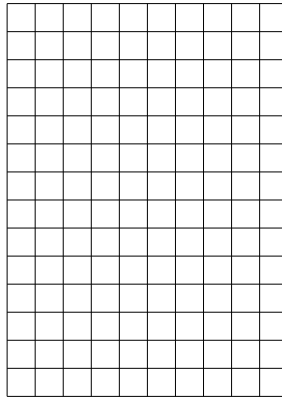


Используйте матрицу для решения задачи.


1) $13 \times 20 =$




2) $14 \times 10 =$




3) $13 \times 10 =$




4) $16 \times 10 =$



5) $10 \times 14 =$



6) $15 \times 10 =$



Ответы

1. _____

2. _____

3. _____

4. _____

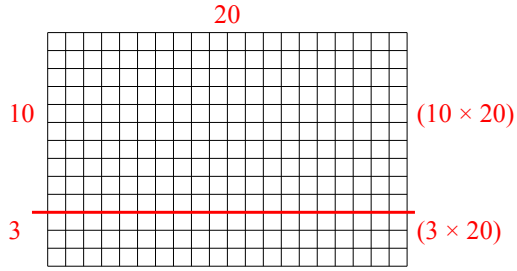
5. _____

6. _____

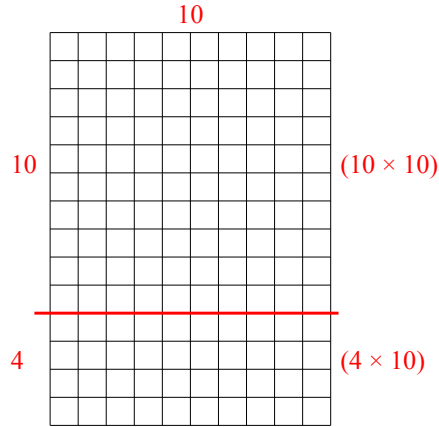


Используйте матрицу для решения задачи.

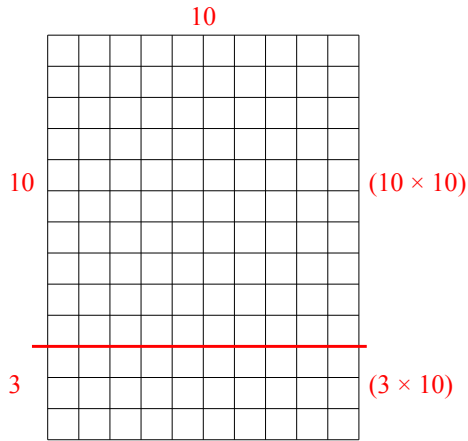
1) $13 \times 20 =$



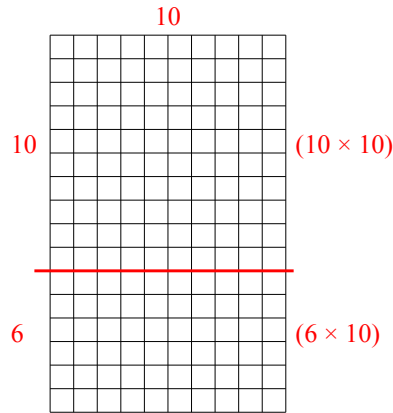
2) $14 \times 10 =$



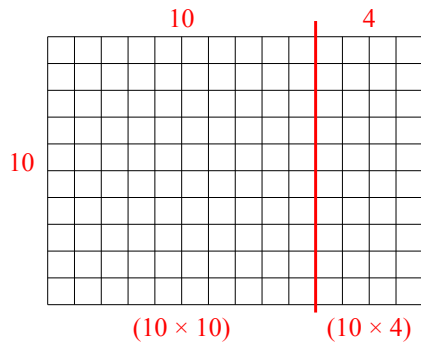
3) $13 \times 10 =$



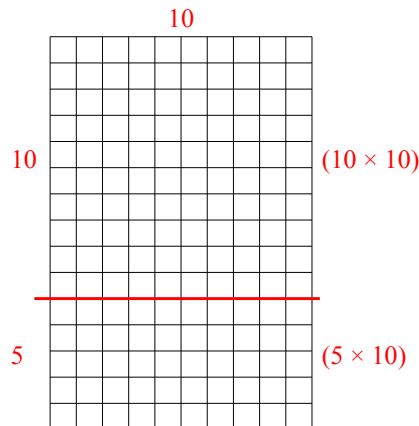
4) $16 \times 10 =$



5) $10 \times 14 =$



6) $15 \times 10 =$



Ответы

1. 260
2. 140
3. 130
4. 160
5. 140
6. 150