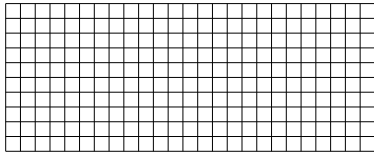





Используйте матрицу для решения задачи.


1) $10 \times 25 =$




2) $20 \times 29 =$




3) $21 \times 20 =$




4) $10 \times 16 =$



5) $10 \times 12 =$



6) $10 \times 13 =$



Ответы

1. _____

2. _____

3. _____

4. _____

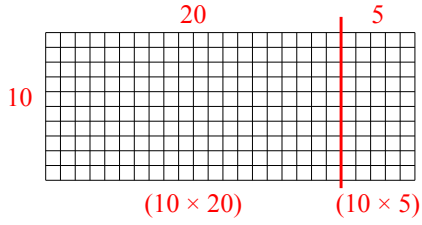
5. _____

6. _____

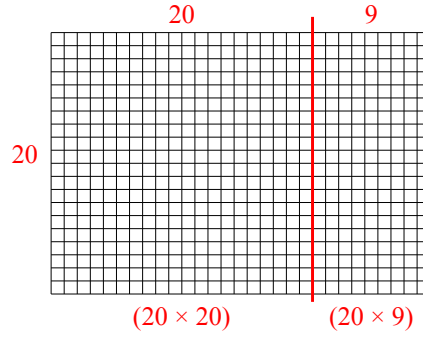


Используйте матрицу для решения задачи.

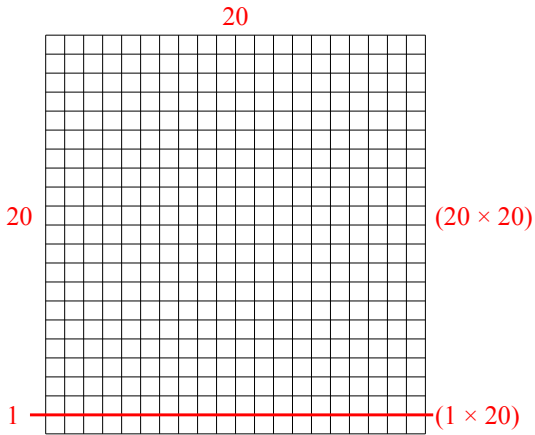
1) $10 \times 25 =$



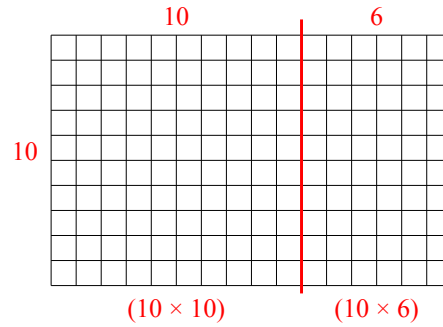
2) $20 \times 29 =$



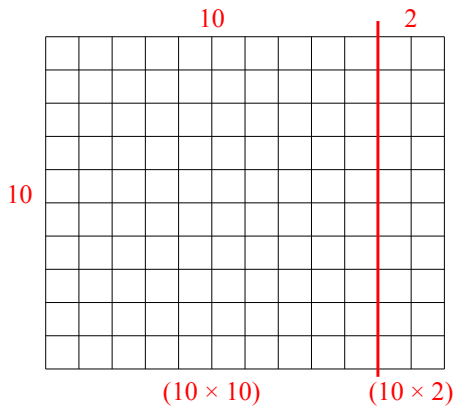
3) $21 \times 20 =$



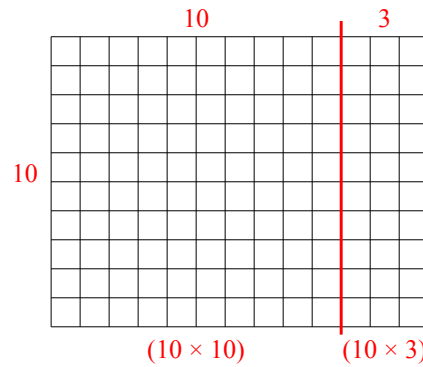
4) $10 \times 16 =$



5) $10 \times 12 =$



6) $10 \times 13 =$



Ответы

1. 250
2. 580
3. 420
4. 160
5. 120
6. 130