





Используйте матрицу для решения задачи.


1)  $20 \times 23 =$




2)  $10 \times 19 =$




3)  $19 \times 10 =$




4)  $10 \times 12 =$



5)  $10 \times 16 =$



6)  $10 \times 15 =$

**Ответы**

1. \_\_\_\_\_

2. \_\_\_\_\_

3. \_\_\_\_\_

4. \_\_\_\_\_

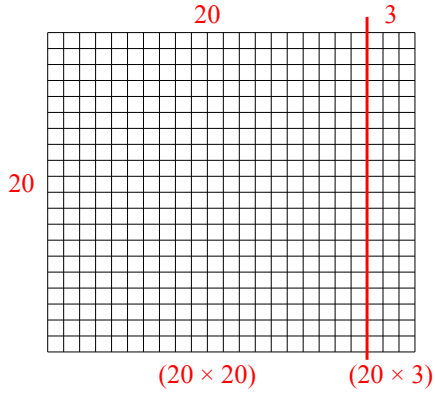
5. \_\_\_\_\_

6. \_\_\_\_\_

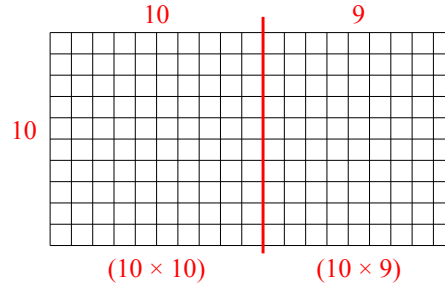


Используйте матрицу для решения задачи.

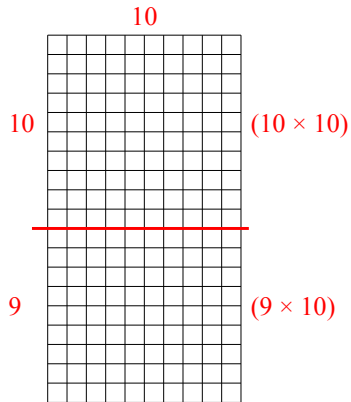
1)  $20 \times 23 =$



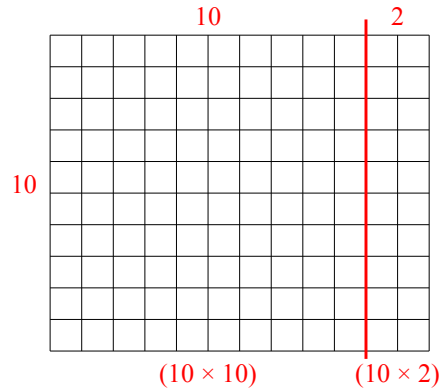
2)  $10 \times 19 =$



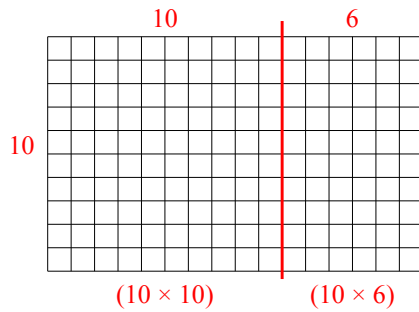
3)  $19 \times 10 =$



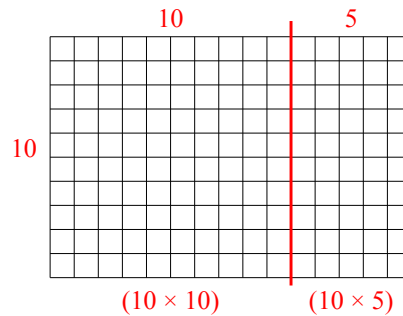
4)  $10 \times 12 =$



5)  $10 \times 16 =$



6)  $10 \times 15 =$



Ответы

1. 460
2. 190
3. 190
4. 120
5. 160
6. 150