


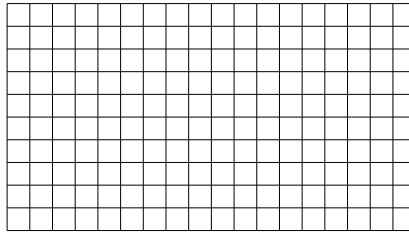


Используйте матрицу для решения задачи.


1) $15 \times 10 =$




2) $10 \times 18 =$




3) $13 \times 10 =$




4) $10 \times 19 =$



5) $14 \times 10 =$



6) $10 \times 13 =$



Ответы

1. _____

2. _____

3. _____

4. _____

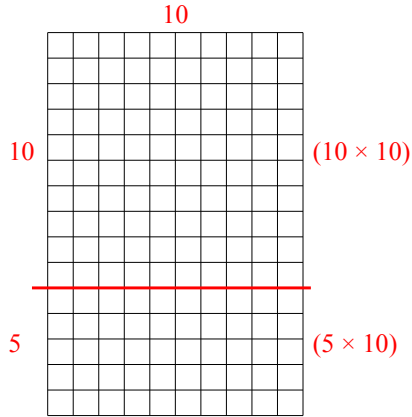
5. _____

6. _____

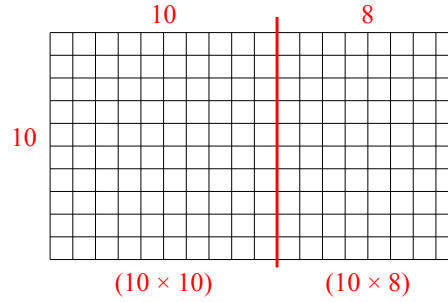


Используйте матрицу для решения задачи.

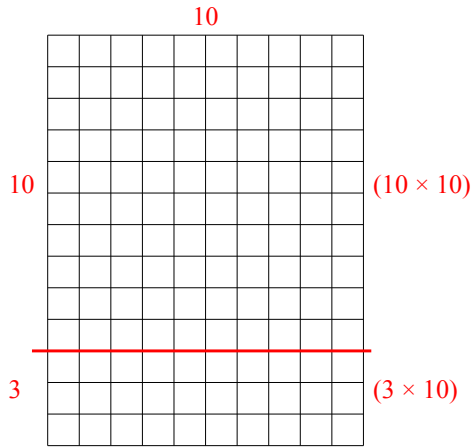
1) $15 \times 10 =$



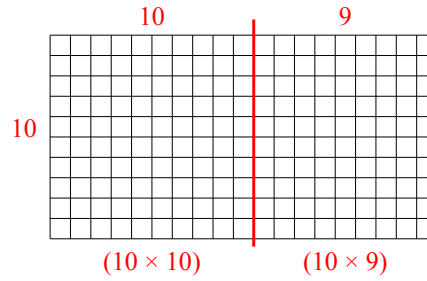
2) $10 \times 18 =$



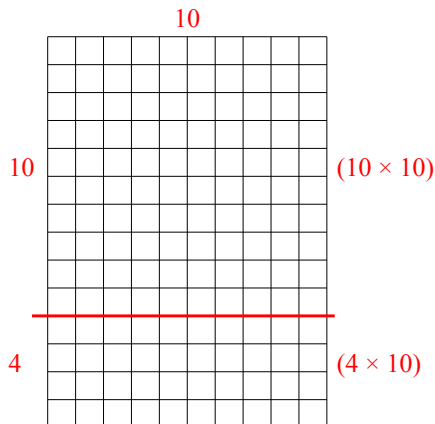
3) $13 \times 10 =$



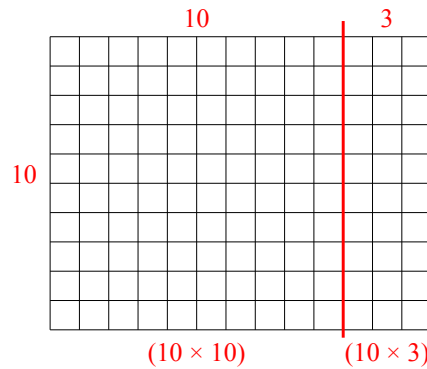
4) $10 \times 19 =$



5) $14 \times 10 =$



6) $10 \times 13 =$



Ответы

1. 150
2. 180
3. 130
4. 190
5. 140
6. 130