





Используйте матрицу для решения задачи.


1) $20 \times 15 =$




2) $17 \times 10 =$




3) $10 \times 14 =$




4) $11 \times 10 =$



5) $10 \times 15 =$



6) $15 \times 10 =$

**Ответы**

1. _____

2. _____

3. _____

4. _____

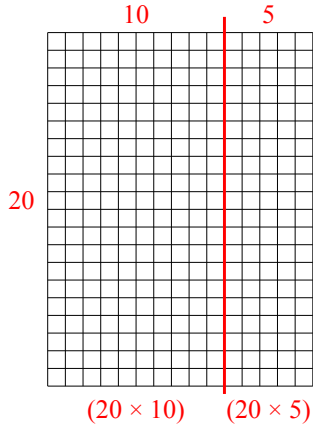
5. _____

6. _____

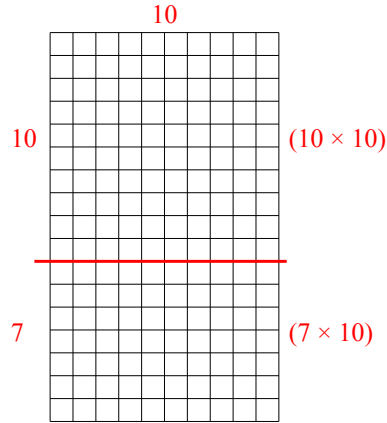


Используйте матрицу для решения задачи.

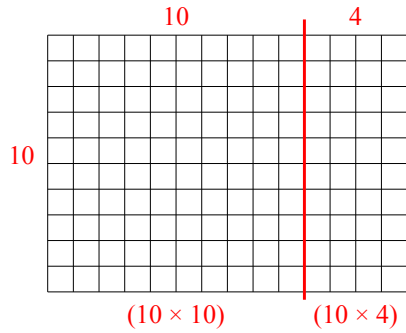
1) $20 \times 15 =$



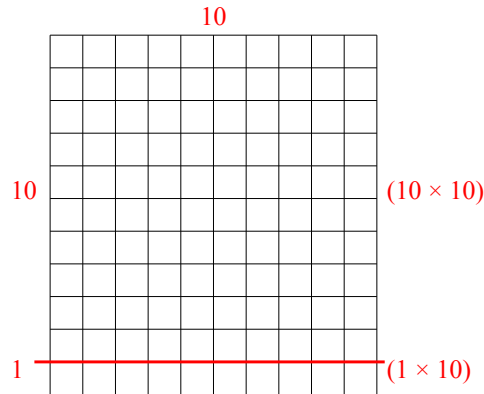
2) $17 \times 10 =$



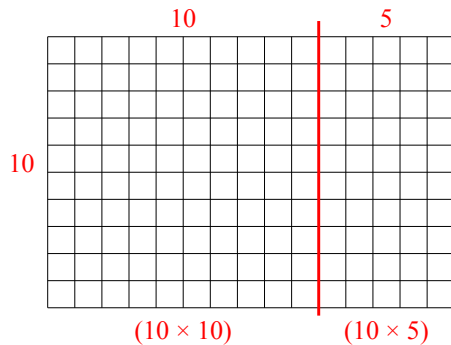
3) $10 \times 14 =$



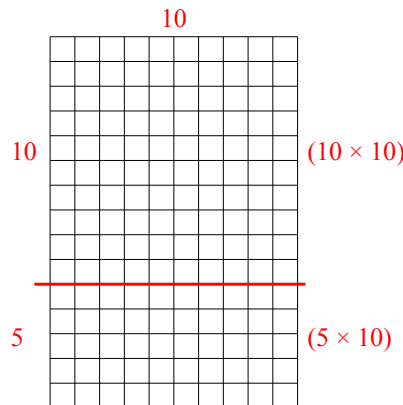
4) $11 \times 10 =$



5) $10 \times 15 =$



6) $15 \times 10 =$



Ответы

1. 300
2. 170
3. 140
4. 110
5. 150
6. 150